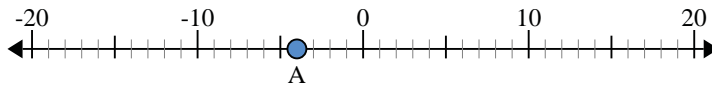


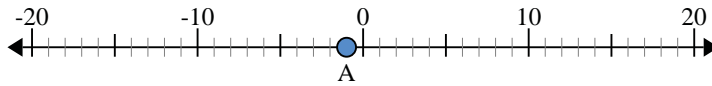


Use the numberlines to find the absolute value.

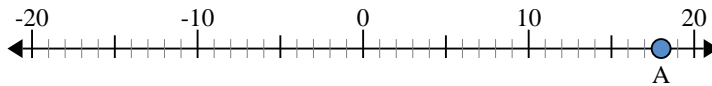
- 1) a. What is the value of 'A'?
- b. How far is 'A' from 0 (absolute value)?



- 2) a. What is the value of 'A'?
- b. How far is 'A' from 0 (absolute value)?



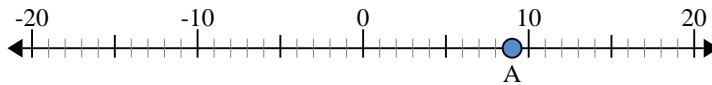
- 3) a. What is the value of 'A'?
- b. How far is 'A' from 0 (absolute value)?



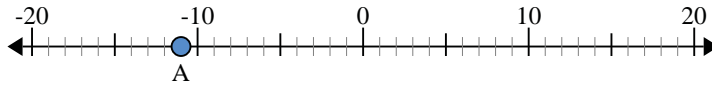
- 4) a. What is the value of 'A'?
- b. How far is 'A' from 0 (absolute value)?



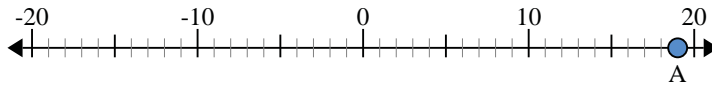
- 5) a. What is the value of 'A'?
- b. How far is 'A' from 0 (absolute value)?



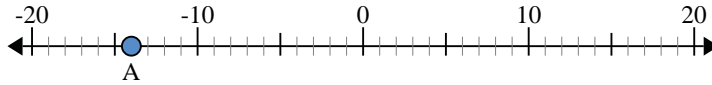
- 6) a. What is the value of 'A'?
- b. How far is 'A' from 0 (absolute value)?



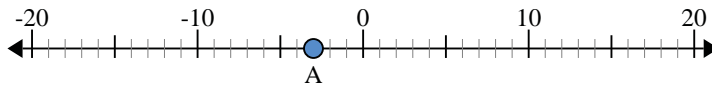
- 7) a. What is the value of 'A'?
- b. How far is 'A' from 0 (absolute value)?



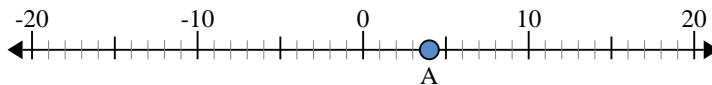
- 8) a. What is the value of 'A'?
- b. How far is 'A' from 0 (absolute value)?



- 9) a. What is the value of 'A'?
- b. How far is 'A' from 0 (absolute value)?



- 10) a. What is the value of 'A'?
- b. How far is 'A' from 0 (absolute value)?



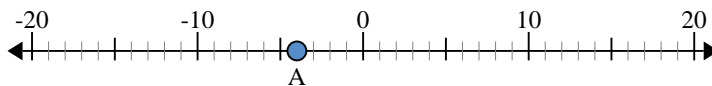
Answers

1. _____
2. _____
3. _____
4. _____
5. _____
6. _____
7. _____
8. _____
9. _____
10. _____

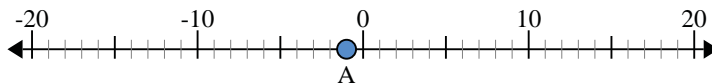


Use the numberlines to find the absolute value.

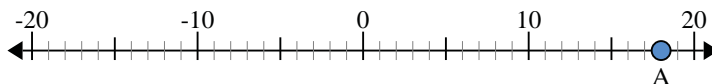
- 1) a. What is the value of 'A'?
b. How far is 'A' from 0 (absolute value)?



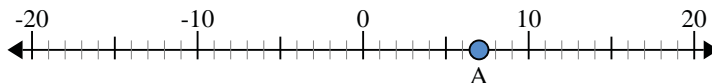
- 2) a. What is the value of 'A'?
b. How far is 'A' from 0 (absolute value)?



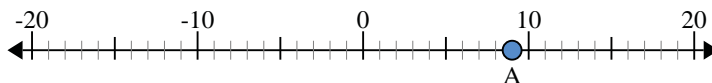
- 3) a. What is the value of 'A'?
b. How far is 'A' from 0 (absolute value)?



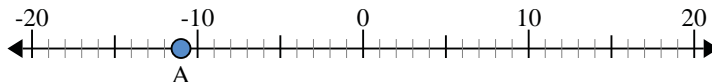
- 4) a. What is the value of 'A'?
b. How far is 'A' from 0 (absolute value)?



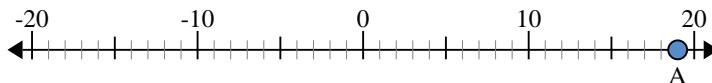
- 5) a. What is the value of 'A'?
b. How far is 'A' from 0 (absolute value)?



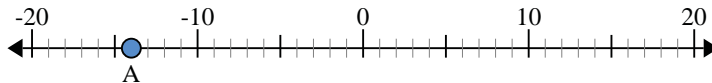
- 6) a. What is the value of 'A'?
b. How far is 'A' from 0 (absolute value)?



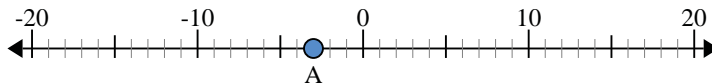
- 7) a. What is the value of 'A'?
b. How far is 'A' from 0 (absolute value)?



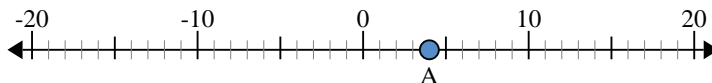
- 8) a. What is the value of 'A'?
b. How far is 'A' from 0 (absolute value)?



- 9) a. What is the value of 'A'?
b. How far is 'A' from 0 (absolute value)?



- 10) a. What is the value of 'A'?
b. How far is 'A' from 0 (absolute value)?



Answers

- | | | |
|-----|------------|-----------|
| 1. | <u>-4</u> | <u>4</u> |
| 2. | <u>-1</u> | <u>1</u> |
| 3. | <u>18</u> | <u>18</u> |
| 4. | <u>7</u> | <u>7</u> |
| 5. | <u>9</u> | <u>9</u> |
| 6. | <u>-11</u> | <u>11</u> |
| 7. | <u>19</u> | <u>19</u> |
| 8. | <u>-14</u> | <u>14</u> |
| 9. | <u>-3</u> | <u>3</u> |
| 10. | <u>4</u> | <u>4</u> |