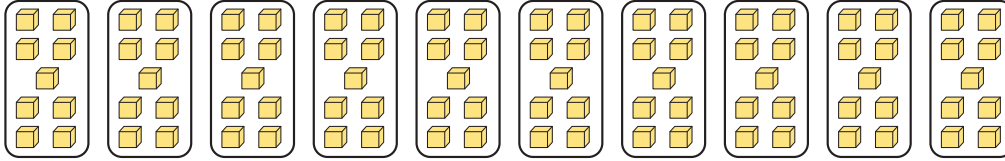




Determine how you would express the groups shown as a multiplication problem.


Answers

Ex)



Ex. 10×9


1)



1. _____

2. _____

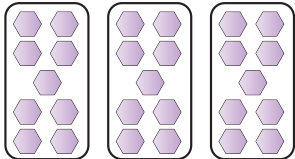
2)



3. _____

4. _____

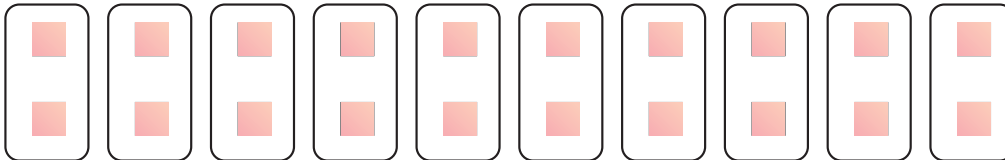
3)



5. _____

6. _____


4)



7. _____


8. _____

5)




9. _____

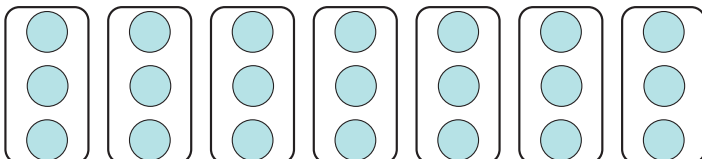
6)




7)



8)



9)





Determine how you would express the groups shown as a multiplication problem.

Answers

Ex)

Ex. 10×9

1)

1. 4×6

2)

2. 8×4

3)

3. 3×9

4)

4. 10×2

5)

5. 3×10

6)

6. 4×7

7)

7. 9×7

8)

8. 7×3

9)

9. 8×3



Determine how you would express the groups shown as a multiplication problem.

Answers

4×6

10×9

3×9

8×4

7×3

9×7


10×2

4×7

3×10


Ex. 10 × 9

Ex)




1. _____

1)




2. _____

2)



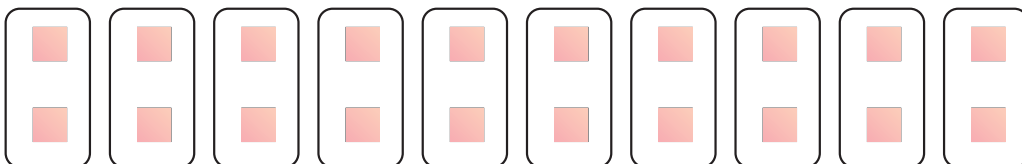
3. _____

3)




4. _____

4)




5. _____

5)




6. _____

6)



7. _____

7)



8. _____

8)

