

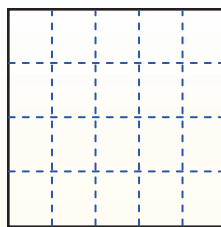
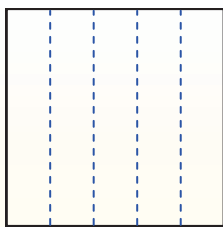
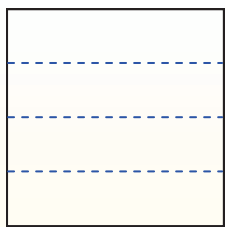


Partition the shape as described and then count to find the number of boxes.


Rows go left and right.

Columns go up and down.


This has 4 rows and 5 columns.
There are 20 boxes total.




1) 4 rows
3 columns




2) 3 rows
5 columns




3) 3 rows
2 columns




4) 3 rows
3 columns




5) 2 rows
4 columns




6) 5 rows
3 columns




7) 4 rows
2 columns



8) 5 rows
5 columns



9) 5 rows
2 columns



Answers

1. _____
2. _____
3. _____
4. _____
5. _____
6. _____
7. _____
8. _____
9. _____

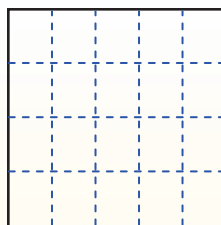
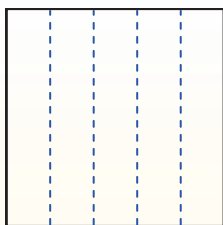
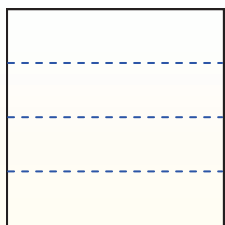


Partition the shape as described and then count to find the number of boxes.


Rows go left and right.

Columns go up and down.


This has 4 rows and 5 columns.
There are 20 boxes total.




1) 4 rows
3 columns




2) 3 rows
5 columns




3) 3 rows
2 columns




4) 3 rows
3 columns




5) 2 rows
4 columns




6) 5 rows
3 columns




7) 4 rows
2 columns



8) 5 rows
5 columns



9) 5 rows
2 columns



Answers

1. 12

2. 15

3. 6

4. 9

5. 8

6. 15

7. 8

8. 25

9. 10