

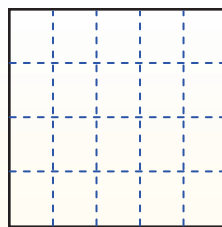
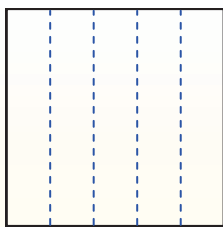
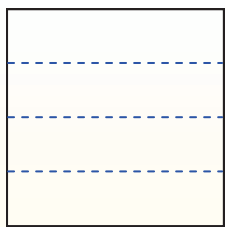


Partition the shape as described and then count to find the number of boxes.


Rows go left and right.

Columns go up and down.


This has 4 rows and 5 columns.
There are 20 boxes total.




1) 5 rows
5 columns




2) 3 rows
2 columns




3) 2 rows
3 columns




4) 4 rows
3 columns




5) 5 rows
3 columns




6) 2 rows
5 columns




7) 2 rows
2 columns



8) 2 rows
4 columns



9) 3 rows
4 columns



Answers

- 1. _____
- 2. _____
- 3. _____
- 4. _____
- 5. _____
- 6. _____
- 7. _____
- 8. _____
- 9. _____

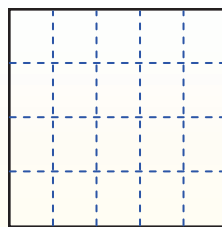
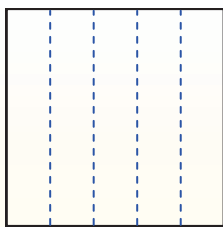
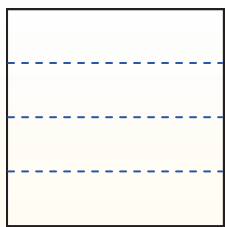


Partition the shape as described and then count to find the number of boxes.


Rows go left and right.

Columns go up and down.


This has 4 rows and 5 columns.
There are 20 boxes total.




1) 5 rows
5 columns




2) 3 rows
2 columns




3) 2 rows
3 columns




4) 4 rows
3 columns




5) 5 rows
3 columns




6) 2 rows
5 columns




7) 2 rows
2 columns



8) 2 rows
4 columns



9) 3 rows
4 columns



Answers

1. 25

2. 6

3. 6

4. 12

5. 15

6. 10

7. 4

8. 8

9. 12