





Use the array provided to solve each problem.


1) $68 \times 52 =$



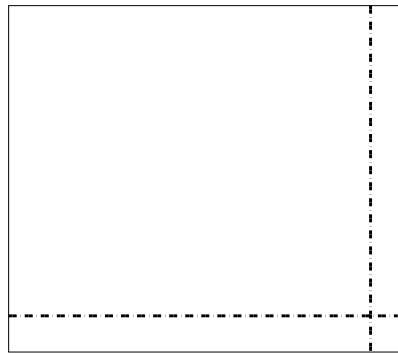
2) $56 \times 46 =$




3) $57 \times 66 =$




4) $67 \times 77 =$



5) $46 \times 58 =$



6) $55 \times 63 =$



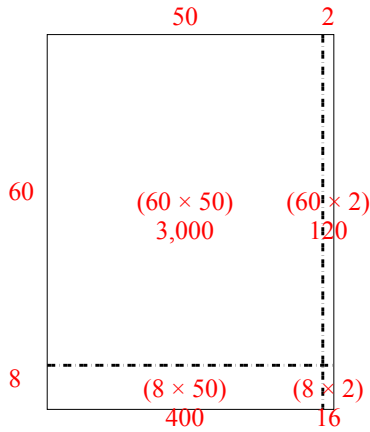
Answers

- 1. _____
- 2. _____
- 3. _____
- 4. _____
- 5. _____
- 6. _____

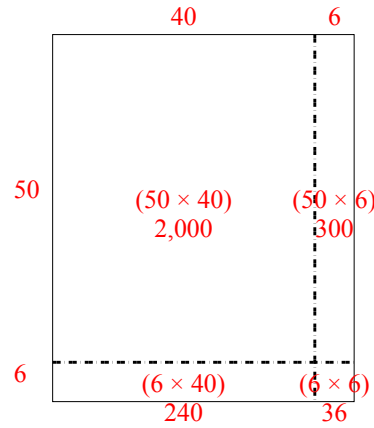


Use the array provided to solve each problem.

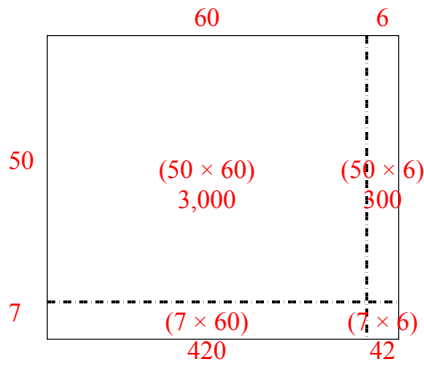
1) $68 \times 52 =$



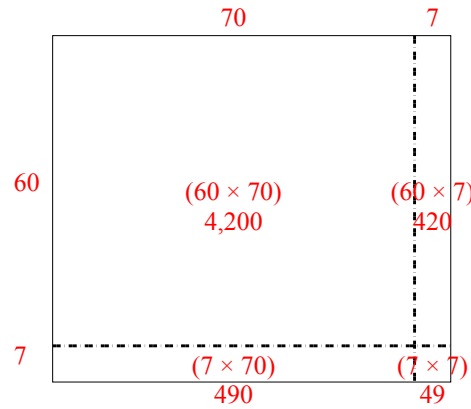
2) $56 \times 46 =$



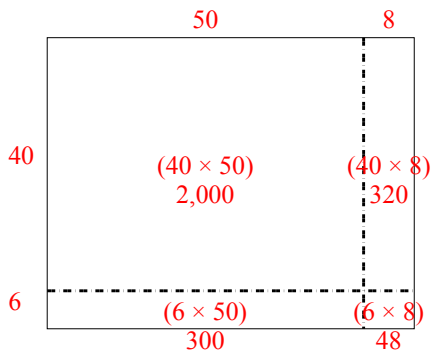
3) $57 \times 66 =$



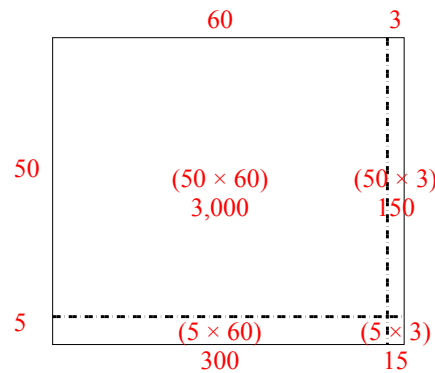
4) $67 \times 77 =$



5) $46 \times 58 =$



6) $55 \times 63 =$



Answers

1. 3,536
2. 2,576
3. 3,762
4. 5,159
5. 2,668
6. 3,465