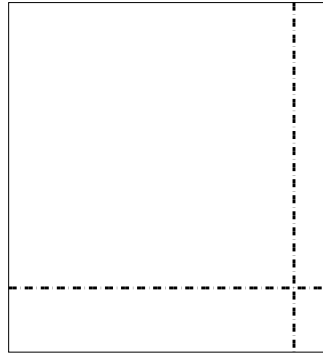
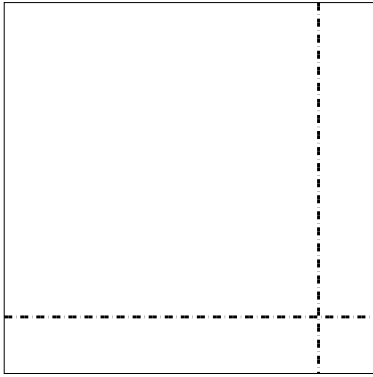




Use the array provided to solve each problem.


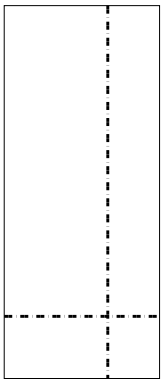
1) $59 \times 59 =$

2) $49 \times 45 =$



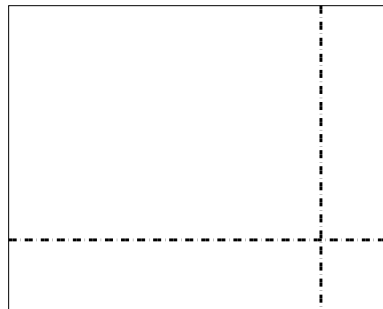

3) $36 \times 15 =$

4) $35 \times 34 =$



5) $38 \times 19 =$

6) $39 \times 49 =$



Answers

1. _____

2. _____

3. _____

4. _____

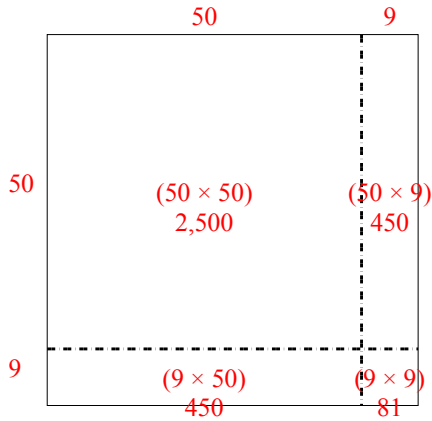
5. _____

6. _____

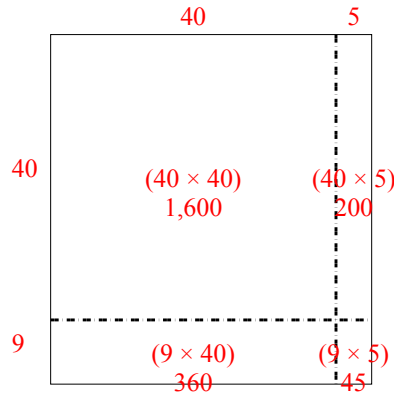


Use the array provided to solve each problem.

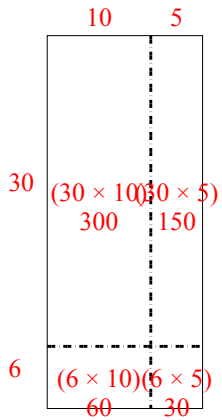
1) $59 \times 59 =$



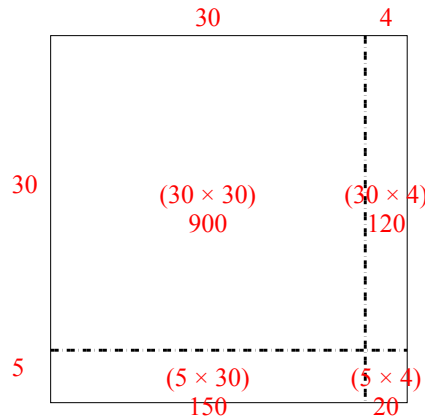
2) $49 \times 45 =$



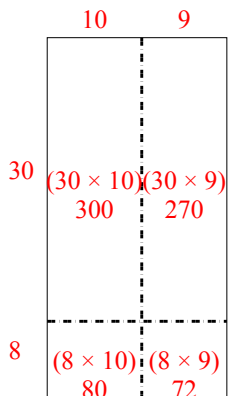
3) $36 \times 15 =$



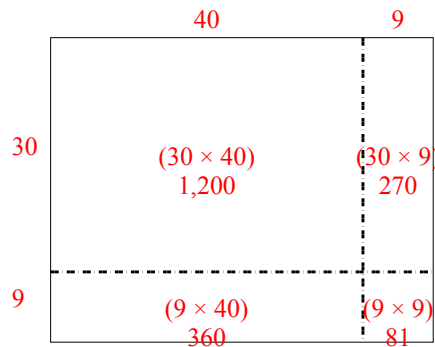
4) $35 \times 34 =$



5) $38 \times 19 =$



6) $39 \times 49 =$



Answers

1. 3,481

2. 2,205

3. 540

4. 1,190

5. 722

6. 1,911