





Use the array provided to solve each problem.


1) $59 \times 45 =$




2) $48 \times 22 =$




3) $48 \times 24 =$



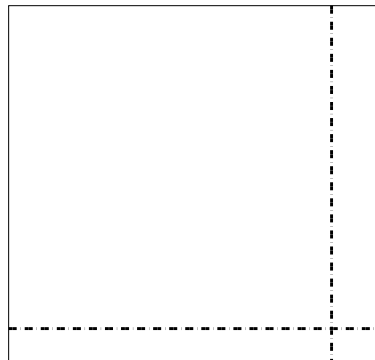
4) $44 \times 44 =$



5) $44 \times 27 =$



6) $33 \times 35 =$



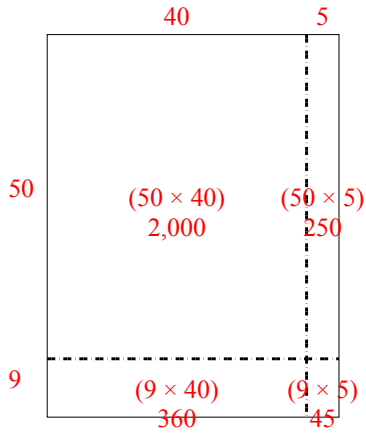
Answers

- 1. _____
- 2. _____
- 3. _____
- 4. _____
- 5. _____
- 6. _____

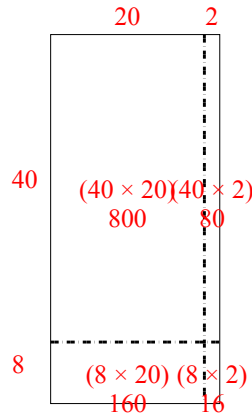


Use the array provided to solve each problem.

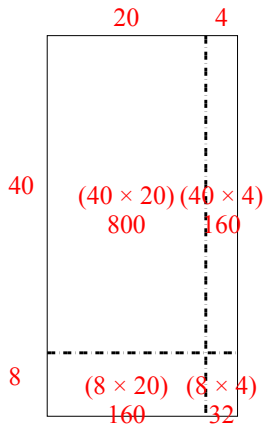
1) $59 \times 45 =$



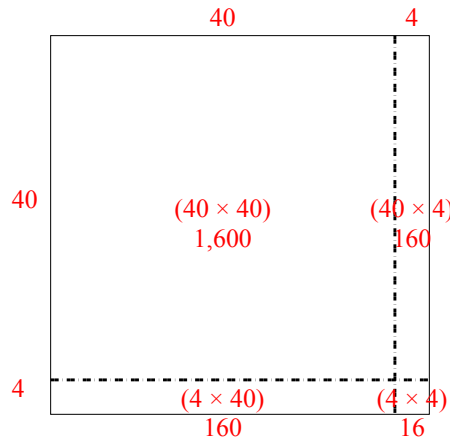
2) $48 \times 22 =$



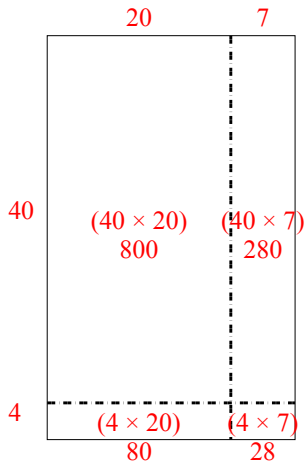
3) $48 \times 24 =$



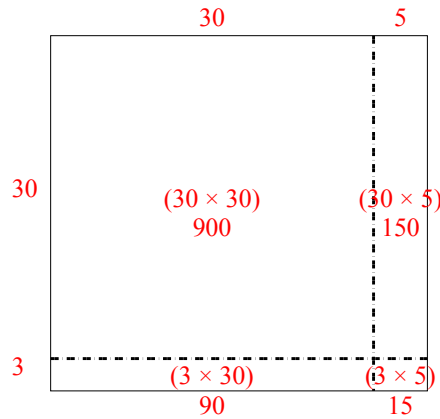
4) $44 \times 44 =$



5) $44 \times 27 =$



6) $33 \times 35 =$



Answers

1. 2,655

2. 1,056

3. 1,152

4. 1,936

5. 1,188

6. 1,155