


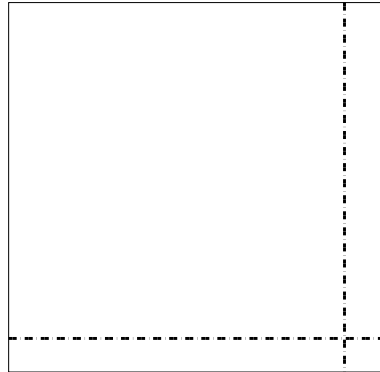


Use the array provided to solve each problem.


1) $66 \times 49 =$



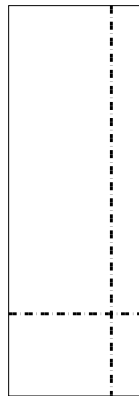
2) $33 \times 34 =$




3) $38 \times 19 =$




4) $38 \times 13 =$



5) $32 \times 26 =$



6) $38 \times 42 =$



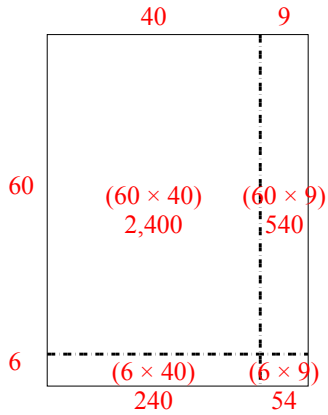
Answers

- 1. _____
- 2. _____
- 3. _____
- 4. _____
- 5. _____
- 6. _____

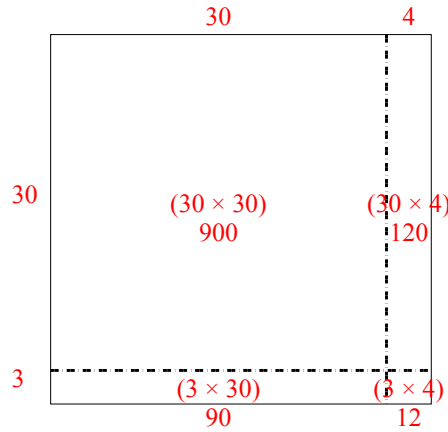


Use the array provided to solve each problem.

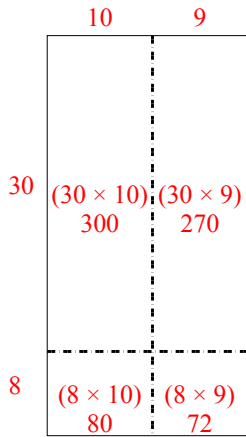
1) $66 \times 49 =$



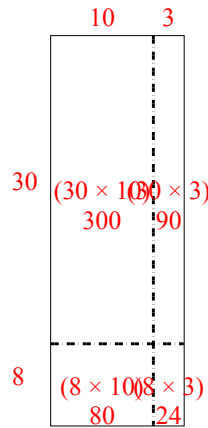
2) $33 \times 34 =$



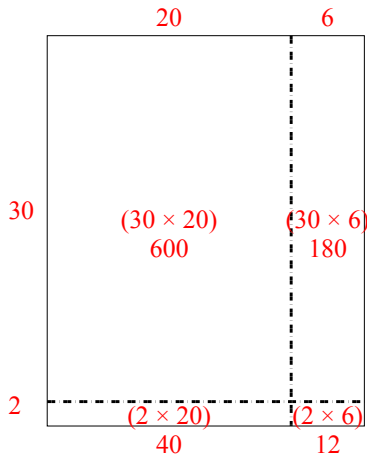
3) $38 \times 19 =$



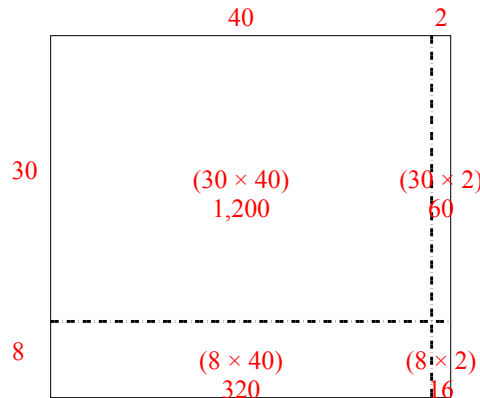
4) $38 \times 13 =$



5) $32 \times 26 =$



6) $38 \times 42 =$



Answers

1. 3,234

2. 1,122

3. 722

4. 494

5. 832

6. 1,596