





Use the array provided to solve each problem.


1) $30 \times 22 =$




2) $20 \times 29 =$




3) $20 \times 22 =$




4) $24 \times 20 =$



5) $27 \times 20 =$



6) $20 \times 27 =$



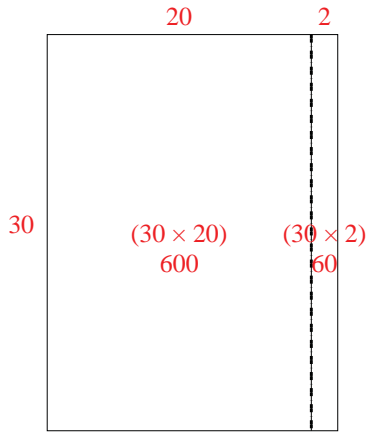
Answers

- 1. _____
- 2. _____
- 3. _____
- 4. _____
- 5. _____
- 6. _____

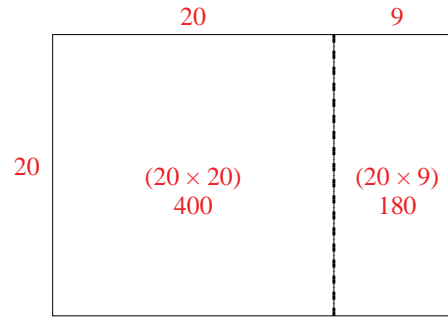


Use the array provided to solve each problem.

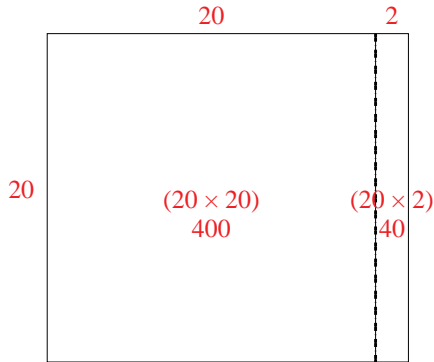
1) $30 \times 22 =$



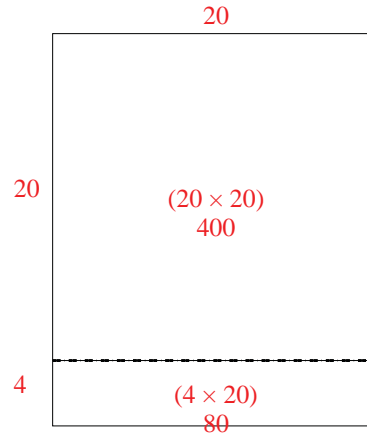
2) $20 \times 29 =$



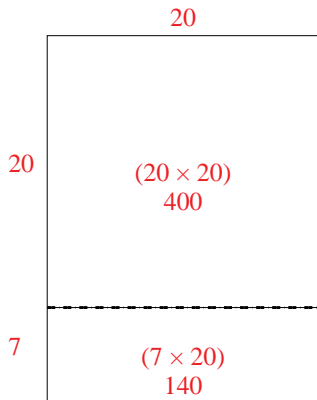
3) $20 \times 22 =$



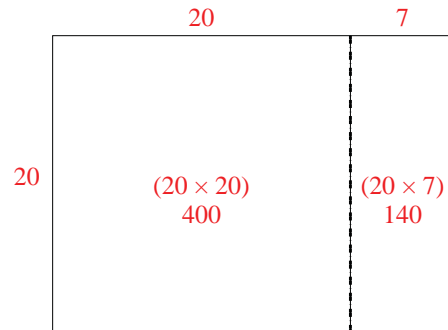
4) $24 \times 20 =$



5) $27 \times 20 =$



6) $20 \times 27 =$




Answers

1. 660
2. 580
3. 440
4. 480
5. 540
6. 540




Use the array provided to solve each problem.


1) $36 \times 30 =$




2) $28 \times 30 =$




3) $27 \times 20 =$




4) $20 \times 28 =$



5) $20 \times 29 =$



6) $22 \times 20 =$



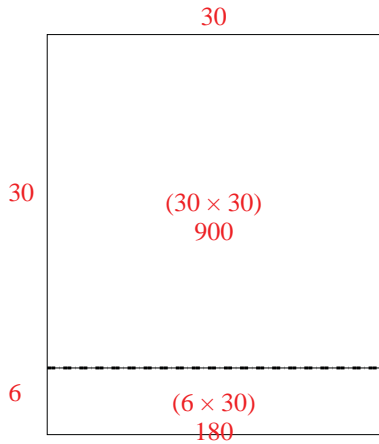
Answers

- 1. _____
- 2. _____
- 3. _____
- 4. _____
- 5. _____
- 6. _____

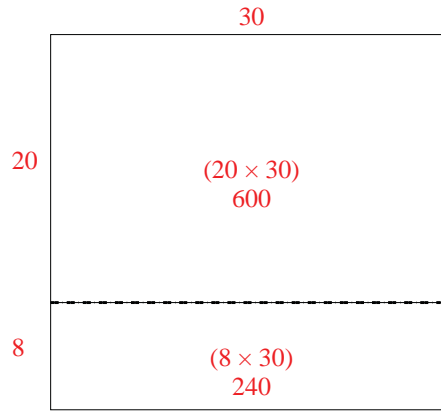


Use the array provided to solve each problem.

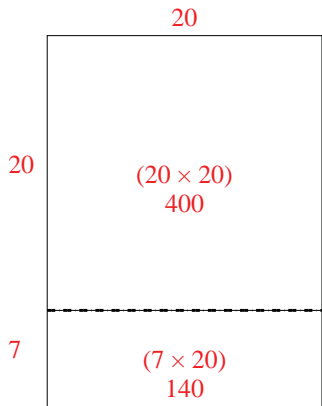
1) $36 \times 30 =$



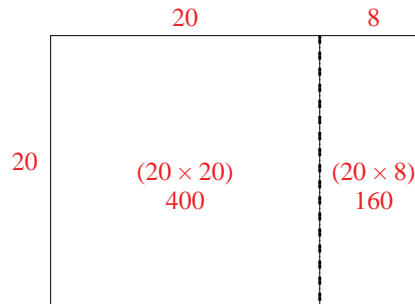
2) $28 \times 30 =$



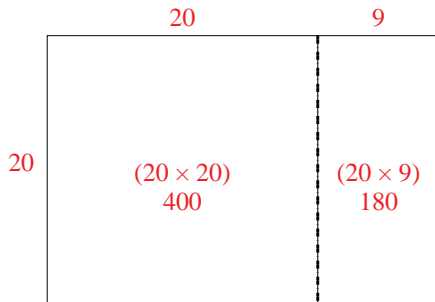
3) $27 \times 20 =$



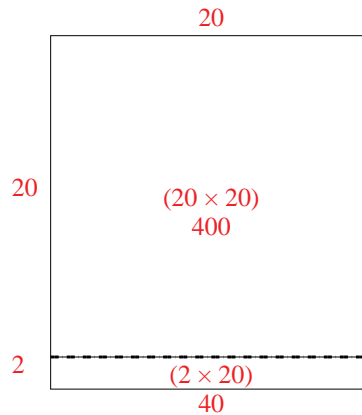
4) $20 \times 28 =$



5) $20 \times 29 =$



6) $22 \times 20 =$




Answers

1. 1,080
2. 840
3. 540
4. 560
5. 580
6. 440




Use the array provided to solve each problem.


1) $30 \times 26 =$




2) $37 \times 20 =$




3) $20 \times 22 =$




4) $25 \times 20 =$



5) $21 \times 20 =$



6) $20 \times 21 =$



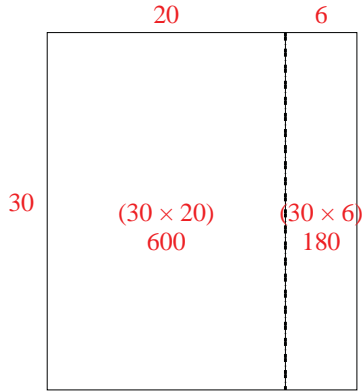
Answers

- 1. _____
- 2. _____
- 3. _____
- 4. _____
- 5. _____
- 6. _____

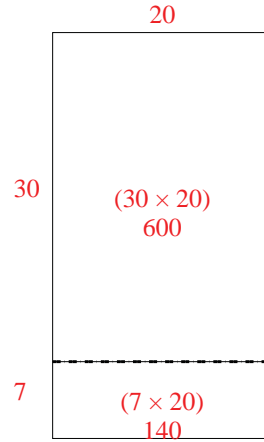


Use the array provided to solve each problem.

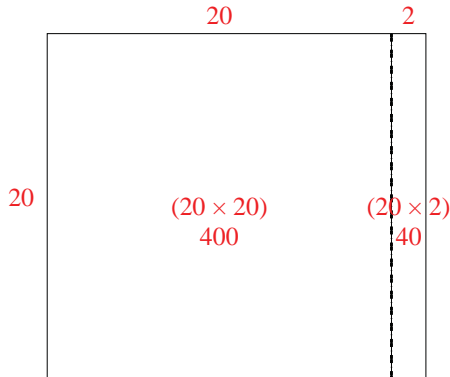
1) $30 \times 26 =$



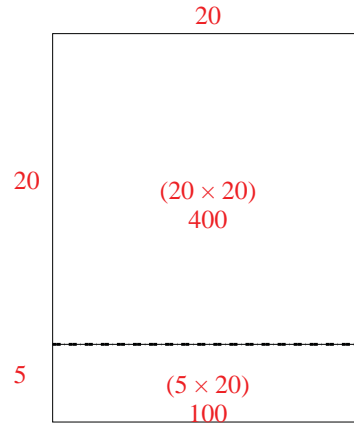
2) $37 \times 20 =$



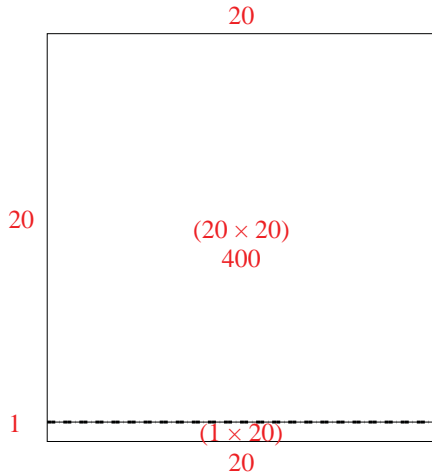
3) $20 \times 22 =$



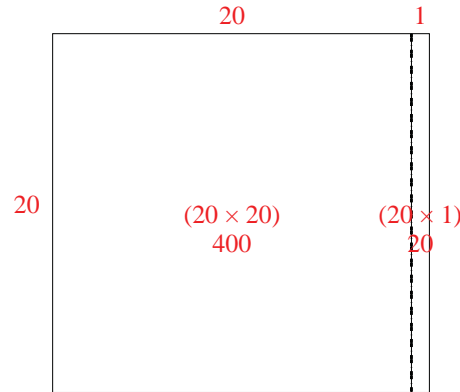
4) $25 \times 20 =$



5) $21 \times 20 =$



6) $20 \times 21 =$



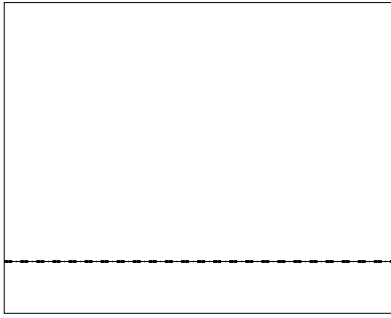
Answers

1. 780
2. 740
3. 440
4. 500
5. 420
6. 420




Use the array provided to solve each problem.


1) $24 \times 30 =$




2) $20 \times 33 =$



3) $30 \times 21 =$




4) $22 \times 20 =$



5) $20 \times 28 =$



6) $20 \times 22 =$



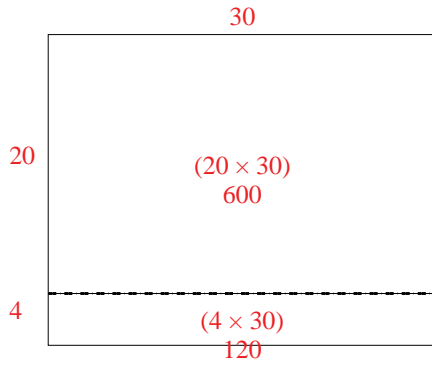
Answers

- 1. _____
- 2. _____
- 3. _____
- 4. _____
- 5. _____
- 6. _____

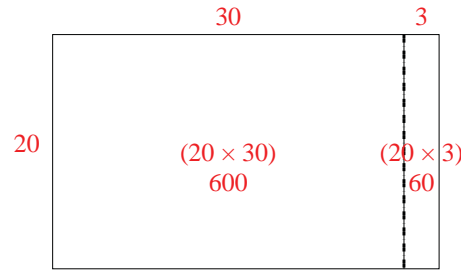


Use the array provided to solve each problem.

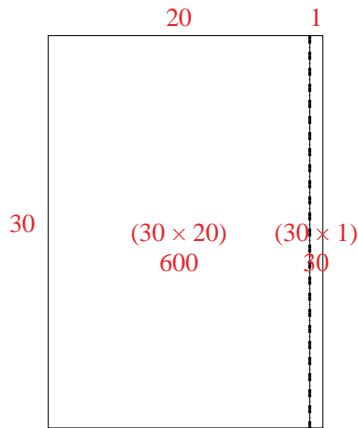
1) $24 \times 30 =$



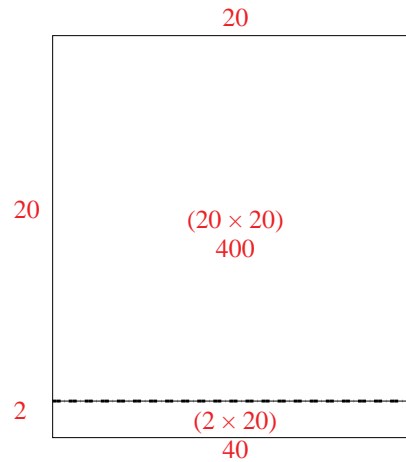
2) $20 \times 33 =$



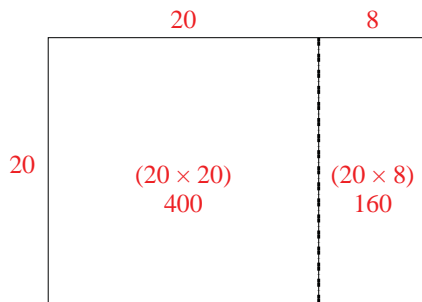
3) $30 \times 21 =$



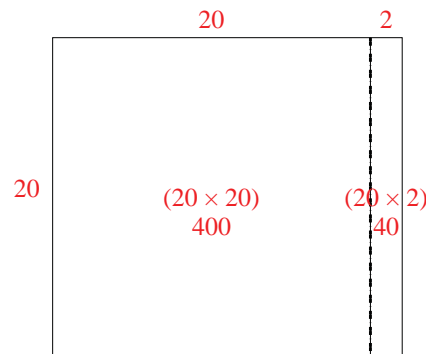
4) $22 \times 20 =$



5) $20 \times 28 =$



6) $20 \times 22 =$




Answers

1. 720
2. 660
3. 630
4. 440
5. 560
6. 440




Use the array provided to solve each problem.


1) $30 \times 29 =$




2) $27 \times 20 =$




3) $24 \times 20 =$




4) $20 \times 26 =$



5) $20 \times 24 =$



6) $20 \times 25 =$



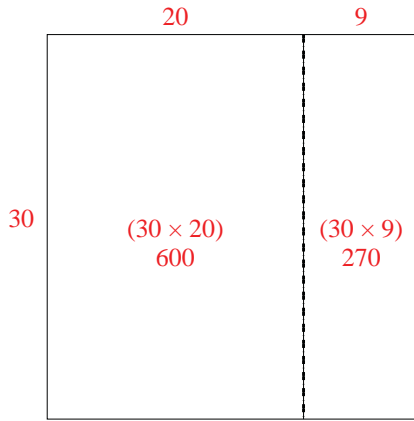
Answers

- 1. _____
- 2. _____
- 3. _____
- 4. _____
- 5. _____
- 6. _____

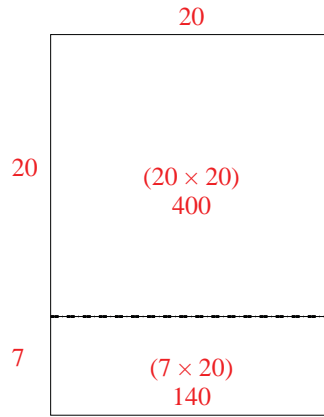


Use the array provided to solve each problem.

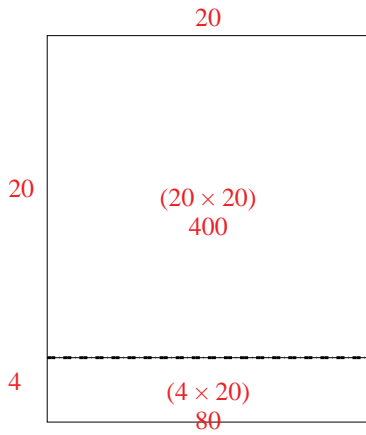
1) $30 \times 29 =$



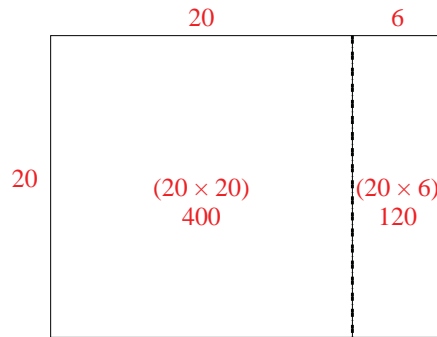
2) $27 \times 20 =$



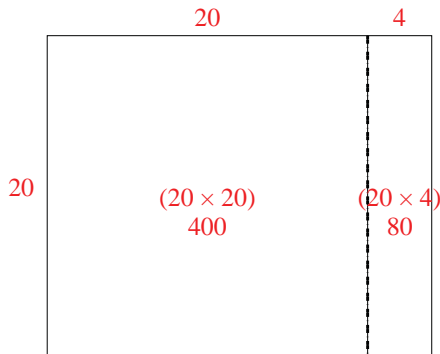
3) $24 \times 20 =$



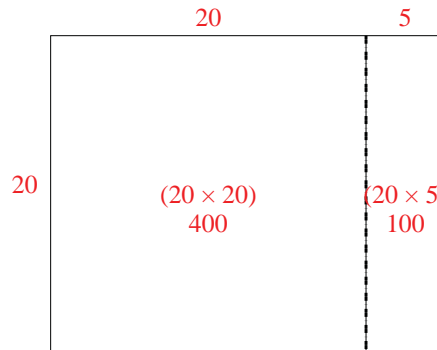
4) $20 \times 26 =$



5) $20 \times 24 =$



6) $20 \times 25 =$




Answers

1. 870
2. 540
3. 480
4. 520
5. 480
6. 500




Use the array provided to solve each problem.


1) $20 \times 23 =$




2) $28 \times 20 =$




3) $20 \times 29 =$




4) $20 \times 24 =$



5) $20 \times 25 =$



6) $20 \times 28 =$



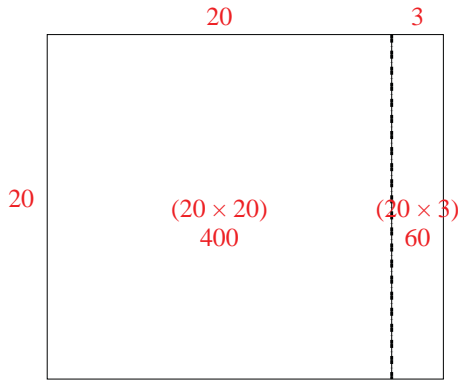
Answers

- 1. _____
- 2. _____
- 3. _____
- 4. _____
- 5. _____
- 6. _____

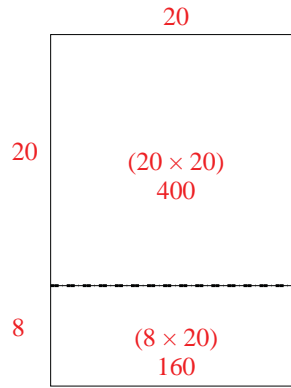


Use the array provided to solve each problem.

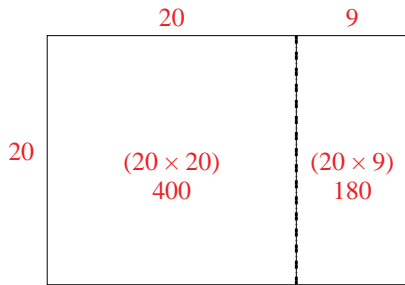
1) $20 \times 23 =$



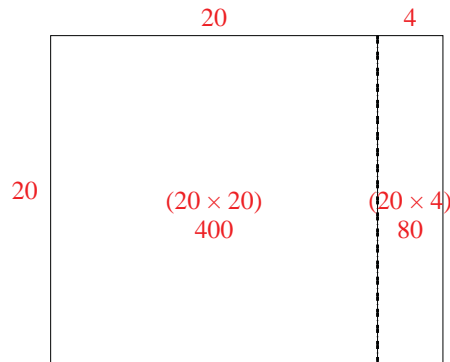
2) $28 \times 20 =$



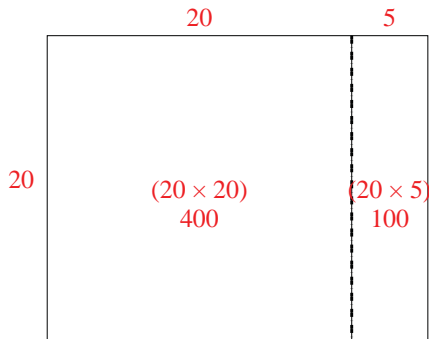
3) $20 \times 29 =$



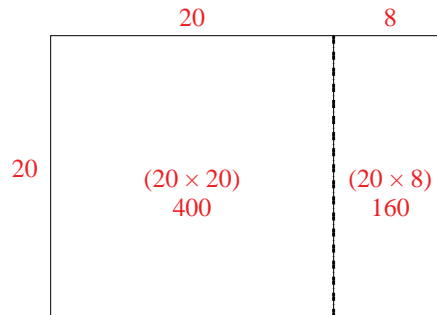
4) $20 \times 24 =$



5) $20 \times 25 =$



6) $20 \times 28 =$




Answers

1. 460
2. 560
3. 580
4. 480
5. 500
6. 560




Use the array provided to solve each problem.


1) $31 \times 20 =$




2) $27 \times 20 =$




3) $23 \times 20 =$




4) $20 \times 26 =$



5) $24 \times 20 =$



6) $25 \times 20 =$



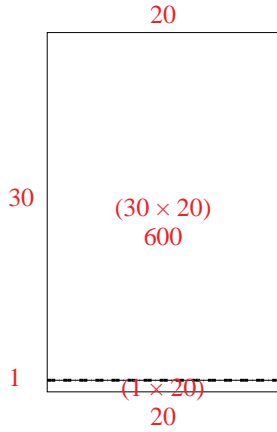
Answers

- 1. _____
- 2. _____
- 3. _____
- 4. _____
- 5. _____
- 6. _____

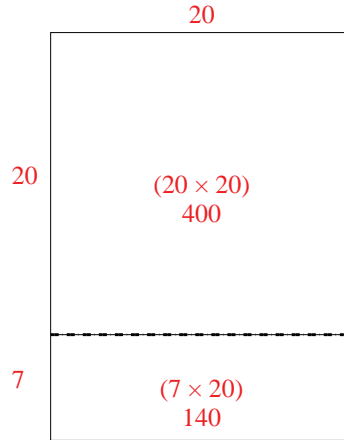


Use the array provided to solve each problem.

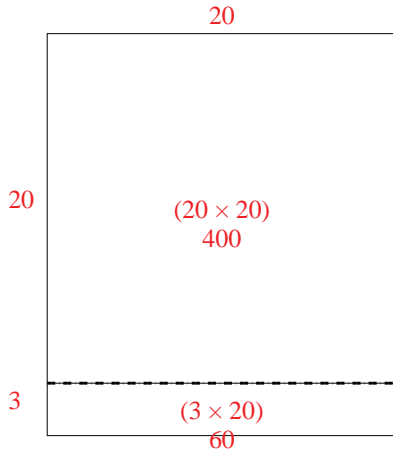
1) $31 \times 20 =$



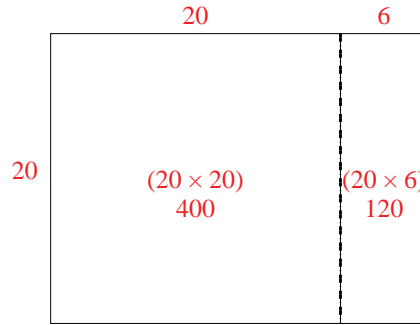
2) $27 \times 20 =$



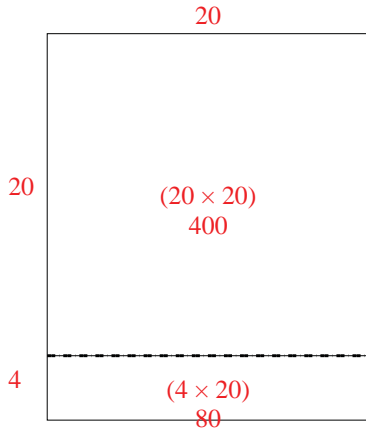
3) $23 \times 20 =$



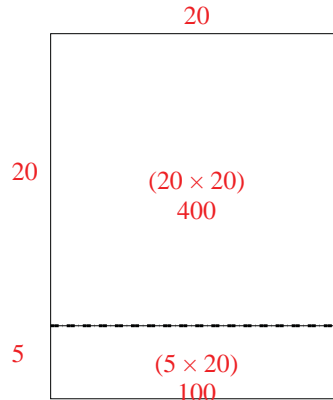
4) $20 \times 26 =$



5) $24 \times 20 =$



6) $25 \times 20 =$



Answers

1. 620
2. 540
3. 460
4. 520
5. 480
6. 500




Use the array provided to solve each problem.


1) $20 \times 38 =$




2) $31 \times 20 =$




3) $20 \times 21 =$



4) $20 \times 26 =$



5) $20 \times 22 =$



6) $20 \times 29 =$



Answers

1. _____

2. _____

3. _____

4. _____

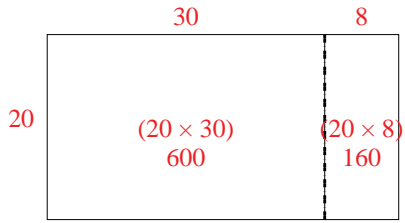
5. _____

6. _____

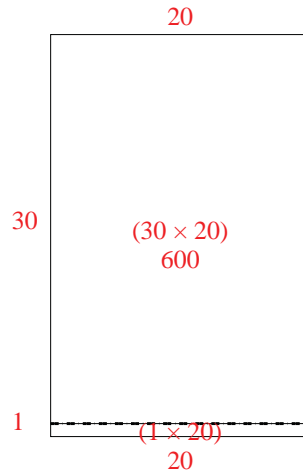


Use the array provided to solve each problem.

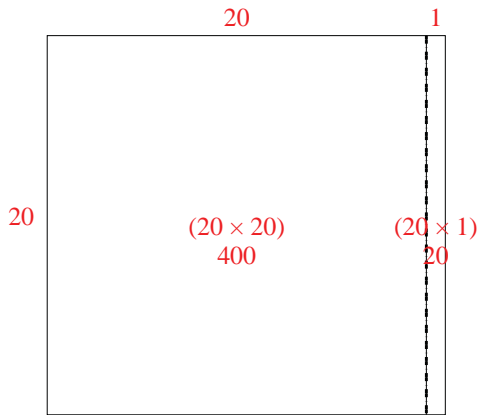
1) $20 \times 38 =$



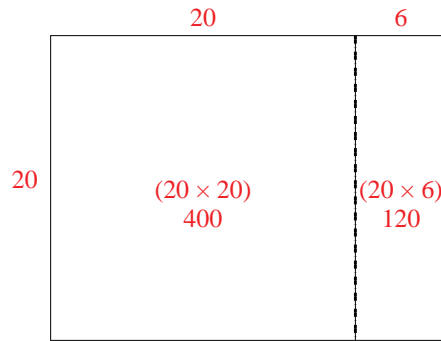
2) $31 \times 20 =$



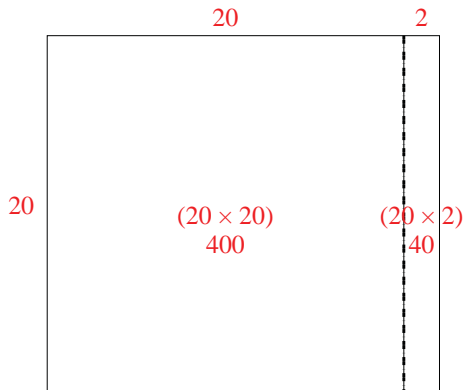
3) $20 \times 21 =$



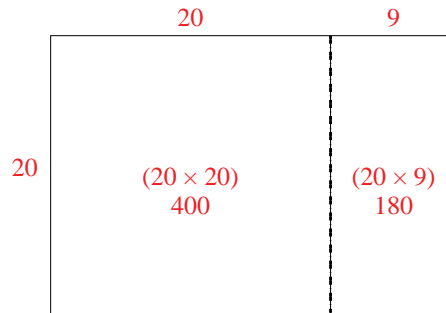
4) $20 \times 26 =$



5) $20 \times 22 =$



6) $20 \times 29 =$




Answers

1. 760
2. 620
3. 420
4. 520
5. 440
6. 580




Use the array provided to solve each problem.


1) $20 \times 39 =$




2) $22 \times 30 =$




3) $26 \times 20 =$




4) $22 \times 20 =$



5) $20 \times 29 =$



6) $20 \times 24 =$



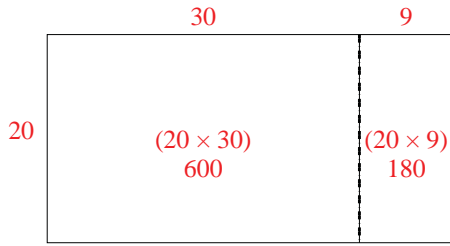
Answers

- 1. _____
- 2. _____
- 3. _____
- 4. _____
- 5. _____
- 6. _____

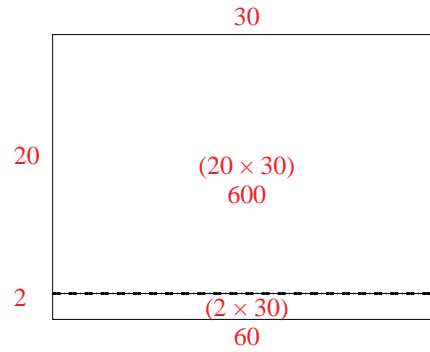


Use the array provided to solve each problem.

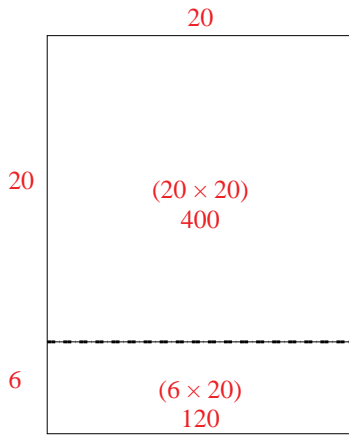
1) $20 \times 39 =$



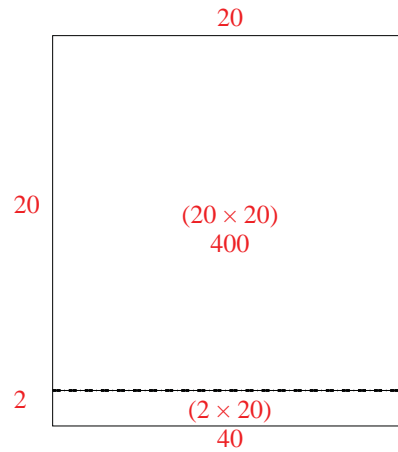
2) $22 \times 30 =$



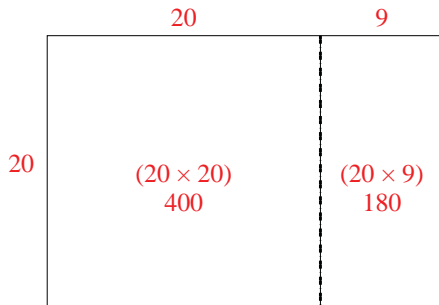
3) $26 \times 20 =$



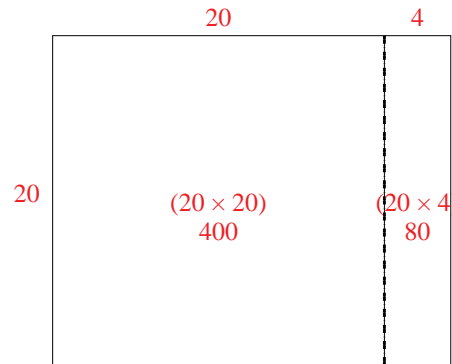
4) $22 \times 20 =$



5) $20 \times 29 =$



6) $20 \times 24 =$




Answers

1. 780
2. 660
3. 520
4. 440
5. 580
6. 480




Use the array provided to solve each problem.


1) $30 \times 28 =$




2) $27 \times 20 =$




3) $23 \times 20 =$




4) $24 \times 20 =$



5) $25 \times 20 =$



6) $20 \times 28 =$



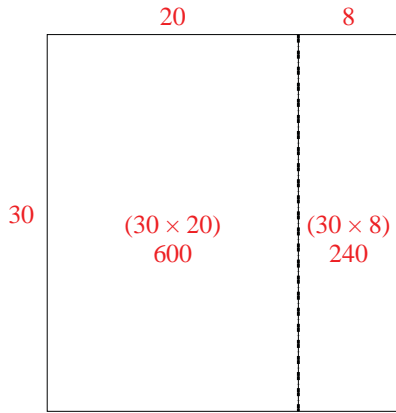
Answers

- 1. _____
- 2. _____
- 3. _____
- 4. _____
- 5. _____
- 6. _____

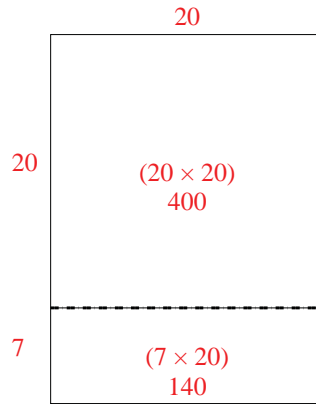


Use the array provided to solve each problem.

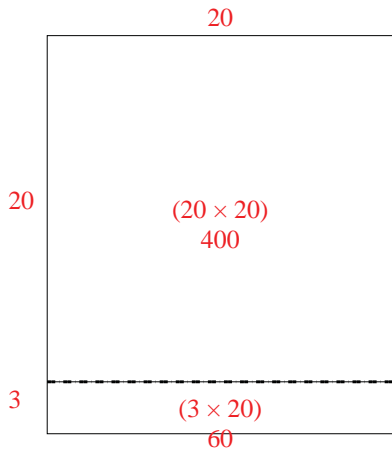
1) $30 \times 28 =$



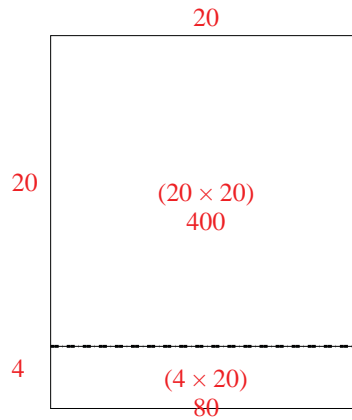
2) $27 \times 20 =$



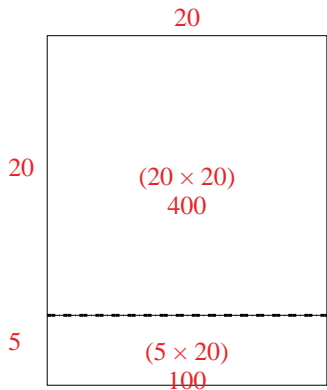
3) $23 \times 20 =$



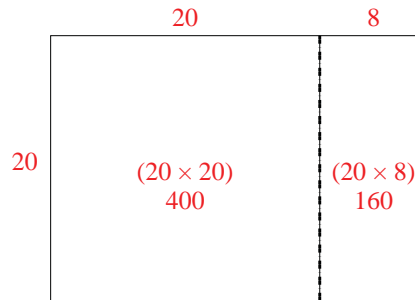
4) $24 \times 20 =$



5) $25 \times 20 =$



6) $20 \times 28 =$



Answers

1. 840
2. 540
3. 460
4. 480
5. 500
6. 560