





Use the array provided to solve each problem.


1) $20 \times 39 =$




2) $22 \times 30 =$




3) $26 \times 20 =$




4) $22 \times 20 =$



5) $20 \times 29 =$



6) $20 \times 24 =$



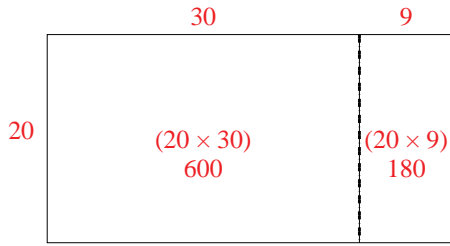
Answers

- 1. _____
- 2. _____
- 3. _____
- 4. _____
- 5. _____
- 6. _____

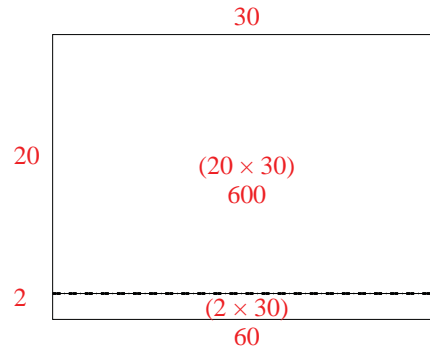


Use the array provided to solve each problem.

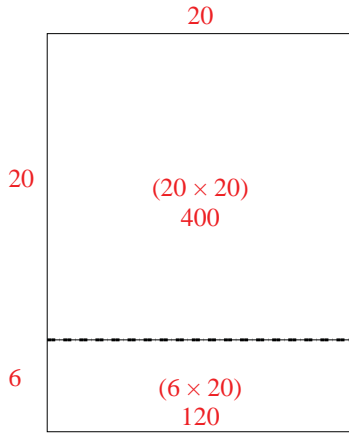
1) $20 \times 39 =$



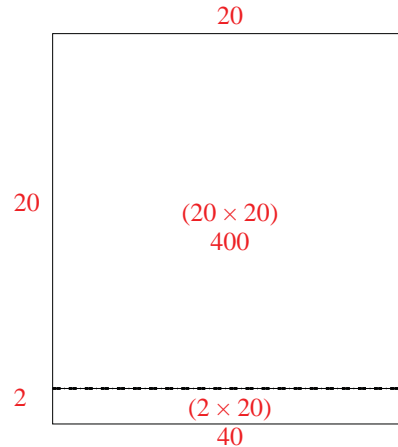
2) $22 \times 30 =$



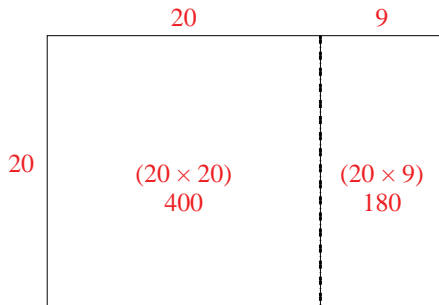
3) $26 \times 20 =$



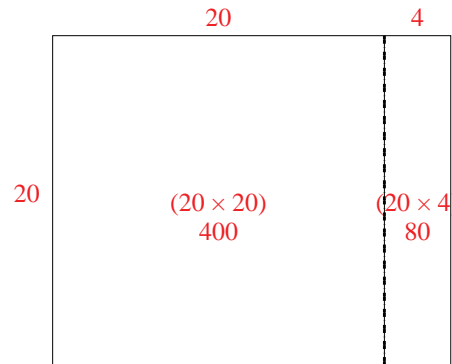
4) $22 \times 20 =$



5) $20 \times 29 =$



6) $20 \times 24 =$



Answers

1. 780
2. 660
3. 520
4. 440
5. 580
6. 480