





Use the array provided to solve each problem.


1) $20 \times 38 =$




2) $31 \times 20 =$




3) $20 \times 21 =$



4) $20 \times 26 =$



5) $20 \times 22 =$



6) $20 \times 29 =$



Answers

1. _____

2. _____

3. _____

4. _____

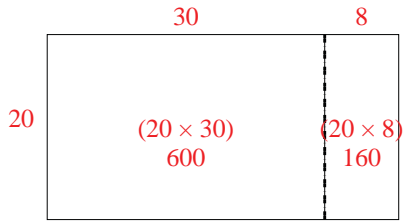
5. _____

6. _____

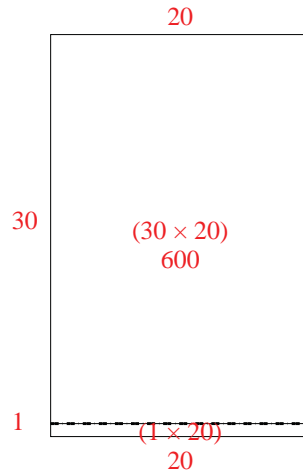


Use the array provided to solve each problem.

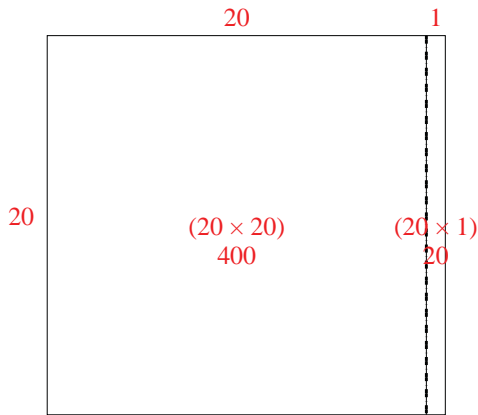
1) $20 \times 38 =$



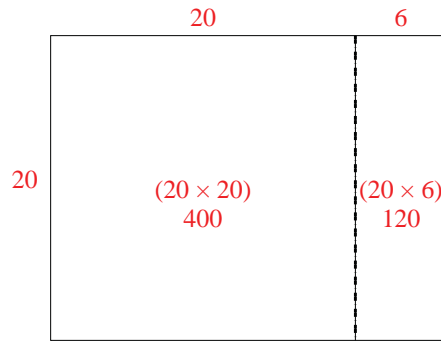
2) $31 \times 20 =$



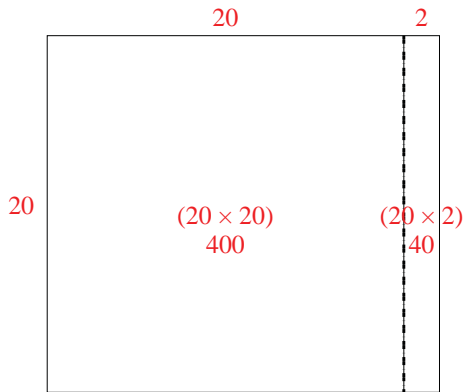
3) $20 \times 21 =$



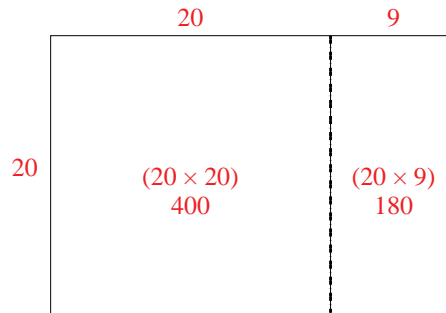
4) $20 \times 26 =$



5) $20 \times 22 =$



6) $20 \times 29 =$



Answers

1. 760

2. 620

3. 420

4. 520

5. 440

6. 580