





Use the array provided to solve each problem.


1)  $31 \times 20 =$




2)  $27 \times 20 =$




3)  $23 \times 20 =$




4)  $20 \times 26 =$



5)  $24 \times 20 =$



6)  $25 \times 20 =$



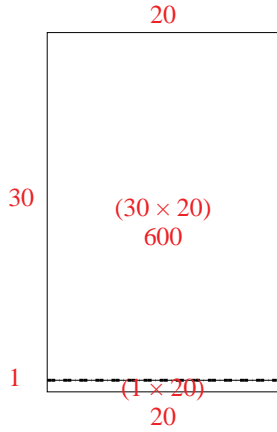
Answers

- 1. \_\_\_\_\_
- 2. \_\_\_\_\_
- 3. \_\_\_\_\_
- 4. \_\_\_\_\_
- 5. \_\_\_\_\_
- 6. \_\_\_\_\_

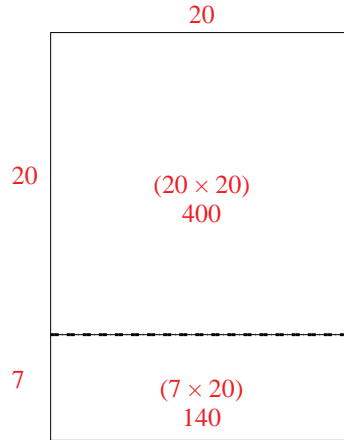


Use the array provided to solve each problem.

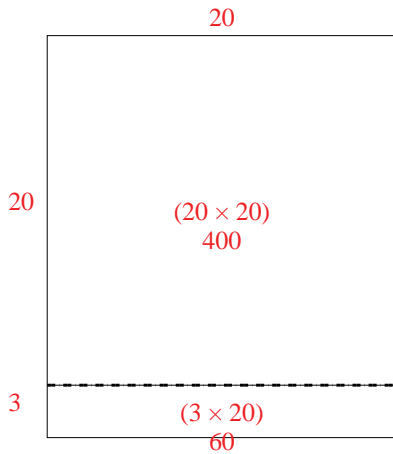
1)  $31 \times 20 =$



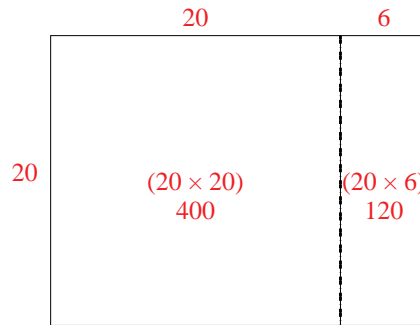
2)  $27 \times 20 =$



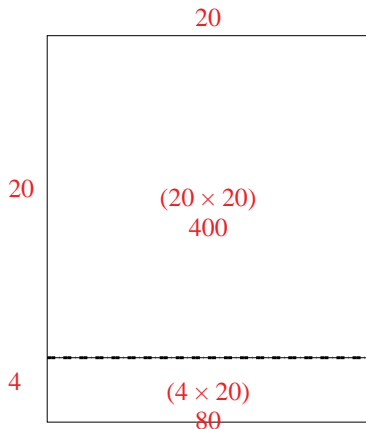
3)  $23 \times 20 =$



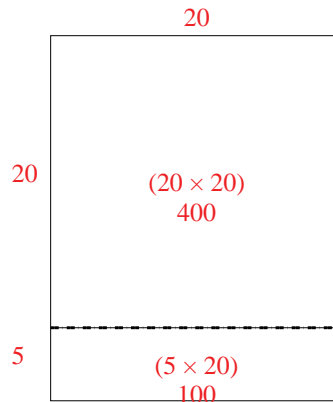
4)  $20 \times 26 =$



5)  $24 \times 20 =$



6)  $25 \times 20 =$



Answers

1. 620
2. 540
3. 460
4. 520
5. 480
6. 500