





Use the array provided to solve each problem.


1) $20 \times 23 =$




2) $28 \times 20 =$




3) $20 \times 29 =$




4) $20 \times 24 =$



5) $20 \times 25 =$



6) $20 \times 28 =$



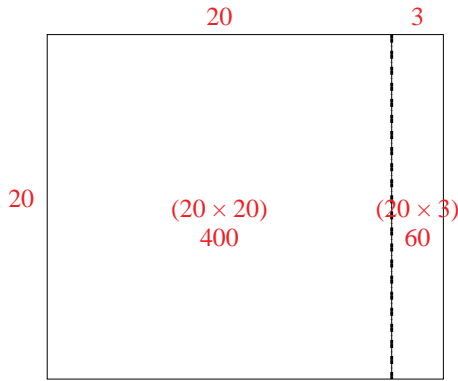
Answers

- 1. _____
- 2. _____
- 3. _____
- 4. _____
- 5. _____
- 6. _____

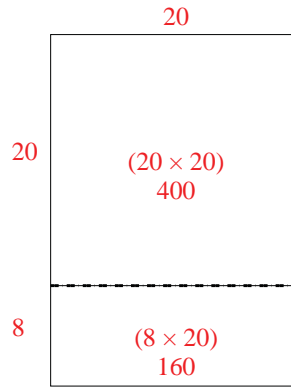


Use the array provided to solve each problem.

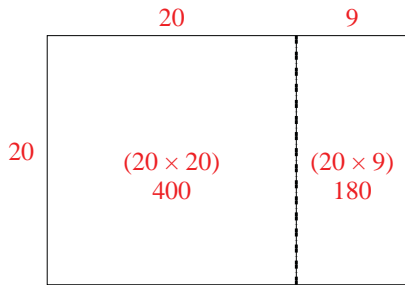
1) $20 \times 23 =$



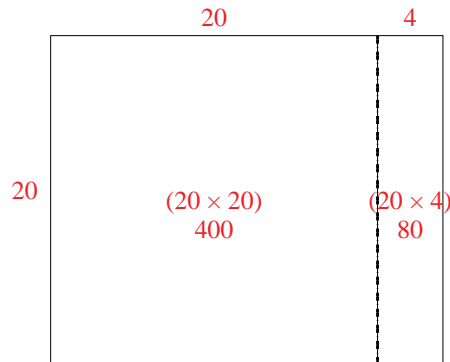
2) $28 \times 20 =$



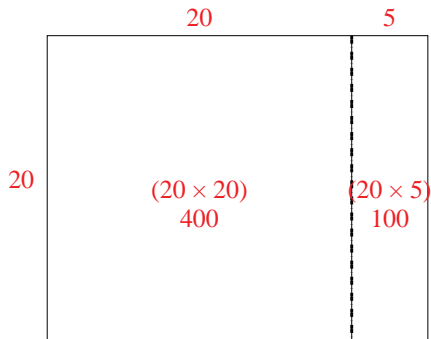
3) $20 \times 29 =$



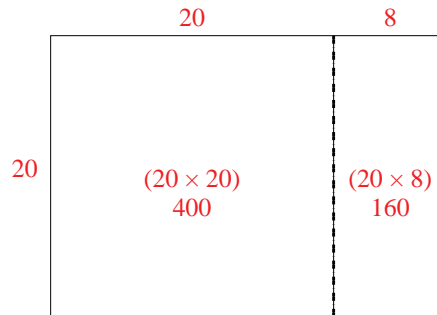
4) $20 \times 24 =$



5) $20 \times 25 =$



6) $20 \times 28 =$



Answers

1. 460
2. 560
3. 580
4. 480
5. 500
6. 560