





Use the array provided to solve each problem.


1) $30 \times 29 =$




2) $27 \times 20 =$




3) $24 \times 20 =$




4) $20 \times 26 =$



5) $20 \times 24 =$



6) $20 \times 25 =$



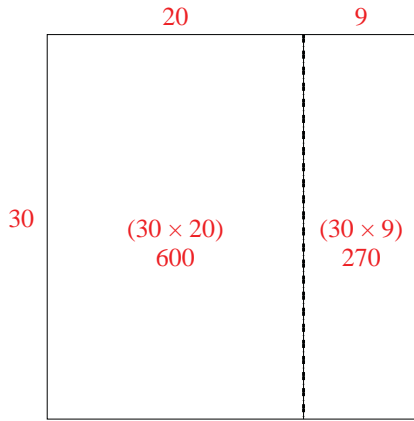
Answers

- 1. _____
- 2. _____
- 3. _____
- 4. _____
- 5. _____
- 6. _____

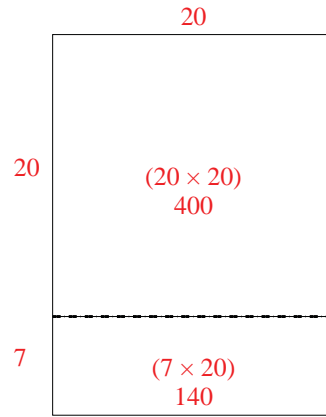


Use the array provided to solve each problem.

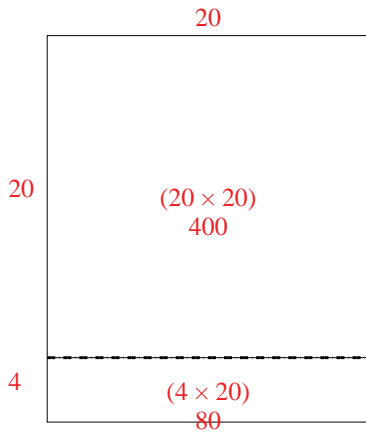
1) $30 \times 29 =$



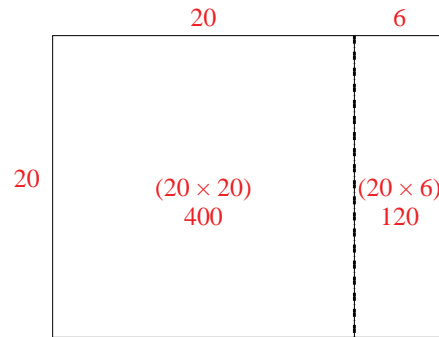
2) $27 \times 20 =$



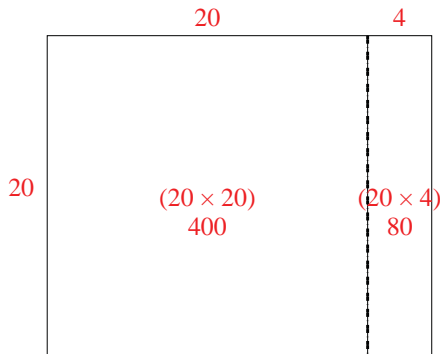
3) $24 \times 20 =$



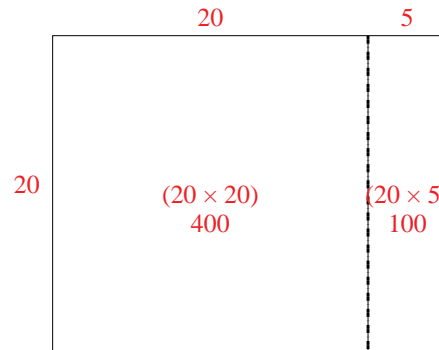
4) $20 \times 26 =$



5) $20 \times 24 =$



6) $20 \times 25 =$



Answers

1. 870
2. 540
3. 480
4. 520
5. 480
6. 500