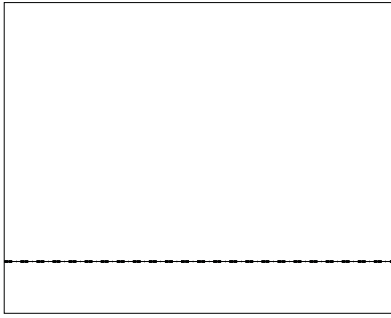





Use the array provided to solve each problem.


1) $24 \times 30 =$




2) $20 \times 33 =$



3) $30 \times 21 =$




4) $22 \times 20 =$



5) $20 \times 28 =$



6) $20 \times 22 =$



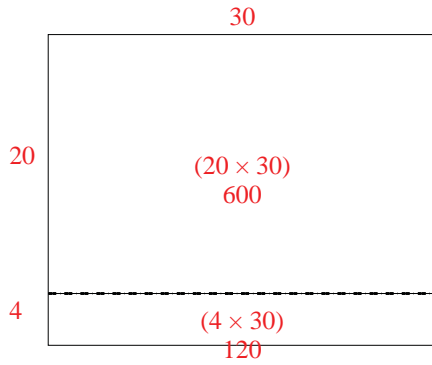
Answers

- 1. _____
- 2. _____
- 3. _____
- 4. _____
- 5. _____
- 6. _____

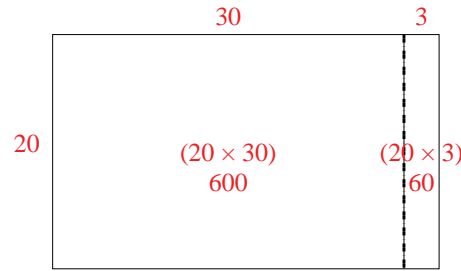


Use the array provided to solve each problem.

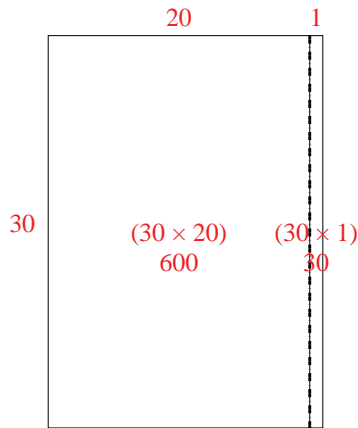
1) $24 \times 30 =$



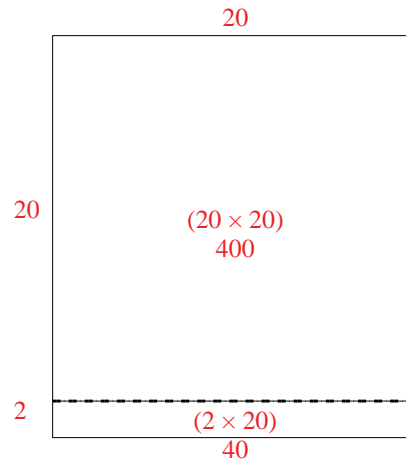
2) $20 \times 33 =$



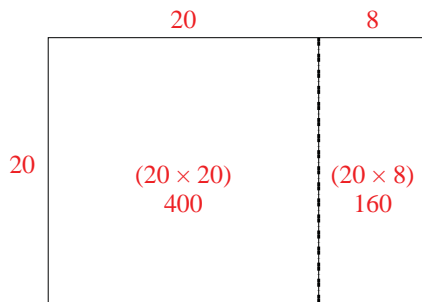
3) $30 \times 21 =$



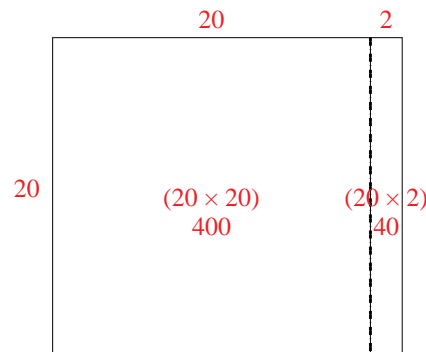
4) $22 \times 20 =$



5) $20 \times 28 =$



6) $20 \times 22 =$



Answers

1. 720
2. 660
3. 630
4. 440
5. 560
6. 440