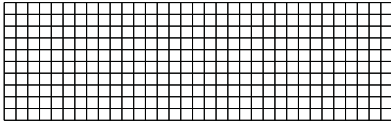





Use the array provided to solve each problem.


1) $10 \times 33 =$




2) $12 \times 20 =$




3) $29 \times 10 =$




4) $13 \times 10 =$



5) $17 \times 10 =$



6) $15 \times 10 =$



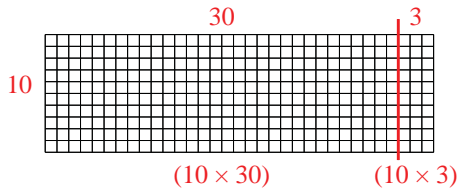
Answers

- 1. _____
- 2. _____
- 3. _____
- 4. _____
- 5. _____
- 6. _____

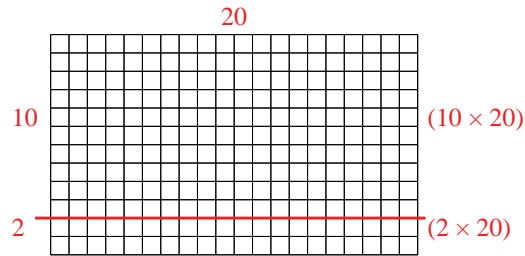


Use the array provided to solve each problem.

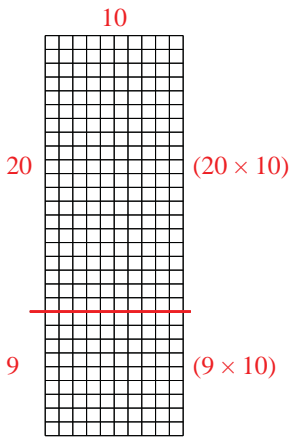
1) $10 \times 33 =$



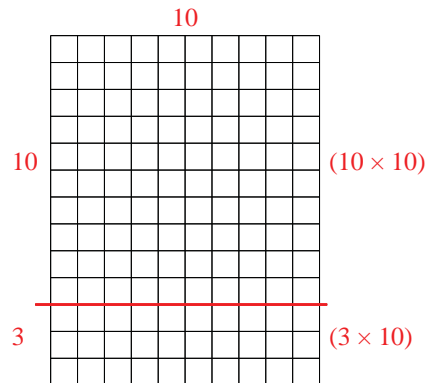
2) $12 \times 20 =$



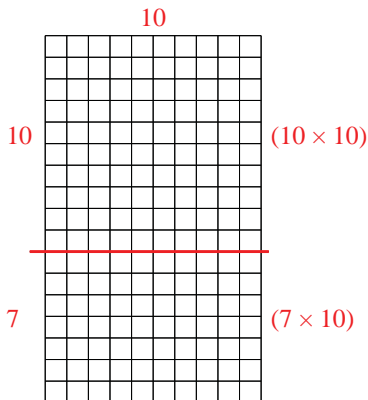
3) $29 \times 10 =$



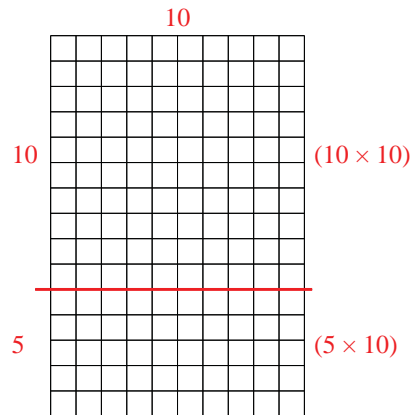
4) $13 \times 10 =$



5) $17 \times 10 =$



6) $15 \times 10 =$



Answers

1. 330
2. 240
3. 290
4. 130
5. 170
6. 150