





Use the array provided to solve each problem.


1) $30 \times 18 =$




2) $10 \times 15 =$




3) $10 \times 17 =$




4) $14 \times 10 =$



5) $18 \times 10 =$



6) $13 \times 10 =$



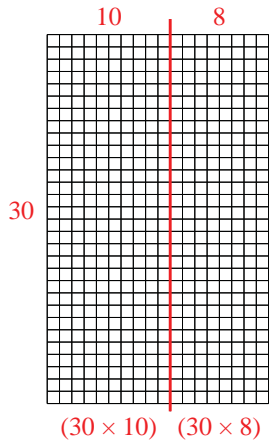
Answers

- 1. _____
- 2. _____
- 3. _____
- 4. _____
- 5. _____
- 6. _____

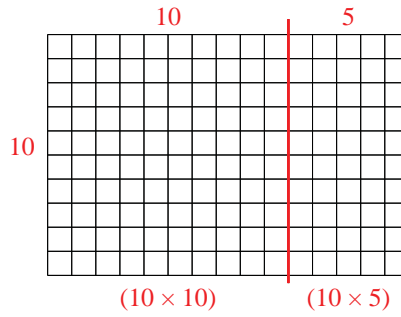


Use the array provided to solve each problem.

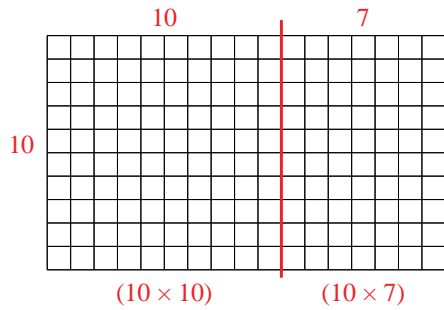
1) $30 \times 18 =$



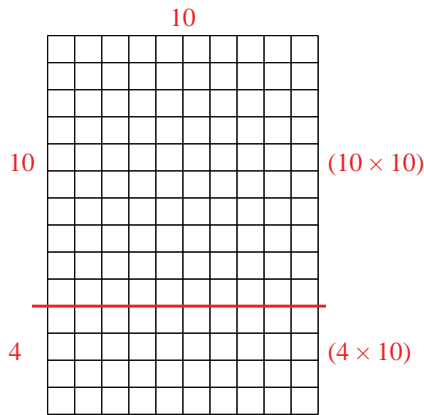
2) $10 \times 15 =$



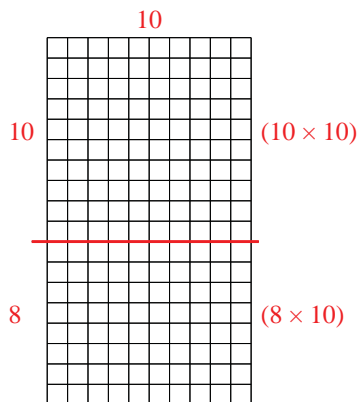
3) $10 \times 17 =$



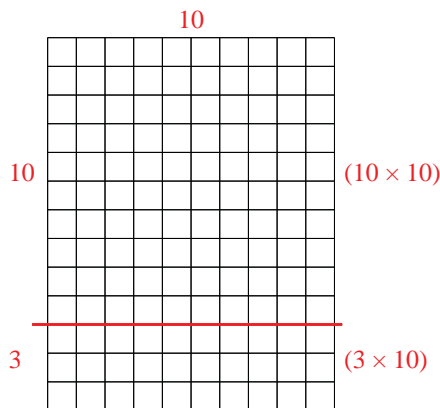
4) $14 \times 10 =$



5) $18 \times 10 =$



6) $13 \times 10 =$



Answers

1. 540
2. 150
3. 170
4. 140
5. 180
6. 130