





Use the array provided to solve each problem.


1)  $10 \times 25 =$




2)  $10 \times 23 =$




3)  $28 \times 20 =$




4)  $26 \times 20 =$



5)  $20 \times 16 =$



6)  $10 \times 18 =$



Answers

1. \_\_\_\_\_

2. \_\_\_\_\_

3. \_\_\_\_\_

4. \_\_\_\_\_

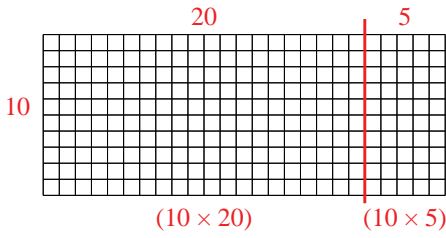
5. \_\_\_\_\_

6. \_\_\_\_\_

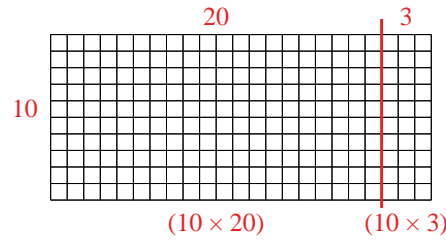


Use the array provided to solve each problem.

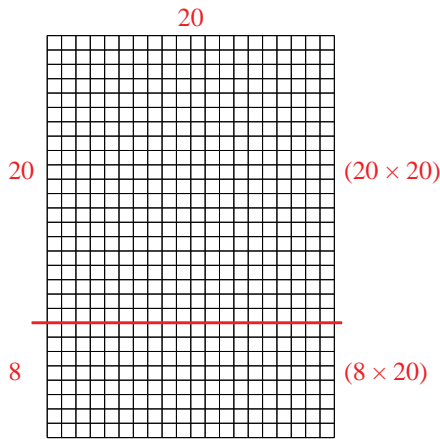
1)  $10 \times 25 =$



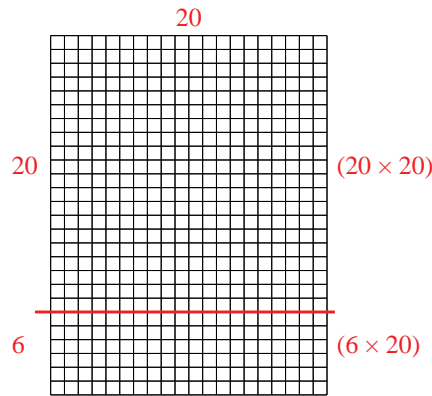
2)  $10 \times 23 =$



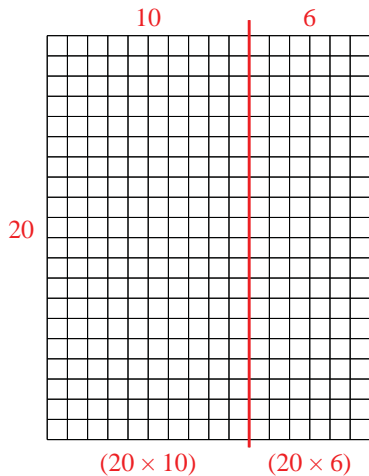
3)  $28 \times 20 =$



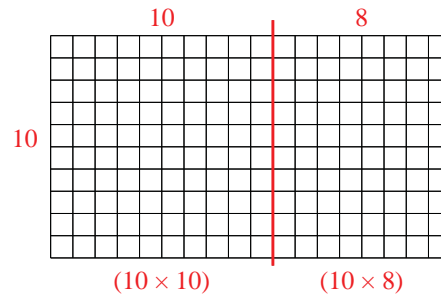
4)  $26 \times 20 =$



5)  $20 \times 16 =$



6)  $10 \times 18 =$



Answers

1. 250
2. 230
3. 560
4. 520
5. 320
6. 180