





Use the array provided to solve each problem.


1) $30 \times 19 =$




2) $23 \times 10 =$




3) $20 \times 28 =$




4) $10 \times 12 =$



5) $11 \times 10 =$



6) $18 \times 10 =$



Answers

1. _____

2. _____

3. _____

4. _____

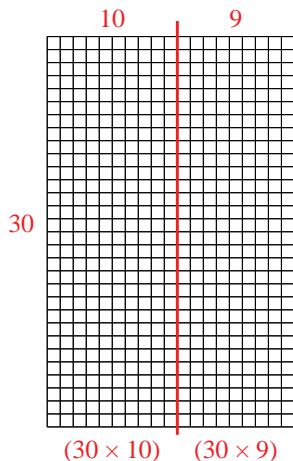
5. _____

6. _____

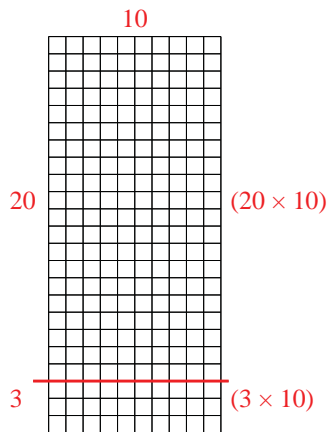


Use the array provided to solve each problem.

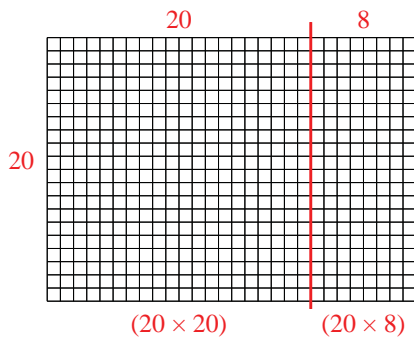
1) $30 \times 19 =$



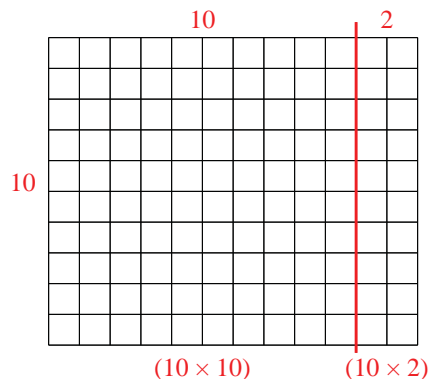
2) $23 \times 10 =$



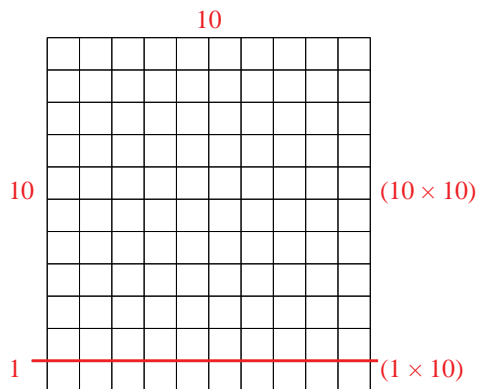
3) $20 \times 28 =$



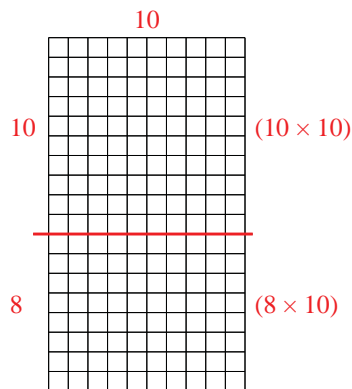
4) $10 \times 12 =$



5) $11 \times 10 =$



6) $18 \times 10 =$



Answers

1. 570

2. 230

3. 560

4. 120

5. 110

6. 180