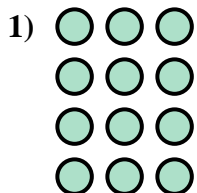
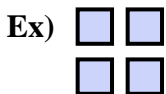




Write an equation to express the array and then find the number of shapes.



Answers

Ex. 2 × 2 = 4

1. _____

2. _____

3. _____

4. _____

5. _____

6. _____

7. _____

8. _____

9. _____

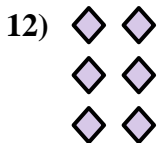



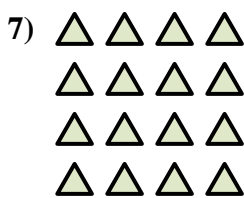


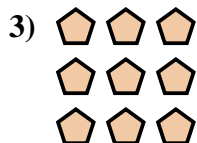
10. _____

11. _____

12. _____

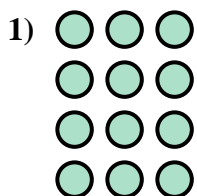
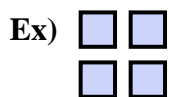
13. _____

14. _____




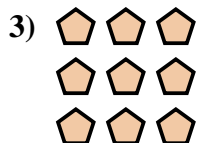


Write an equation to express the array and then find the number of shapes.




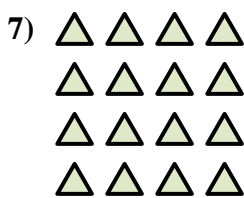

Answers

Ex. $2 \times 2 = 4$



1. $4 \times 3 = 12$

2. $5 \times 2 = 10$



3. $3 \times 3 = 9$

4. $5 \times 3 = 15$



5. $3 \times 5 = 15$

6. $4 \times 2 = 8$

7. $4 \times 4 = 16$

8. $5 \times 4 = 20$

9. $3 \times 4 = 12$

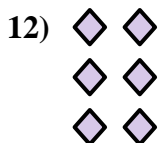


10. $2 \times 3 = 6$

11. $2 \times 4 = 8$

12. $3 \times 2 = 6$

13. $4 \times 5 = 20$



14. $2 \times 5 = 10$