



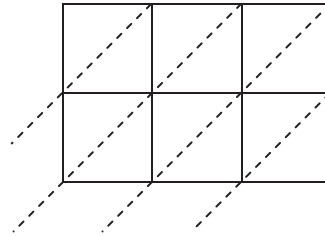
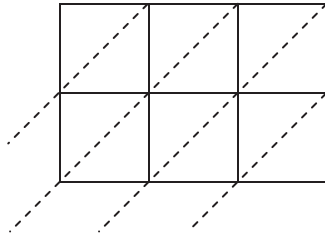
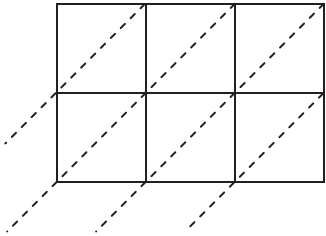
Use the Lattice Multiplication to solve each problem.

Answers

1) $453 \times 80 =$

2) $642 \times 85 =$

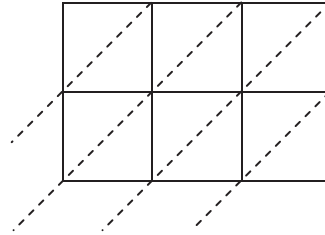
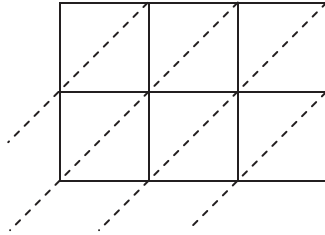
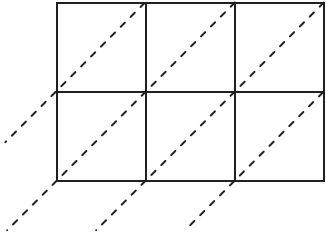
3) $447 \times 72 =$



4) $245 \times 89 =$

5) $834 \times 16 =$

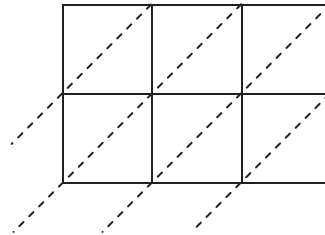
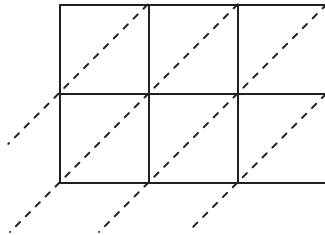
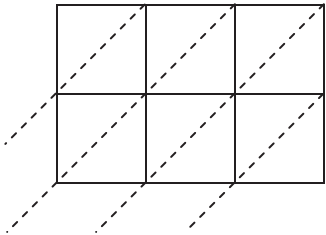
6) $508 \times 78 =$



7) $235 \times 12 =$

8) $727 \times 38 =$

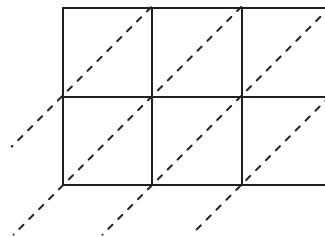
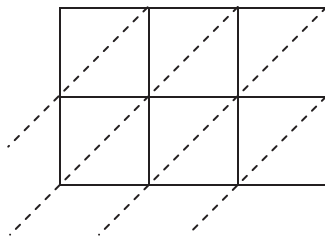
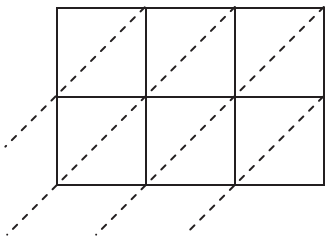
9) $421 \times 23 =$



10) $649 \times 90 =$

11) $915 \times 56 =$

12) $470 \times 39 =$

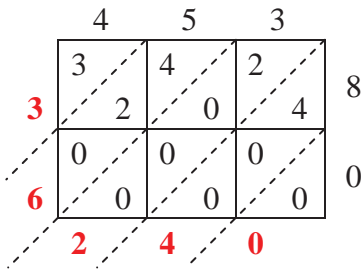


- 1. _____
- 2. _____
- 3. _____
- 4. _____
- 5. _____
- 6. _____
- 7. _____
- 8. _____
- 9. _____
- 10. _____
- 11. _____
- 12. _____

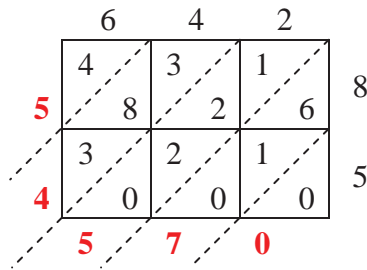


Use the Lattice Multiplication to solve each problem.

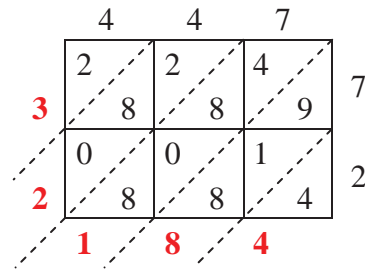
1) $453 \times 80 =$



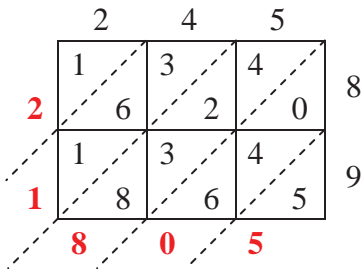
2) $642 \times 85 =$



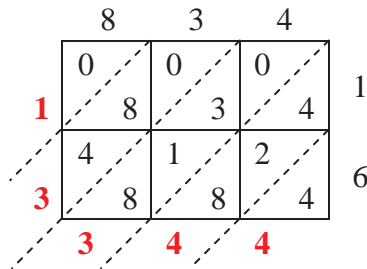
3) $447 \times 72 =$



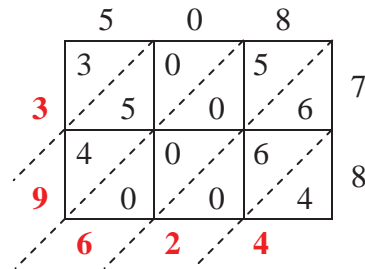
4) $245 \times 89 =$



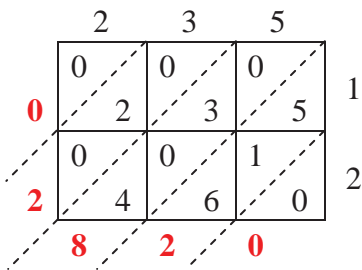
5) $834 \times 16 =$



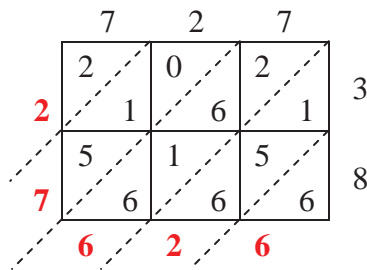
6) $508 \times 78 =$



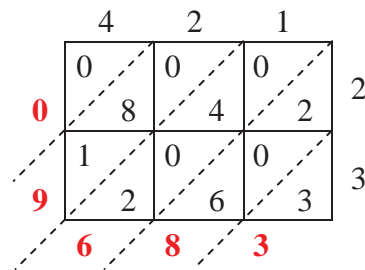
7) $235 \times 12 =$



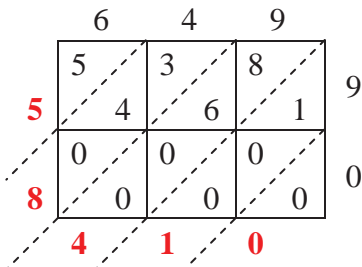
8) $727 \times 38 =$



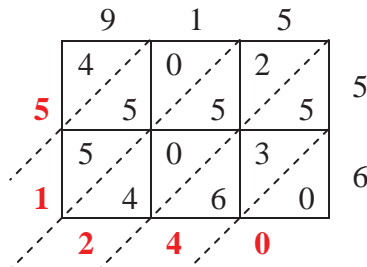
9) $421 \times 23 =$



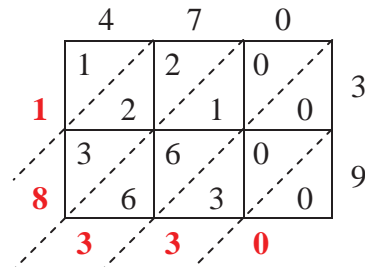
10) $649 \times 90 =$



11) $915 \times 56 =$



12) $470 \times 39 =$

Answers1. 36,2402. 54,5703. 32,1844. 21,8055. 13,3446. 39,6247. 2,8208. 27,6269. 9,68310. 58,41011. 51,24012. 18,330