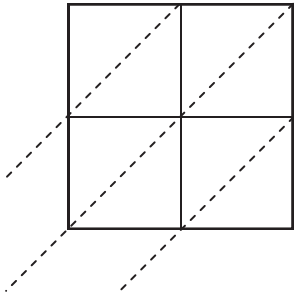




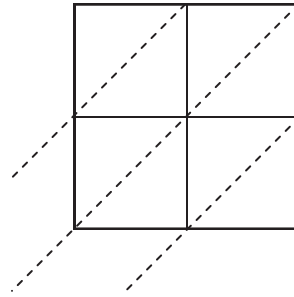
Use the Lattice Multiplication to solve each problem.

Answers

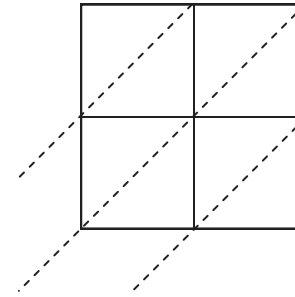
1) $40 \times 24 =$



2) $84 \times 72 =$



3) $95 \times 98 =$



1. _____

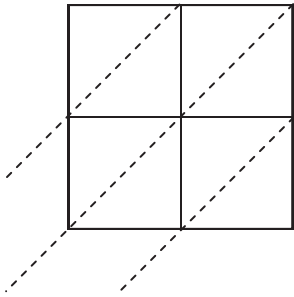
2. _____

3. _____

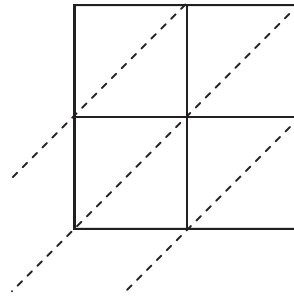
4. _____

5. _____

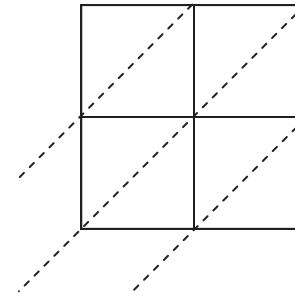
4) $82 \times 55 =$



5) $52 \times 43 =$



6) $76 \times 99 =$



6. _____

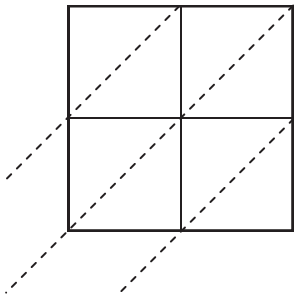
7. _____

8. _____

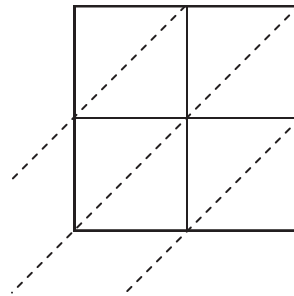
9. _____

10. _____

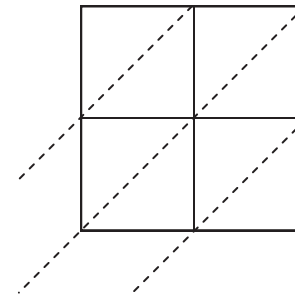
7) $88 \times 93 =$



8) $40 \times 56 =$



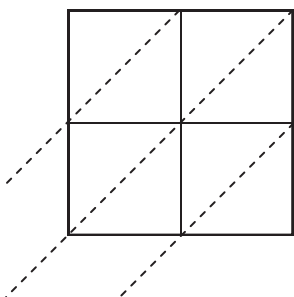
9) $64 \times 75 =$



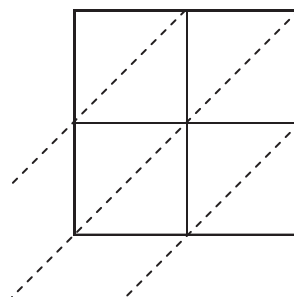
11. _____

12. _____

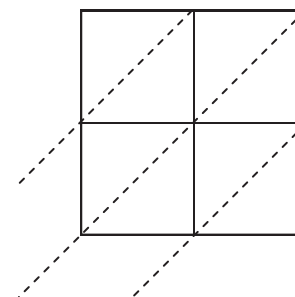
10) $84 \times 90 =$



11) $68 \times 45 =$



12) $93 \times 52 =$

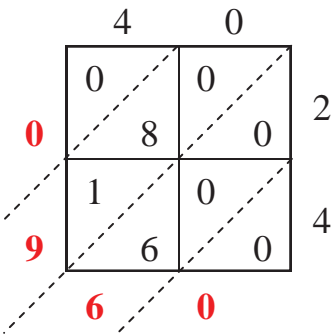




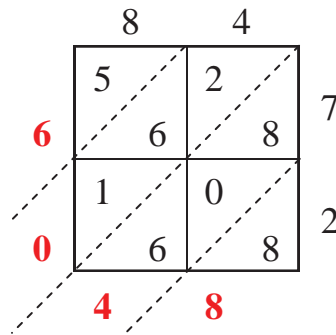
Use the Lattice Multiplication to solve each problem.

Answers

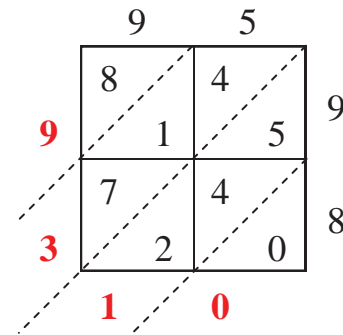
1) $40 \times 24 =$



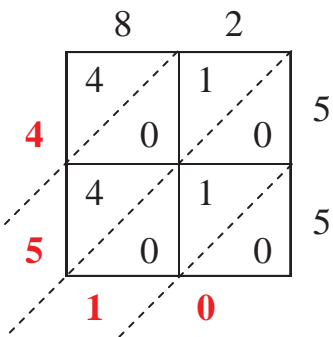
2) $84 \times 72 =$



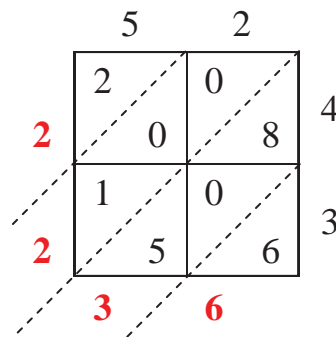
3) $95 \times 98 =$



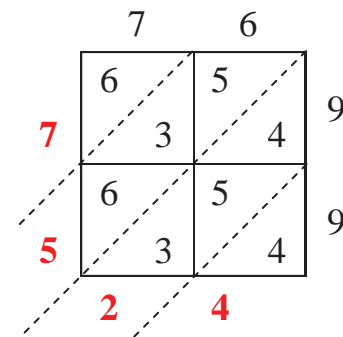
4) $82 \times 55 =$



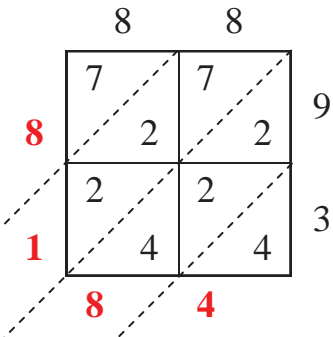
5) $52 \times 43 =$



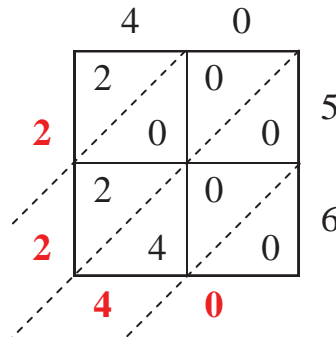
6) $76 \times 99 =$



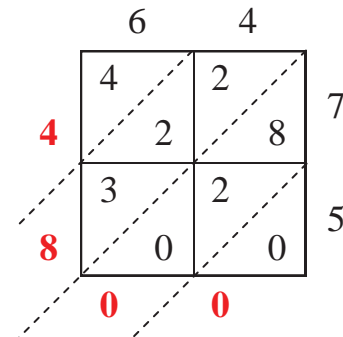
7) $88 \times 93 =$



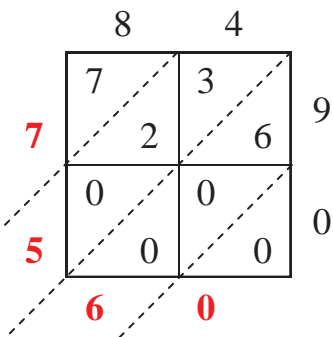
8) $40 \times 56 =$



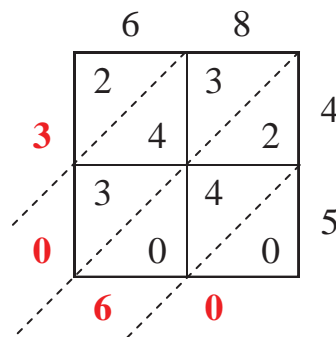
9) $64 \times 75 =$



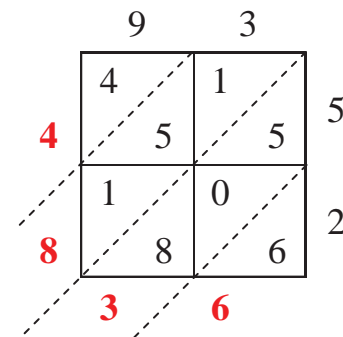
10) $84 \times 90 =$



11) $68 \times 45 =$



12) $93 \times 52 =$



1. 960

2. 6,048

3. 9,310

4. 4,510

5. 2,236

6. 7,524

7. 8,184

8. 2,240

9. 4,800

10. 7,560

11. 3,060

12. 4,836