
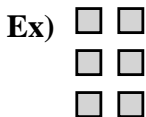




Write each array as an addition problem and solve.



Answers

Ex. $2+2+2=6$

1. _____

2. _____

3. _____

4. _____

5. _____

6. _____

7. _____

8. _____

9. _____


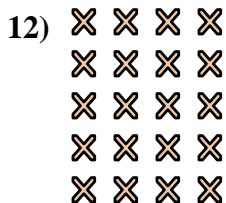
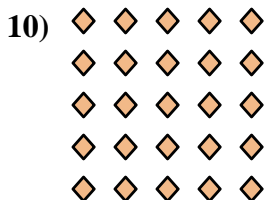

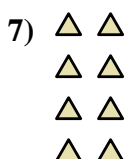

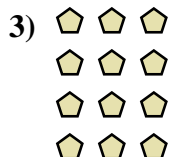
10. _____

11. _____

12. _____


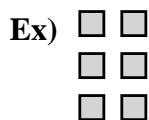
13. _____

14. _____





Write each array as an addition problem and solve.



Answers
Ex. 2+2+2=6

1. 4+4+4=12

2. 3+3+3+3+3=15

3. 3+3+3+3=12

4. 5+5+5=15

5. 3+3+3=9

6. 2+2+2+2+2=10

7. 2+2+2+2=8

8. 5+5=10

9. 3+3=6

10. 5+5+5+5+5=25

11. 2+2=4

12. 4+4+4+4+4=20

13. 4+4=8

14. 4+4+4+4=16

