
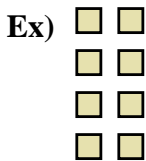




Write each array as an addition problem and solve.



Answers

Ex. $2+2+2+2=8$

1. _____

2. _____

3. _____

4. _____

5. _____

6. _____

7. _____

8. _____

9. _____

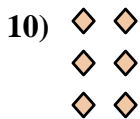

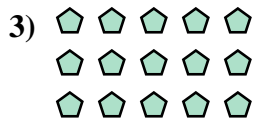
10. _____

11. _____

12. _____


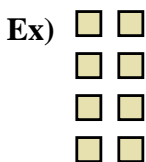
13. _____

14. _____





Write each array as an addition problem and solve.



Answers

Ex. 2+2+2+2=8

1. 3+3+3=9

2. 5+5+5+5=20

3. 5+5+5=15

4. 4+4+4+4+4=20

5. 4+4+4+4=16

6. 5+5=10

7. 4+4=8

8. 3+3+3+3+3=15

9. 2+2=4

10. 2+2+2=6

11. 3+3=6

12. 5+5+5+5+5=25

13. 2+2+2+2+2=10

14. 4+4+4=12

