



Use the units provided to measure the width of each of the bars.

Answers



1. \_\_\_\_\_



2. \_\_\_\_\_



3. \_\_\_\_\_



4. \_\_\_\_\_



5. \_\_\_\_\_



6. \_\_\_\_\_



7. \_\_\_\_\_



8. \_\_\_\_\_

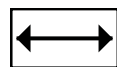
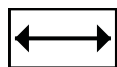
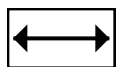
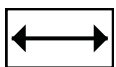
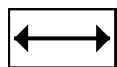
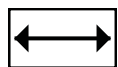
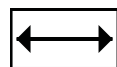
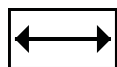
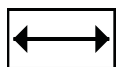
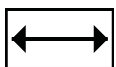
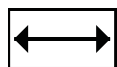
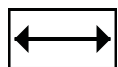
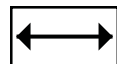
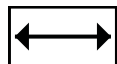
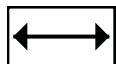
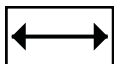
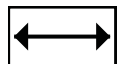
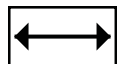
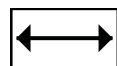
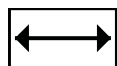
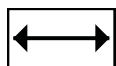
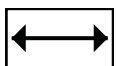
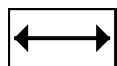
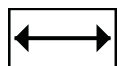
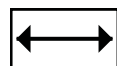
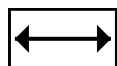
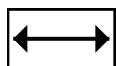
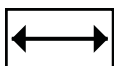
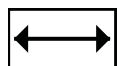
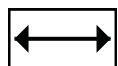
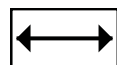
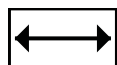
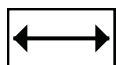
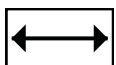
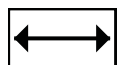
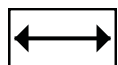
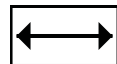
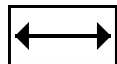
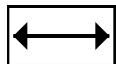
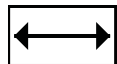
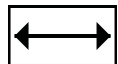
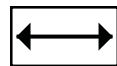
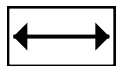
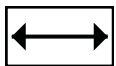
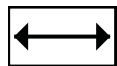
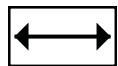
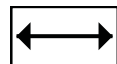
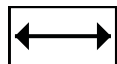
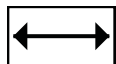
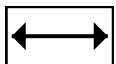
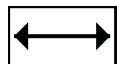
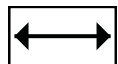
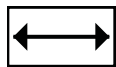
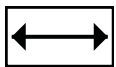
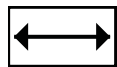
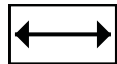
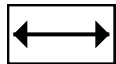

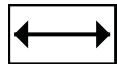
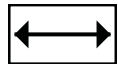
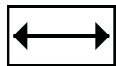
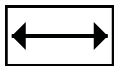
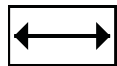
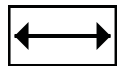
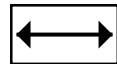
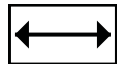
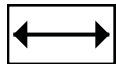

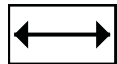
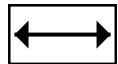
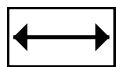
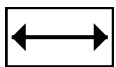
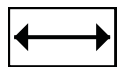
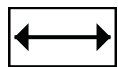


9. \_\_\_\_\_



10. \_\_\_\_\_

Cut out and use the units shown to measure the bars on the previous page.





Use the units provided to measure the width of each of the bars.



Answers

1. 4

2. 6

3. 10

4. 3

5. 5

6. 2

7. 8

8. 9

9. 1

10. 7