






Compare the width of the two blocks.

1) How much longer is A than B (in inches)?




1. \_\_\_\_\_

2) How much longer is A than B (in inches)?



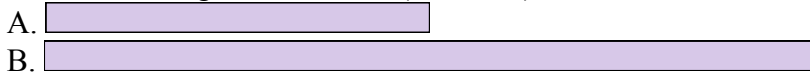
2. \_\_\_\_\_

3) How much longer is B than A (in inches)?




3. \_\_\_\_\_

4) How much longer is B than A (in inches)?



4. \_\_\_\_\_

5) How much longer is A than B (in inches)?



5. \_\_\_\_\_

6) How much longer is B than A (in centimeters)?



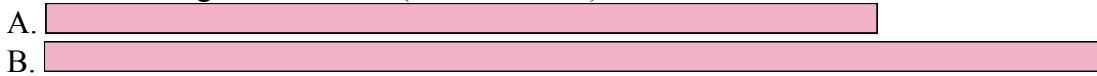
6. \_\_\_\_\_

7) How much longer is A than B (in centimeters)?



7. \_\_\_\_\_

8) How much longer is B than A (in centimeters)?




8. \_\_\_\_\_

9) How much longer is A than B (in centimeters)?



9. \_\_\_\_\_

10) How much longer is B than A (in centimeters)?



10. \_\_\_\_\_


**Answers**

In		1		2		3		4		5		6		7				
Cm	1	2	3	4	5	6	7	8	9	10	11	12	13	14	15	16	17	18
In		1		2		3		4		5		6		7				
Cm	1	2	3	4	5	6	7	8	9	10	11	12	13	14	15	16	17	18
In		1		2		3		4		5		6		7				
Cm	1	2	3	4	5	6	7	8	9	10	11	12	13	14	15	16	17	18
In		1		2		3		4		5		6		7				
Cm	1	2	3	4	5	6	7	8	9	10	11	12	13	14	15	16	17	18
In		1		2		3		4		5		6		7				
Cm	1	2	3	4	5	6	7	8	9	10	11	12	13	14	15	16	17	18
In		1		2		3		4		5		6		7				
Cm	1	2	3	4	5	6	7	8	9	10	11	12	13	14	15	16	17	18
In		1		2		3		4		5		6		7				
Cm	1	2	3	4	5	6	7	8	9	10	11	12	13	14	15	16	17	18
In		1		2		3		4		5		6		7				
Cm	1	2	3	4	5	6	7	8	9	10	11	12	13	14	15	16	17	18
In		1		2		3		4		5		6		7				
Cm	1	2	3	4	5	6	7	8	9	10	11	12	13	14	15	16	17	18
In		1		2		3		4		5		6		7				
Cm	1	2	3	4	5	6	7	8	9	10	11	12	13	14	15	16	17	18
In		1		2		3		4		5		6		7				
Cm	1	2	3	4	5	6	7	8	9	10	11	12	13	14	15	16	17	18



Compare the width of the two blocks.

1) How much longer is A than B (in inches)?



1.     **1**    


2) How much longer is A than B (in inches)?



2.     **3**    

3.     **1**    

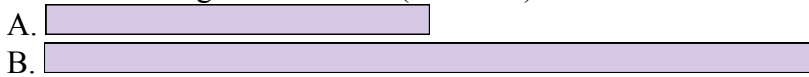
3) How much longer is B than A (in inches)?



4.     **2**    

5.     **3**    


4) How much longer is B than A (in inches)?



6.     **4**    

7.     **4**    

5) How much longer is A than B (in inches)?



8.     **3**    

9.     **3**    

6) How much longer is B than A (in centimeters)?

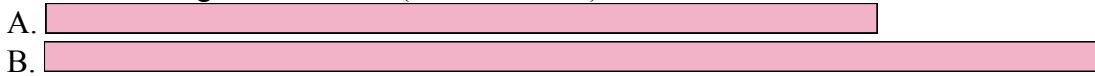


10.     **10**    

7) How much longer is A than B (in centimeters)?



8) How much longer is B than A (in centimeters)?



9) How much longer is A than B (in centimeters)?



10) How much longer is B than A (in centimeters)?




Answers

- 1.     **1**
- 2.     **3**
- 3.     **1**
- 4.     **2**
- 5.     **3**
- 6.     **4**
- 7.     **4**
- 8.     **3**
- 9.     **3**
- 10.     **10**




Compare the width of the two blocks.

1) How much longer is A than B (in inches)?



2) How much longer is A than B (in inches)?



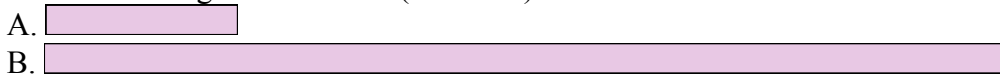
3) How much longer is B than A (in inches)?




4) How much longer is B than A (in inches)?




5) How much longer is B than A (in inches)?




6) How much longer is B than A (in centimeters)?



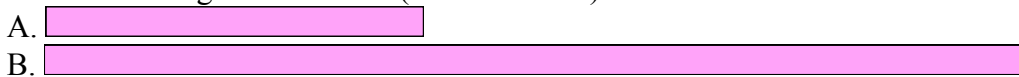
7) How much longer is A than B (in centimeters)?



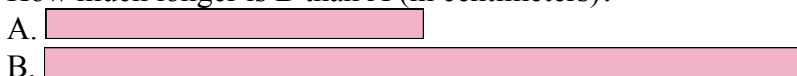
8) How much longer is B than A (in centimeters)?



9) How much longer is B than A (in centimeters)?



10) How much longer is B than A (in centimeters)?



Answers


1. \_\_\_\_\_
2. \_\_\_\_\_
3. \_\_\_\_\_
4. \_\_\_\_\_
5. \_\_\_\_\_
6. \_\_\_\_\_
7. \_\_\_\_\_
8. \_\_\_\_\_
9. \_\_\_\_\_
10. \_\_\_\_\_

In		1		2		3		4		5		6		7				
Cm	1	2	3	4	5	6	7	8	9	10	11	12	13	14	15	16	17	18
In		1		2		3		4		5		6		7				
Cm	1	2	3	4	5	6	7	8	9	10	11	12	13	14	15	16	17	18
In		1		2		3		4		5		6		7				
Cm	1	2	3	4	5	6	7	8	9	10	11	12	13	14	15	16	17	18
In		1		2		3		4		5		6		7				
Cm	1	2	3	4	5	6	7	8	9	10	11	12	13	14	15	16	17	18
In		1		2		3		4		5		6		7				
Cm	1	2	3	4	5	6	7	8	9	10	11	12	13	14	15	16	17	18
In		1		2		3		4		5		6		7				
Cm	1	2	3	4	5	6	7	8	9	10	11	12	13	14	15	16	17	18
In		1		2		3		4		5		6		7				
Cm	1	2	3	4	5	6	7	8	9	10	11	12	13	14	15	16	17	18
In		1		2		3		4		5		6		7				
Cm	1	2	3	4	5	6	7	8	9	10	11	12	13	14	15	16	17	18
In		1		2		3		4		5		6		7				
Cm	1	2	3	4	5	6	7	8	9	10	11	12	13	14	15	16	17	18
In		1		2		3		4		5		6		7				
Cm	1	2	3	4	5	6	7	8	9	10	11	12	13	14	15	16	17	18
In		1		2		3		4		5		6		7				
Cm	1	2	3	4	5	6	7	8	9	10	11	12	13	14	15	16	17	18




Compare the width of the two blocks.

1) How much longer is A than B (in inches)?



1. 4

2) How much longer is A than B (in inches)?



2. 1

3. 1

3) How much longer is B than A (in inches)?



4. 1

5. 4


4) How much longer is B than A (in inches)?



6. 3

7. 3

5) How much longer is B than A (in inches)?



8. 10


9. 8

6) How much longer is B than A (in centimeters)?




10. 5


7) How much longer is A than B (in centimeters)?



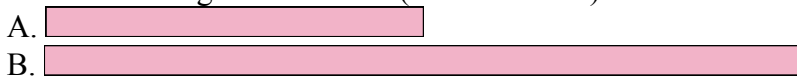
8) How much longer is B than A (in centimeters)?



9) How much longer is B than A (in centimeters)?



10) How much longer is B than A (in centimeters)?




Answers

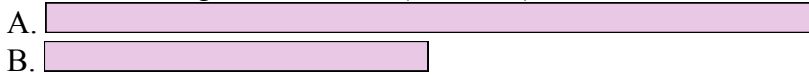


Compare the width of the two blocks.


1) How much longer is B than A (in inches)?




2) How much longer is A than B (in inches)?




3) How much longer is A than B (in inches)?




4) How much longer is A than B (in inches)?



5) How much longer is B than A (in inches)?



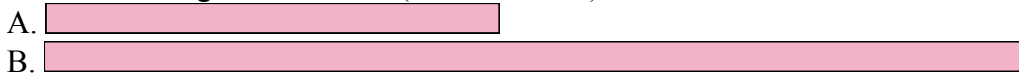
6) How much longer is A than B (in centimeters)?



7) How much longer is A than B (in centimeters)?



8) How much longer is B than A (in centimeters)?



9) How much longer is A than B (in centimeters)?



10) How much longer is A than B (in centimeters)?



Answers

1. \_\_\_\_\_
2. \_\_\_\_\_
3. \_\_\_\_\_
4. \_\_\_\_\_
5. \_\_\_\_\_
6. \_\_\_\_\_
7. \_\_\_\_\_
8. \_\_\_\_\_
9. \_\_\_\_\_
10. \_\_\_\_\_




In		1		2		3		4		5		6		7				
Cm	1	2	3	4	5	6	7	8	9	10	11	12	13	14	15	16	17	18
In		1		2		3		4		5		6		7				
Cm	1	2	3	4	5	6	7	8	9	10	11	12	13	14	15	16	17	18
In		1		2		3		4		5		6		7				
Cm	1	2	3	4	5	6	7	8	9	10	11	12	13	14	15	16	17	18
In		1		2		3		4		5		6		7				
Cm	1	2	3	4	5	6	7	8	9	10	11	12	13	14	15	16	17	18
In		1		2		3		4		5		6		7				
Cm	1	2	3	4	5	6	7	8	9	10	11	12	13	14	15	16	17	18
In		1		2		3		4		5		6		7				
Cm	1	2	3	4	5	6	7	8	9	10	11	12	13	14	15	16	17	18
In		1		2		3		4		5		6		7				
Cm	1	2	3	4	5	6	7	8	9	10	11	12	13	14	15	16	17	18
In		1		2		3		4		5		6		7				
Cm	1	2	3	4	5	6	7	8	9	10	11	12	13	14	15	16	17	18
In		1		2		3		4		5		6		7				
Cm	1	2	3	4	5	6	7	8	9	10	11	12	13	14	15	16	17	18
In		1		2		3		4		5		6		7				
Cm	1	2	3	4	5	6	7	8	9	10	11	12	13	14	15	16	17	18
In		1		2		3		4		5		6		7				
Cm	1	2	3	4	5	6	7	8	9	10	11	12	13	14	15	16	17	18



Compare the width of the two blocks.

1) How much longer is B than A (in inches)?




1. 3

2) How much longer is A than B (in inches)?




2. 2

3) How much longer is A than B (in inches)?



3. 4

4) How much longer is A than B (in inches)?



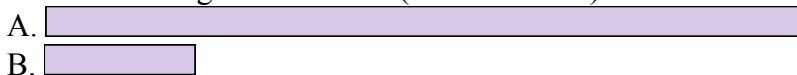
4. 4

5) How much longer is B than A (in inches)?



5. 2

6) How much longer is A than B (in centimeters)?



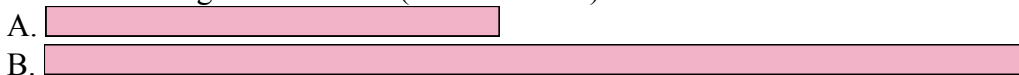
6. 8

7) How much longer is A than B (in centimeters)?



7. 6

8) How much longer is B than A (in centimeters)?




8. 7

9) How much longer is A than B (in centimeters)?



9. 3

10) How much longer is A than B (in centimeters)?




10. 5

Answers



Compare the width of the two blocks.


1) How much longer is A than B (in inches)?



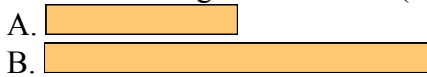
2) How much longer is B than A (in inches)?




3) How much longer is B than A (in inches)?



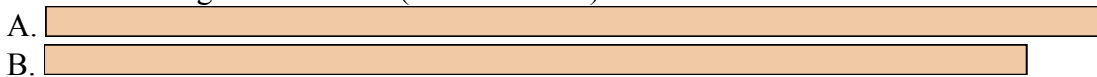
4) How much longer is B than A (in inches)?



5) How much longer is A than B (in inches)?



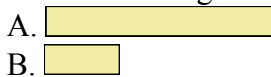
6) How much longer is A than B (in centimeters)?




7) How much longer is B than A (in centimeters)?




8) How much longer is A than B (in centimeters)?



9) How much longer is A than B (in centimeters)?



10) How much longer is A than B (in centimeters)?



Answers


1. \_\_\_\_\_
2. \_\_\_\_\_
3. \_\_\_\_\_
4. \_\_\_\_\_
5. \_\_\_\_\_
6. \_\_\_\_\_
7. \_\_\_\_\_
8. \_\_\_\_\_
9. \_\_\_\_\_
10. \_\_\_\_\_

In		1		2		3		4		5		6		7				
Cm	1	2	3	4	5	6	7	8	9	10	11	12	13	14	15	16	17	18
In		1		2		3		4		5		6		7				
Cm	1	2	3	4	5	6	7	8	9	10	11	12	13	14	15	16	17	18
In		1		2		3		4		5		6		7				
Cm	1	2	3	4	5	6	7	8	9	10	11	12	13	14	15	16	17	18
In		1		2		3		4		5		6		7				
Cm	1	2	3	4	5	6	7	8	9	10	11	12	13	14	15	16	17	18
In		1		2		3		4		5		6		7				
Cm	1	2	3	4	5	6	7	8	9	10	11	12	13	14	15	16	17	18
In		1		2		3		4		5		6		7				
Cm	1	2	3	4	5	6	7	8	9	10	11	12	13	14	15	16	17	18
In		1		2		3		4		5		6		7				
Cm	1	2	3	4	5	6	7	8	9	10	11	12	13	14	15	16	17	18
In		1		2		3		4		5		6		7				
Cm	1	2	3	4	5	6	7	8	9	10	11	12	13	14	15	16	17	18
In		1		2		3		4		5		6		7				
Cm	1	2	3	4	5	6	7	8	9	10	11	12	13	14	15	16	17	18
In		1		2		3		4		5		6		7				
Cm	1	2	3	4	5	6	7	8	9	10	11	12	13	14	15	16	17	18
In		1		2		3		4		5		6		7				
Cm	1	2	3	4	5	6	7	8	9	10	11	12	13	14	15	16	17	18



Compare the width of the two blocks.

1) How much longer is A than B (in inches)?




1. 2

2) How much longer is B than A (in inches)?



2. 1

3) How much longer is B than A (in inches)?




3. 2

4) How much longer is B than A (in inches)?



4. 1

5) How much longer is A than B (in inches)?



5. 2

6) How much longer is A than B (in centimeters)?



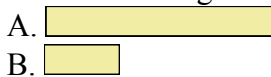
6. 1

7) How much longer is B than A (in centimeters)?




7. 4

8) How much longer is A than B (in centimeters)?



8. 2

9) How much longer is A than B (in centimeters)?



9. 3

10) How much longer is A than B (in centimeters)?




10. 1

Answers

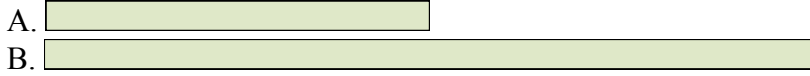


Compare the width of the two blocks.


1) How much longer is A than B (in inches)?




2) How much longer is B than A (in inches)?




3) How much longer is B than A (in inches)?



4) How much longer is B than A (in inches)?




5) How much longer is B than A (in inches)?



6) How much longer is B than A (in centimeters)?




7) How much longer is B than A (in centimeters)?



8) How much longer is B than A (in centimeters)?



9) How much longer is A than B (in centimeters)?



10) How much longer is B than A (in centimeters)?



Answers


1. \_\_\_\_\_
2. \_\_\_\_\_
3. \_\_\_\_\_
4. \_\_\_\_\_
5. \_\_\_\_\_
6. \_\_\_\_\_
7. \_\_\_\_\_
8. \_\_\_\_\_
9. \_\_\_\_\_
10. \_\_\_\_\_

In		1		2		3		4		5		6		7				
Cm	1	2	3	4	5	6	7	8	9	10	11	12	13	14	15	16	17	18
In		1		2		3		4		5		6		7				
Cm	1	2	3	4	5	6	7	8	9	10	11	12	13	14	15	16	17	18
In		1		2		3		4		5		6		7				
Cm	1	2	3	4	5	6	7	8	9	10	11	12	13	14	15	16	17	18
In		1		2		3		4		5		6		7				
Cm	1	2	3	4	5	6	7	8	9	10	11	12	13	14	15	16	17	18
In		1		2		3		4		5		6		7				
Cm	1	2	3	4	5	6	7	8	9	10	11	12	13	14	15	16	17	18
In		1		2		3		4		5		6		7				
Cm	1	2	3	4	5	6	7	8	9	10	11	12	13	14	15	16	17	18
In		1		2		3		4		5		6		7				
Cm	1	2	3	4	5	6	7	8	9	10	11	12	13	14	15	16	17	18
In		1		2		3		4		5		6		7				
Cm	1	2	3	4	5	6	7	8	9	10	11	12	13	14	15	16	17	18
In		1		2		3		4		5		6		7				
Cm	1	2	3	4	5	6	7	8	9	10	11	12	13	14	15	16	17	18
In		1		2		3		4		5		6		7				
Cm	1	2	3	4	5	6	7	8	9	10	11	12	13	14	15	16	17	18
In		1		2		3		4		5		6		7				
Cm	1	2	3	4	5	6	7	8	9	10	11	12	13	14	15	16	17	18



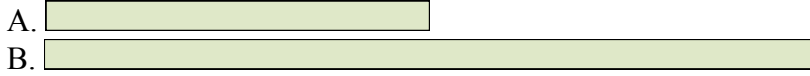
Compare the width of the two blocks.

1) How much longer is A than B (in inches)?




1. 3

2) How much longer is B than A (in inches)?



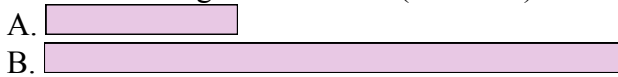
2. 2

3) How much longer is B than A (in inches)?




3. 1

4) How much longer is B than A (in inches)?




4. 2

5) How much longer is B than A (in inches)?



5. 3

6) How much longer is B than A (in centimeters)?



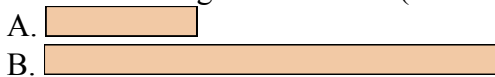
6. 4

7) How much longer is B than A (in centimeters)?




7. 3

8) How much longer is B than A (in centimeters)?



8. 4

9) How much longer is A than B (in centimeters)?



9. 6

10) How much longer is B than A (in centimeters)?



10. 9


Answers






Compare the width of the two blocks.


1) How much longer is B than A (in inches)?




2) How much longer is B than A (in inches)?



3) How much longer is A than B (in inches)?




4) How much longer is A than B (in inches)?



5) How much longer is A than B (in inches)?




6) How much longer is A than B (in centimeters)?



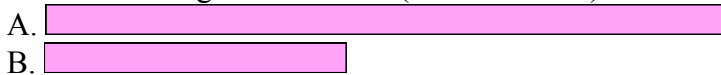
7) How much longer is B than A (in centimeters)?



8) How much longer is A than B (in centimeters)?



9) How much longer is A than B (in centimeters)?



10) How much longer is B than A (in centimeters)?



Answers


1. \_\_\_\_\_
2. \_\_\_\_\_
3. \_\_\_\_\_
4. \_\_\_\_\_
5. \_\_\_\_\_
6. \_\_\_\_\_
7. \_\_\_\_\_
8. \_\_\_\_\_
9. \_\_\_\_\_
10. \_\_\_\_\_

In		1		2		3		4		5		6		7				
Cm	1	2	3	4	5	6	7	8	9	10	11	12	13	14	15	16	17	18
In		1		2		3		4		5		6		7				
Cm	1	2	3	4	5	6	7	8	9	10	11	12	13	14	15	16	17	18
In		1		2		3		4		5		6		7				
Cm	1	2	3	4	5	6	7	8	9	10	11	12	13	14	15	16	17	18
In		1		2		3		4		5		6		7				
Cm	1	2	3	4	5	6	7	8	9	10	11	12	13	14	15	16	17	18
In		1		2		3		4		5		6		7				
Cm	1	2	3	4	5	6	7	8	9	10	11	12	13	14	15	16	17	18
In		1		2		3		4		5		6		7				
Cm	1	2	3	4	5	6	7	8	9	10	11	12	13	14	15	16	17	18
In		1		2		3		4		5		6		7				
Cm	1	2	3	4	5	6	7	8	9	10	11	12	13	14	15	16	17	18
In		1		2		3		4		5		6		7				
Cm	1	2	3	4	5	6	7	8	9	10	11	12	13	14	15	16	17	18
In		1		2		3		4		5		6		7				
Cm	1	2	3	4	5	6	7	8	9	10	11	12	13	14	15	16	17	18
In		1		2		3		4		5		6		7				
Cm	1	2	3	4	5	6	7	8	9	10	11	12	13	14	15	16	17	18
In		1		2		3		4		5		6		7				
Cm	1	2	3	4	5	6	7	8	9	10	11	12	13	14	15	16	17	18




Compare the width of the two blocks.

1) How much longer is B than A (in inches)?




1. 4

2) How much longer is B than A (in inches)?



2. 1

3) How much longer is A than B (in inches)?



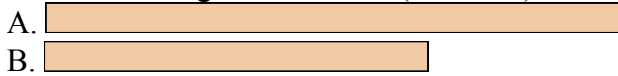
3. 1

4) How much longer is A than B (in inches)?



4. 2

5) How much longer is A than B (in inches)?



5. 1

6) How much longer is A than B (in centimeters)?



6. 4

7) How much longer is B than A (in centimeters)?



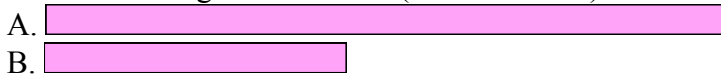
7. 13

8) How much longer is A than B (in centimeters)?



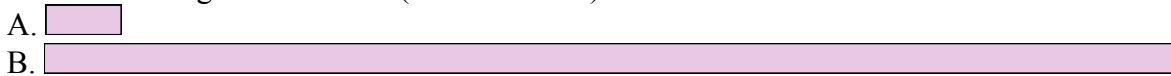
8. 8

9) How much longer is A than B (in centimeters)?



9. 5

10) How much longer is B than A (in centimeters)?




10. 14

Answers




Compare the width of the two blocks.

1) How much longer is A than B (in inches)?




2) How much longer is B than A (in inches)?



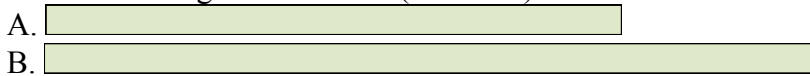
3) How much longer is A than B (in inches)?



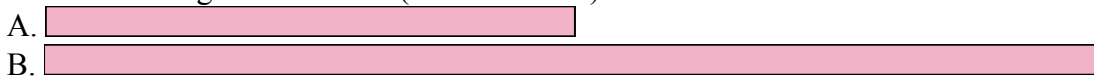
4) How much longer is A than B (in inches)?



5) How much longer is B than A (in inches)?




6) How much longer is B than A (in centimeters)?



7) How much longer is B than A (in centimeters)?



8) How much longer is A than B (in centimeters)?



9) How much longer is B than A (in centimeters)?



10) How much longer is A than B (in centimeters)?



Answers


1. \_\_\_\_\_
2. \_\_\_\_\_
3. \_\_\_\_\_
4. \_\_\_\_\_
5. \_\_\_\_\_
6. \_\_\_\_\_
7. \_\_\_\_\_
8. \_\_\_\_\_
9. \_\_\_\_\_
10. \_\_\_\_\_

In		1		2		3		4		5		6		7				
Cm	1	2	3	4	5	6	7	8	9	10	11	12	13	14	15	16	17	18
In		1		2		3		4		5		6		7				
Cm	1	2	3	4	5	6	7	8	9	10	11	12	13	14	15	16	17	18
In		1		2		3		4		5		6		7				
Cm	1	2	3	4	5	6	7	8	9	10	11	12	13	14	15	16	17	18
In		1		2		3		4		5		6		7				
Cm	1	2	3	4	5	6	7	8	9	10	11	12	13	14	15	16	17	18
In		1		2		3		4		5		6		7				
Cm	1	2	3	4	5	6	7	8	9	10	11	12	13	14	15	16	17	18
In		1		2		3		4		5		6		7				
Cm	1	2	3	4	5	6	7	8	9	10	11	12	13	14	15	16	17	18
In		1		2		3		4		5		6		7				
Cm	1	2	3	4	5	6	7	8	9	10	11	12	13	14	15	16	17	18
In		1		2		3		4		5		6		7				
Cm	1	2	3	4	5	6	7	8	9	10	11	12	13	14	15	16	17	18
In		1		2		3		4		5		6		7				
Cm	1	2	3	4	5	6	7	8	9	10	11	12	13	14	15	16	17	18
In		1		2		3		4		5		6		7				
Cm	1	2	3	4	5	6	7	8	9	10	11	12	13	14	15	16	17	18
In		1		2		3		4		5		6		7				
Cm	1	2	3	4	5	6	7	8	9	10	11	12	13	14	15	16	17	18




Compare the width of the two blocks.

1) How much longer is A than B (in inches)?



1. 1

2) How much longer is B than A (in inches)?




2. 1

3) How much longer is A than B (in inches)?



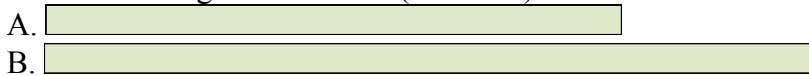
3. 1

4) How much longer is A than B (in inches)?



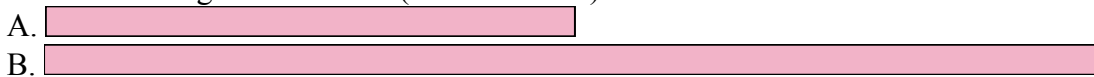
4. 1

5) How much longer is B than A (in inches)?




5. 1

6) How much longer is B than A (in centimeters)?




6. 7

7) How much longer is B than A (in centimeters)?



7. 2

8) How much longer is A than B (in centimeters)?



8. 13

9) How much longer is B than A (in centimeters)?



9. 3

10) How much longer is A than B (in centimeters)?




10. 7

Answers

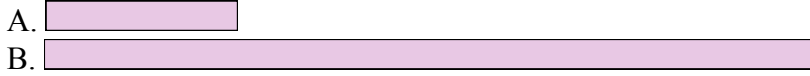


Compare the width of the two blocks.


1) How much longer is A than B (in inches)?



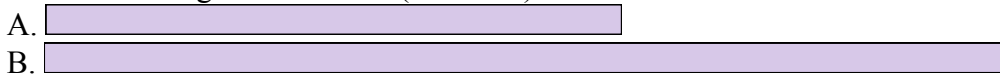
2) How much longer is B than A (in inches)?




3) How much longer is B than A (in inches)?




4) How much longer is B than A (in inches)?




5) How much longer is A than B (in inches)?



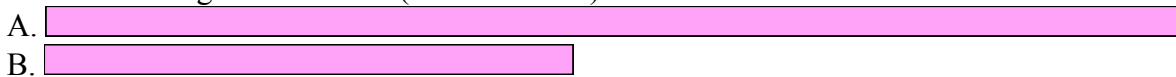
6) How much longer is B than A (in centimeters)?




7) How much longer is A than B (in centimeters)?




8) How much longer is A than B (in centimeters)?



9) How much longer is A than B (in centimeters)?



10) How much longer is B than A (in centimeters)?



Answers

1. \_\_\_\_\_
2. \_\_\_\_\_
3. \_\_\_\_\_
4. \_\_\_\_\_
5. \_\_\_\_\_
6. \_\_\_\_\_
7. \_\_\_\_\_
8. \_\_\_\_\_
9. \_\_\_\_\_
10. \_\_\_\_\_


In		1		2		3		4		5		6		7				
Cm	1	2	3	4	5	6	7	8	9	10	11	12	13	14	15	16	17	18
In		1		2		3		4		5		6		7				
Cm	1	2	3	4	5	6	7	8	9	10	11	12	13	14	15	16	17	18
In		1		2		3		4		5		6		7				
Cm	1	2	3	4	5	6	7	8	9	10	11	12	13	14	15	16	17	18
In		1		2		3		4		5		6		7				
Cm	1	2	3	4	5	6	7	8	9	10	11	12	13	14	15	16	17	18
In		1		2		3		4		5		6		7				
Cm	1	2	3	4	5	6	7	8	9	10	11	12	13	14	15	16	17	18
In		1		2		3		4		5		6		7				
Cm	1	2	3	4	5	6	7	8	9	10	11	12	13	14	15	16	17	18
In		1		2		3		4		5		6		7				
Cm	1	2	3	4	5	6	7	8	9	10	11	12	13	14	15	16	17	18
In		1		2		3		4		5		6		7				
Cm	1	2	3	4	5	6	7	8	9	10	11	12	13	14	15	16	17	18
In		1		2		3		4		5		6		7				
Cm	1	2	3	4	5	6	7	8	9	10	11	12	13	14	15	16	17	18
In		1		2		3		4		5		6		7				
Cm	1	2	3	4	5	6	7	8	9	10	11	12	13	14	15	16	17	18
In		1		2		3		4		5		6		7				
Cm	1	2	3	4	5	6	7	8	9	10	11	12	13	14	15	16	17	18






Compare the width of the two blocks.

1) How much longer is A than B (in inches)?




1. 1

2) How much longer is B than A (in inches)?



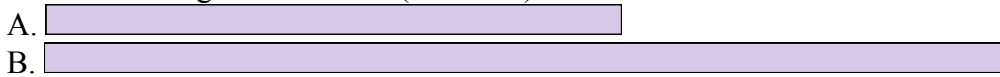
2. 3

3) How much longer is B than A (in inches)?




3. 1

4) How much longer is B than A (in inches)?



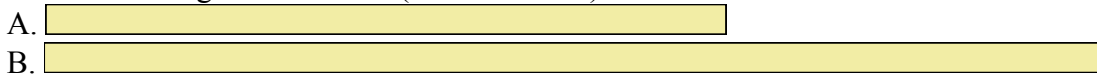
4. 2

5) How much longer is A than B (in inches)?




5. 2

6) How much longer is B than A (in centimeters)?



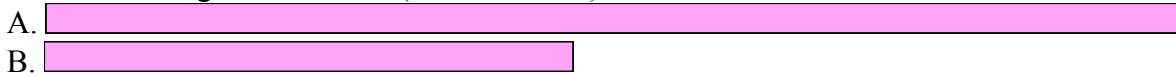
6. 5

7) How much longer is A than B (in centimeters)?




7. 4

8) How much longer is A than B (in centimeters)?



8. 8

9) How much longer is A than B (in centimeters)?



9. 10

10) How much longer is B than A (in centimeters)?




10. 4

Answers




Compare the width of the two blocks.


1) How much longer is A than B (in inches)?



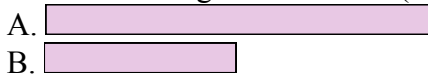
2) How much longer is B than A (in inches)?



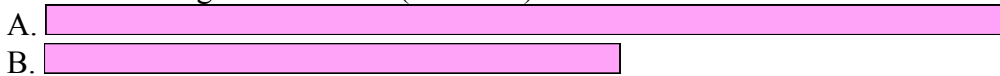
3) How much longer is A than B (in inches)?



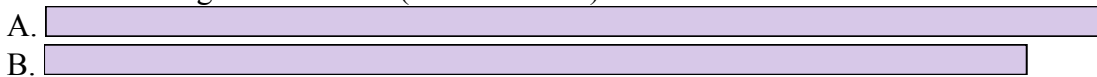
4) How much longer is A than B (in inches)?



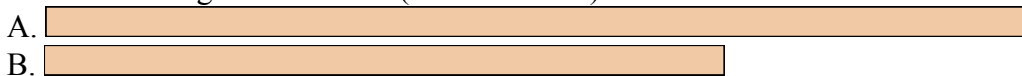
5) How much longer is A than B (in inches)?




6) How much longer is A than B (in centimeters)?




7) How much longer is A than B (in centimeters)?




8) How much longer is B than A (in centimeters)?



9) How much longer is B than A (in centimeters)?



10) How much longer is A than B (in centimeters)?



**Answers**


1. \_\_\_\_\_
2. \_\_\_\_\_
3. \_\_\_\_\_
4. \_\_\_\_\_
5. \_\_\_\_\_
6. \_\_\_\_\_
7. \_\_\_\_\_
8. \_\_\_\_\_
9. \_\_\_\_\_
10. \_\_\_\_\_

In		1		2		3		4		5		6		7				
Cm	1	2	3	4	5	6	7	8	9	10	11	12	13	14	15	16	17	18
In		1		2		3		4		5		6		7				
Cm	1	2	3	4	5	6	7	8	9	10	11	12	13	14	15	16	17	18
In		1		2		3		4		5		6		7				
Cm	1	2	3	4	5	6	7	8	9	10	11	12	13	14	15	16	17	18
In		1		2		3		4		5		6		7				
Cm	1	2	3	4	5	6	7	8	9	10	11	12	13	14	15	16	17	18
In		1		2		3		4		5		6		7				
Cm	1	2	3	4	5	6	7	8	9	10	11	12	13	14	15	16	17	18
In		1		2		3		4		5		6		7				
Cm	1	2	3	4	5	6	7	8	9	10	11	12	13	14	15	16	17	18
In		1		2		3		4		5		6		7				
Cm	1	2	3	4	5	6	7	8	9	10	11	12	13	14	15	16	17	18
In		1		2		3		4		5		6		7				
Cm	1	2	3	4	5	6	7	8	9	10	11	12	13	14	15	16	17	18
In		1		2		3		4		5		6		7				
Cm	1	2	3	4	5	6	7	8	9	10	11	12	13	14	15	16	17	18
In		1		2		3		4		5		6		7				
Cm	1	2	3	4	5	6	7	8	9	10	11	12	13	14	15	16	17	18
In		1		2		3		4		5		6		7				
Cm	1	2	3	4	5	6	7	8	9	10	11	12	13	14	15	16	17	18




Compare the width of the two blocks.

1) How much longer is A than B (in inches)?




1. 3

2) How much longer is B than A (in inches)?



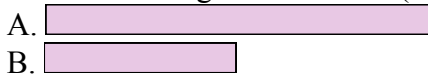
2. 1

3) How much longer is A than B (in inches)?



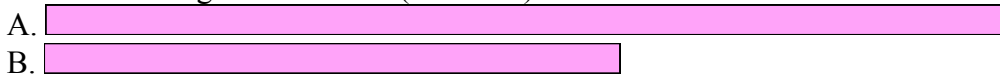
3. 1

4) How much longer is A than B (in inches)?



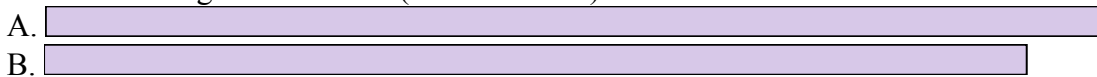
4. 1

5) How much longer is A than B (in inches)?



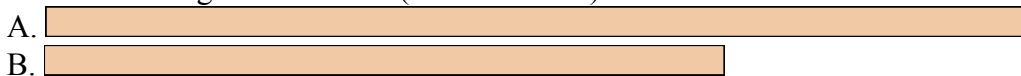
5. 2

6) How much longer is A than B (in centimeters)?




6. 1

7) How much longer is A than B (in centimeters)?



7. 4

8) How much longer is B than A (in centimeters)?




8. 3

9) How much longer is B than A (in centimeters)?



9. 13

10) How much longer is A than B (in centimeters)?




10. 7

Answers



Compare the width of the two blocks.


1) How much longer is A than B (in inches)?




2) How much longer is B than A (in inches)?



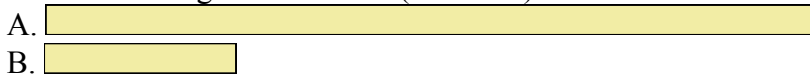
3) How much longer is A than B (in inches)?




4) How much longer is A than B (in inches)?



5) How much longer is A than B (in inches)?



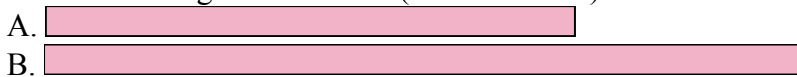
6) How much longer is A than B (in centimeters)?



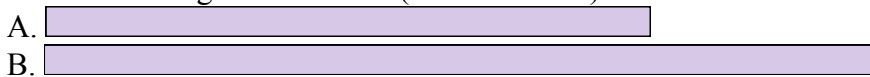
7) How much longer is A than B (in centimeters)?



8) How much longer is B than A (in centimeters)?



9) How much longer is B than A (in centimeters)?



10) How much longer is A than B (in centimeters)?



Answers


1. \_\_\_\_\_
2. \_\_\_\_\_
3. \_\_\_\_\_
4. \_\_\_\_\_
5. \_\_\_\_\_
6. \_\_\_\_\_
7. \_\_\_\_\_
8. \_\_\_\_\_
9. \_\_\_\_\_
10. \_\_\_\_\_

In		1		2		3		4		5		6		7				
Cm	1	2	3	4	5	6	7	8	9	10	11	12	13	14	15	16	17	18
In		1		2		3		4		5		6		7				
Cm	1	2	3	4	5	6	7	8	9	10	11	12	13	14	15	16	17	18
In		1		2		3		4		5		6		7				
Cm	1	2	3	4	5	6	7	8	9	10	11	12	13	14	15	16	17	18
In		1		2		3		4		5		6		7				
Cm	1	2	3	4	5	6	7	8	9	10	11	12	13	14	15	16	17	18
In		1		2		3		4		5		6		7				
Cm	1	2	3	4	5	6	7	8	9	10	11	12	13	14	15	16	17	18
In		1		2		3		4		5		6		7				
Cm	1	2	3	4	5	6	7	8	9	10	11	12	13	14	15	16	17	18
In		1		2		3		4		5		6		7				
Cm	1	2	3	4	5	6	7	8	9	10	11	12	13	14	15	16	17	18
In		1		2		3		4		5		6		7				
Cm	1	2	3	4	5	6	7	8	9	10	11	12	13	14	15	16	17	18
In		1		2		3		4		5		6		7				
Cm	1	2	3	4	5	6	7	8	9	10	11	12	13	14	15	16	17	18
In		1		2		3		4		5		6		7				
Cm	1	2	3	4	5	6	7	8	9	10	11	12	13	14	15	16	17	18
In		1		2		3		4		5		6		7				
Cm	1	2	3	4	5	6	7	8	9	10	11	12	13	14	15	16	17	18




Compare the width of the two blocks.

1) How much longer is A than B (in inches)?



1. 1


2) How much longer is B than A (in inches)?



2. 1

3. 3


3) How much longer is A than B (in inches)?



4. 4

5. 3


4) How much longer is A than B (in inches)?



6. 11

7. 1


5) How much longer is A than B (in inches)?



8. 3

9. 3

6) How much longer is A than B (in centimeters)?




10. 3


7) How much longer is A than B (in centimeters)?



8) How much longer is B than A (in centimeters)?



9) How much longer is B than A (in centimeters)?



10) How much longer is A than B (in centimeters)?

