





Compare the width of the two blocks.


1) How much longer is B than A (in inches)?

A. 

B. 


2) How much longer is B than A (in inches)?

A. 

B. 

3) How much longer is A than B (in inches)?

A. 

B. 

4) How much longer is A than B (in inches)?

A. 

B.

5) How much longer is A than B (in inches)?

A. 

B.

6) How much longer is A than B (in centimeters)?

A.

B.

7) How much longer is B than A (in centimeters)?

A.

B. 

8) How much longer is A than B (in centimeters)?

A.

B.

9) How much longer is A than B (in centimeters)?

A.

B.

10) How much longer is B than A (in centimeters)?

A.

B.

Answers

1. _____

2. _____

3. _____

4. _____

5. _____

6. _____

7. _____

8. _____

9. _____


10. _____

In		1		2		3		4		5		6		7				
Cm	1	2	3	4	5	6	7	8	9	10	11	12	13	14	15	16	17	18
In		1		2		3		4		5		6		7				
Cm	1	2	3	4	5	6	7	8	9	10	11	12	13	14	15	16	17	18
In		1		2		3		4		5		6		7				
Cm	1	2	3	4	5	6	7	8	9	10	11	12	13	14	15	16	17	18
In		1		2		3		4		5		6		7				
Cm	1	2	3	4	5	6	7	8	9	10	11	12	13	14	15	16	17	18
In		1		2		3		4		5		6		7				
Cm	1	2	3	4	5	6	7	8	9	10	11	12	13	14	15	16	17	18
In		1		2		3		4		5		6		7				
Cm	1	2	3	4	5	6	7	8	9	10	11	12	13	14	15	16	17	18
In		1		2		3		4		5		6		7				
Cm	1	2	3	4	5	6	7	8	9	10	11	12	13	14	15	16	17	18
In		1		2		3		4		5		6		7				
Cm	1	2	3	4	5	6	7	8	9	10	11	12	13	14	15	16	17	18
In		1		2		3		4		5		6		7				
Cm	1	2	3	4	5	6	7	8	9	10	11	12	13	14	15	16	17	18
In		1		2		3		4		5		6		7				
Cm	1	2	3	4	5	6	7	8	9	10	11	12	13	14	15	16	17	18
In		1		2		3		4		5		6		7				
Cm	1	2	3	4	5	6	7	8	9	10	11	12	13	14	15	16	17	18



Compare the width of the two blocks.

1) How much longer is B than A (in inches)?




1. 4

2) How much longer is B than A (in inches)?



2. 1

3) How much longer is A than B (in inches)?



3. 1

4) How much longer is A than B (in inches)?



4. 2

5) How much longer is A than B (in inches)?



5. 1

6) How much longer is A than B (in centimeters)?




6. 4

7) How much longer is B than A (in centimeters)?



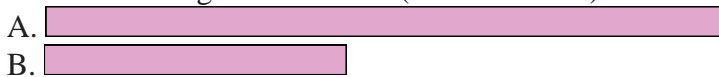
7. 13

8) How much longer is A than B (in centimeters)?



8. 8

9) How much longer is A than B (in centimeters)?



9. 5

10) How much longer is B than A (in centimeters)?



10. 14

Answers