

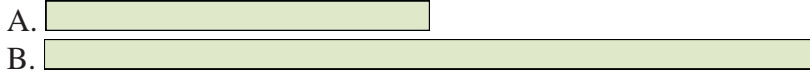


Compare the width of the two blocks.


1) How much longer is A than B (in inches)?




2) How much longer is B than A (in inches)?




3) How much longer is B than A (in inches)?



4) How much longer is B than A (in inches)?



5) How much longer is B than A (in inches)?



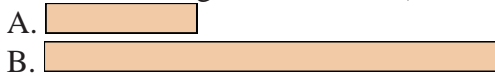
6) How much longer is B than A (in centimeters)?



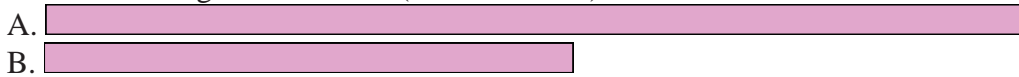
7) How much longer is B than A (in centimeters)?



8) How much longer is B than A (in centimeters)?



9) How much longer is A than B (in centimeters)?



10) How much longer is B than A (in centimeters)?



Answers


1. _____
2. _____
3. _____
4. _____
5. _____
6. _____
7. _____
8. _____
9. _____
10. _____

In		1		2		3		4		5		6		7				
Cm	1	2	3	4	5	6	7	8	9	10	11	12	13	14	15	16	17	18
In		1		2		3		4		5		6		7				
Cm	1	2	3	4	5	6	7	8	9	10	11	12	13	14	15	16	17	18
In		1		2		3		4		5		6		7				
Cm	1	2	3	4	5	6	7	8	9	10	11	12	13	14	15	16	17	18
In		1		2		3		4		5		6		7				
Cm	1	2	3	4	5	6	7	8	9	10	11	12	13	14	15	16	17	18
In		1		2		3		4		5		6		7				
Cm	1	2	3	4	5	6	7	8	9	10	11	12	13	14	15	16	17	18
In		1		2		3		4		5		6		7				
Cm	1	2	3	4	5	6	7	8	9	10	11	12	13	14	15	16	17	18
In		1		2		3		4		5		6		7				
Cm	1	2	3	4	5	6	7	8	9	10	11	12	13	14	15	16	17	18
In		1		2		3		4		5		6		7				
Cm	1	2	3	4	5	6	7	8	9	10	11	12	13	14	15	16	17	18
In		1		2		3		4		5		6		7				
Cm	1	2	3	4	5	6	7	8	9	10	11	12	13	14	15	16	17	18
In		1		2		3		4		5		6		7				
Cm	1	2	3	4	5	6	7	8	9	10	11	12	13	14	15	16	17	18
In		1		2		3		4		5		6		7				
Cm	1	2	3	4	5	6	7	8	9	10	11	12	13	14	15	16	17	18

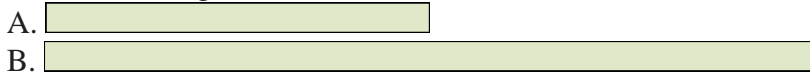


Compare the width of the two blocks.

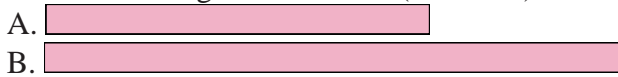
1) How much longer is A than B (in inches)?



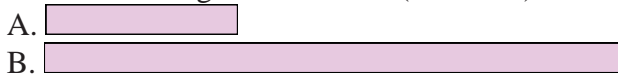
2) How much longer is B than A (in inches)?




3) How much longer is B than A (in inches)?




4) How much longer is B than A (in inches)?



5) How much longer is B than A (in inches)?



6) How much longer is B than A (in centimeters)?



7) How much longer is B than A (in centimeters)?




8) How much longer is B than A (in centimeters)?



9) How much longer is A than B (in centimeters)?



10) How much longer is B than A (in centimeters)?



Answers

1. 3

2. 2

3. 1

4. 2

5. 3

6. 4

7. 3

8. 4

9. 6

10. 9