



Compare the width of the two blocks.

1) How much longer is A than B (in inches)?



1. \_\_\_\_\_

2) How much longer is B than A (in inches)?



2. \_\_\_\_\_

3) How much longer is B than A (in inches)?




3. \_\_\_\_\_

4) How much longer is B than A (in inches)?



4. \_\_\_\_\_

5) How much longer is A than B (in inches)?



5. \_\_\_\_\_

6) How much longer is A than B (in centimeters)?




6. \_\_\_\_\_

7) How much longer is B than A (in centimeters)?




7. \_\_\_\_\_

8) How much longer is A than B (in centimeters)?



8. \_\_\_\_\_

9) How much longer is A than B (in centimeters)?



9. \_\_\_\_\_

10) How much longer is A than B (in centimeters)?



10. \_\_\_\_\_


Answers

In		1		2		3		4		5		6		7				
Cm	1	2	3	4	5	6	7	8	9	10	11	12	13	14	15	16	17	18
In		1		2		3		4		5		6		7				
Cm	1	2	3	4	5	6	7	8	9	10	11	12	13	14	15	16	17	18
In		1		2		3		4		5		6		7				
Cm	1	2	3	4	5	6	7	8	9	10	11	12	13	14	15	16	17	18
In		1		2		3		4		5		6		7				
Cm	1	2	3	4	5	6	7	8	9	10	11	12	13	14	15	16	17	18
In		1		2		3		4		5		6		7				
Cm	1	2	3	4	5	6	7	8	9	10	11	12	13	14	15	16	17	18
In		1		2		3		4		5		6		7				
Cm	1	2	3	4	5	6	7	8	9	10	11	12	13	14	15	16	17	18
In		1		2		3		4		5		6		7				
Cm	1	2	3	4	5	6	7	8	9	10	11	12	13	14	15	16	17	18
In		1		2		3		4		5		6		7				
Cm	1	2	3	4	5	6	7	8	9	10	11	12	13	14	15	16	17	18
In		1		2		3		4		5		6		7				
Cm	1	2	3	4	5	6	7	8	9	10	11	12	13	14	15	16	17	18
In		1		2		3		4		5		6		7				
Cm	1	2	3	4	5	6	7	8	9	10	11	12	13	14	15	16	17	18
In		1		2		3		4		5		6		7				
Cm	1	2	3	4	5	6	7	8	9	10	11	12	13	14	15	16	17	18

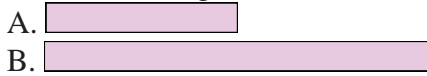


Compare the width of the two blocks.


1) How much longer is A than B (in inches)?



2) How much longer is B than A (in inches)?




3) How much longer is B than A (in inches)?



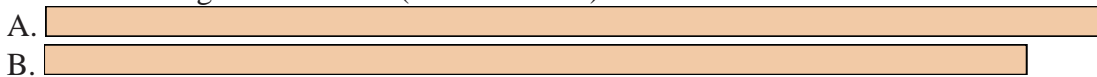
4) How much longer is B than A (in inches)?



5) How much longer is A than B (in inches)?




6) How much longer is A than B (in centimeters)?




7) How much longer is B than A (in centimeters)?




8) How much longer is A than B (in centimeters)?



9) How much longer is A than B (in centimeters)?



10) How much longer is A than B (in centimeters)?



Answers

- 1. 2
- 2. 1
- 3. 2
- 4. 1
- 5. 2
- 6. 1
- 7. 4
- 8. 2
- 9. 3
- 10. 1