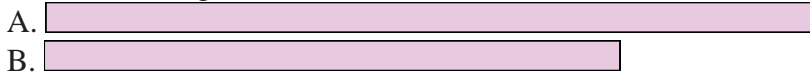




Compare the width of the two blocks.

1) How much longer is A than B (in inches)?




2) How much longer is B than A (in inches)?




3) How much longer is A than B (in inches)?




4) How much longer is A than B (in inches)?



5) How much longer is A than B (in inches)?



6) How much longer is A than B (in centimeters)?



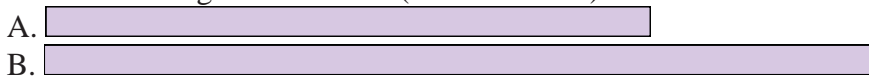
7) How much longer is A than B (in centimeters)?




8) How much longer is B than A (in centimeters)?



9) How much longer is B than A (in centimeters)?



10) How much longer is A than B (in centimeters)?



Answers


1. _____
2. _____
3. _____
4. _____
5. _____
6. _____
7. _____
8. _____
9. _____
10. _____

In		1		2		3		4		5		6		7				
Cm	1	2	3	4	5	6	7	8	9	10	11	12	13	14	15	16	17	18
In		1		2		3		4		5		6		7				
Cm	1	2	3	4	5	6	7	8	9	10	11	12	13	14	15	16	17	18
In		1		2		3		4		5		6		7				
Cm	1	2	3	4	5	6	7	8	9	10	11	12	13	14	15	16	17	18
In		1		2		3		4		5		6		7				
Cm	1	2	3	4	5	6	7	8	9	10	11	12	13	14	15	16	17	18
In		1		2		3		4		5		6		7				
Cm	1	2	3	4	5	6	7	8	9	10	11	12	13	14	15	16	17	18
In		1		2		3		4		5		6		7				
Cm	1	2	3	4	5	6	7	8	9	10	11	12	13	14	15	16	17	18
In		1		2		3		4		5		6		7				
Cm	1	2	3	4	5	6	7	8	9	10	11	12	13	14	15	16	17	18
In		1		2		3		4		5		6		7				
Cm	1	2	3	4	5	6	7	8	9	10	11	12	13	14	15	16	17	18
In		1		2		3		4		5		6		7				
Cm	1	2	3	4	5	6	7	8	9	10	11	12	13	14	15	16	17	18
In		1		2		3		4		5		6		7				
Cm	1	2	3	4	5	6	7	8	9	10	11	12	13	14	15	16	17	18
In		1		2		3		4		5		6		7				
Cm	1	2	3	4	5	6	7	8	9	10	11	12	13	14	15	16	17	18



Compare the width of the two blocks.

1) How much longer is A than B (in inches)?




1. 1

2) How much longer is B than A (in inches)?



2. 1

3) How much longer is A than B (in inches)?




3. 3

4) How much longer is A than B (in inches)?




4. 4

5) How much longer is A than B (in inches)?



5. 3

6) How much longer is A than B (in centimeters)?



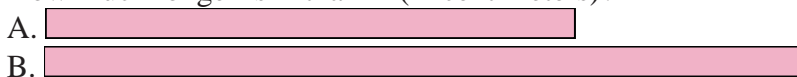
6. 11

7) How much longer is A than B (in centimeters)?




7. 1

8) How much longer is B than A (in centimeters)?



8. 3

9) How much longer is B than A (in centimeters)?



9. 3

10) How much longer is A than B (in centimeters)?



10. 3

Answers