




Compare the width of the two blocks.


1) How much longer is A than B (in inches)?



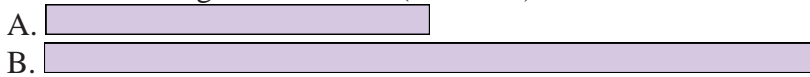
2) How much longer is A than B (in inches)?




3) How much longer is B than A (in inches)?



4) How much longer is B than A (in inches)?



5) How much longer is A than B (in inches)?



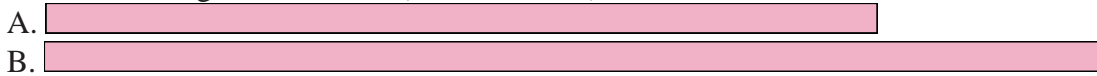
6) How much longer is B than A (in centimeters)?



7) How much longer is A than B (in centimeters)?



8) How much longer is B than A (in centimeters)?



9) How much longer is A than B (in centimeters)?



10) How much longer is B than A (in centimeters)?



Answers


1. _____
2. _____
3. _____
4. _____
5. _____
6. _____
7. _____
8. _____
9. _____
10. _____

In		1		2		3		4		5		6		7				
Cm	1	2	3	4	5	6	7	8	9	10	11	12	13	14	15	16	17	18
In		1		2		3		4		5		6		7				
Cm	1	2	3	4	5	6	7	8	9	10	11	12	13	14	15	16	17	18
In		1		2		3		4		5		6		7				
Cm	1	2	3	4	5	6	7	8	9	10	11	12	13	14	15	16	17	18
In		1		2		3		4		5		6		7				
Cm	1	2	3	4	5	6	7	8	9	10	11	12	13	14	15	16	17	18
In		1		2		3		4		5		6		7				
Cm	1	2	3	4	5	6	7	8	9	10	11	12	13	14	15	16	17	18
In		1		2		3		4		5		6		7				
Cm	1	2	3	4	5	6	7	8	9	10	11	12	13	14	15	16	17	18
In		1		2		3		4		5		6		7				
Cm	1	2	3	4	5	6	7	8	9	10	11	12	13	14	15	16	17	18
In		1		2		3		4		5		6		7				
Cm	1	2	3	4	5	6	7	8	9	10	11	12	13	14	15	16	17	18
In		1		2		3		4		5		6		7				
Cm	1	2	3	4	5	6	7	8	9	10	11	12	13	14	15	16	17	18
In		1		2		3		4		5		6		7				
Cm	1	2	3	4	5	6	7	8	9	10	11	12	13	14	15	16	17	18
In		1		2		3		4		5		6		7				
Cm	1	2	3	4	5	6	7	8	9	10	11	12	13	14	15	16	17	18




Compare the width of the two blocks.

1) How much longer is A than B (in inches)?




1. **1**

2) How much longer is A than B (in inches)?



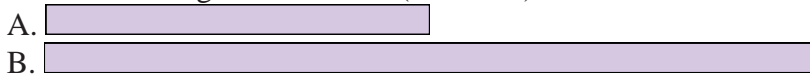
2. **3**

3) How much longer is B than A (in inches)?



3. **1**

4) How much longer is B than A (in inches)?



4. **2**

5) How much longer is A than B (in inches)?



5. **3**

6) How much longer is B than A (in centimeters)?



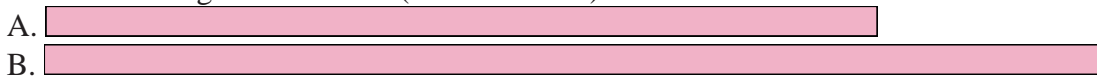
6. **4**

7) How much longer is A than B (in centimeters)?



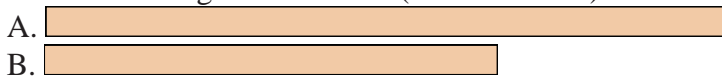
7. **4**

8) How much longer is B than A (in centimeters)?



8. **3**

9) How much longer is A than B (in centimeters)?



9. **3**

10) How much longer is B than A (in centimeters)?



10. **10**

Answers