




Measure the width and height of each block in inches and in centimeters.

Ex)




1)




2)



3)



4)



Answers

Ex. (w - in) 5

Ex. (h - in) 1 1/2

Ex. (w - cm) 12

Ex. (h - cm) 4

1. (w - in) _____

1. (h - in) _____

1. (w - cm) _____

1. (h - cm) _____

2. (w - in) _____

2. (h - in) _____

2. (w - cm) _____

2. (h - cm) _____

3. (w - in) _____

3. (h - in) _____

3. (w - cm) _____

3. (h - cm) _____

4. (w - in) _____

4. (h - in) _____

4. (w - cm) _____


4. (h - cm) _____

| | | | | | | | | | | | | | | | | | | |
|----|---|---|---|---|---|---|---|---|---|----|----|----|----|----|----|----|----|----|
| In | | 1 | | 2 | | 3 | | 4 | | 5 | | 6 | | 7 | | | | |
| Cm | 1 | 2 | 3 | 4 | 5 | 6 | 7 | 8 | 9 | 10 | 11 | 12 | 13 | 14 | 15 | 16 | 17 | 18 |
| In | | 1 | | 2 | | 3 | | 4 | | 5 | | 6 | | 7 | | | | |
| Cm | 1 | 2 | 3 | 4 | 5 | 6 | 7 | 8 | 9 | 10 | 11 | 12 | 13 | 14 | 15 | 16 | 17 | 18 |
| In | | 1 | | 2 | | 3 | | 4 | | 5 | | 6 | | 7 | | | | |
| Cm | 1 | 2 | 3 | 4 | 5 | 6 | 7 | 8 | 9 | 10 | 11 | 12 | 13 | 14 | 15 | 16 | 17 | 18 |
| In | | 1 | | 2 | | 3 | | 4 | | 5 | | 6 | | 7 | | | | |
| Cm | 1 | 2 | 3 | 4 | 5 | 6 | 7 | 8 | 9 | 10 | 11 | 12 | 13 | 14 | 15 | 16 | 17 | 18 |
| In | | 1 | | 2 | | 3 | | 4 | | 5 | | 6 | | 7 | | | | |
| Cm | 1 | 2 | 3 | 4 | 5 | 6 | 7 | 8 | 9 | 10 | 11 | 12 | 13 | 14 | 15 | 16 | 17 | 18 |
| In | | 1 | | 2 | | 3 | | 4 | | 5 | | 6 | | 7 | | | | |
| Cm | 1 | 2 | 3 | 4 | 5 | 6 | 7 | 8 | 9 | 10 | 11 | 12 | 13 | 14 | 15 | 16 | 17 | 18 |
| In | | 1 | | 2 | | 3 | | 4 | | 5 | | 6 | | 7 | | | | |
| Cm | 1 | 2 | 3 | 4 | 5 | 6 | 7 | 8 | 9 | 10 | 11 | 12 | 13 | 14 | 15 | 16 | 17 | 18 |
| In | | 1 | | 2 | | 3 | | 4 | | 5 | | 6 | | 7 | | | | |
| Cm | 1 | 2 | 3 | 4 | 5 | 6 | 7 | 8 | 9 | 10 | 11 | 12 | 13 | 14 | 15 | 16 | 17 | 18 |
| In | | 1 | | 2 | | 3 | | 4 | | 5 | | 6 | | 7 | | | | |
| Cm | 1 | 2 | 3 | 4 | 5 | 6 | 7 | 8 | 9 | 10 | 11 | 12 | 13 | 14 | 15 | 16 | 17 | 18 |
| In | | 1 | | 2 | | 3 | | 4 | | 5 | | 6 | | 7 | | | | |
| Cm | 1 | 2 | 3 | 4 | 5 | 6 | 7 | 8 | 9 | 10 | 11 | 12 | 13 | 14 | 15 | 16 | 17 | 18 |
| In | | 1 | | 2 | | 3 | | 4 | | 5 | | 6 | | 7 | | | | |
| Cm | 1 | 2 | 3 | 4 | 5 | 6 | 7 | 8 | 9 | 10 | 11 | 12 | 13 | 14 | 15 | 16 | 17 | 18 |




Measure the width and height of each block in inches and in centimeters.


Ex)




1)




2)



3)



4)



Answers

Ex. (w - in) 5

Ex. (h - in) 1 1/2

Ex. (w - cm) 12

Ex. (h - cm) 4

1. (w - in) 0 1/2

1. (h - in) 1 1/2

1. (w - cm) 1.3

1. (h - cm) 3.8

2. (w - in) 5

2. (h - in) 1 1/2

2. (w - cm) 12.7

2. (h - cm) 3.8

3. (w - in) 4 1/2

3. (h - in) 1

3. (w - cm) 11.4

3. (h - cm) 2.5

4. (w - in) 4

4. (h - in) 1

4. (w - cm) 10.2

4. (h - cm) 2.5