



Measure the width of each block in inches and in centimeters.

Ex)



Ex. (in) 5

Ex. (cm) 12

1)



1. (in) _____

1. (cm) _____

2)



2. (in) _____

2. (cm) _____


3)



3. (in) _____

3. (cm) _____


4)



4. (in) _____

4. (cm) _____

5)



5. (in) _____

5. (cm) _____


6)



6. (in) _____

6. (cm) _____

7)



7. (in) _____

7. (cm) _____

8)



8. (in) _____

8. (cm) _____

9)



9. (in) _____

9. (cm) _____

10)



10. (in) _____


10. (cm) _____

Answers

In		1		2		3		4		5		6		7				
Cm	1	2	3	4	5	6	7	8	9	10	11	12	13	14	15	16	17	18
In		1		2		3		4		5		6		7				
Cm	1	2	3	4	5	6	7	8	9	10	11	12	13	14	15	16	17	18
In		1		2		3		4		5		6		7				
Cm	1	2	3	4	5	6	7	8	9	10	11	12	13	14	15	16	17	18
In		1		2		3		4		5		6		7				
Cm	1	2	3	4	5	6	7	8	9	10	11	12	13	14	15	16	17	18
In		1		2		3		4		5		6		7				
Cm	1	2	3	4	5	6	7	8	9	10	11	12	13	14	15	16	17	18
In		1		2		3		4		5		6		7				
Cm	1	2	3	4	5	6	7	8	9	10	11	12	13	14	15	16	17	18
In		1		2		3		4		5		6		7				
Cm	1	2	3	4	5	6	7	8	9	10	11	12	13	14	15	16	17	18
In		1		2		3		4		5		6		7				
Cm	1	2	3	4	5	6	7	8	9	10	11	12	13	14	15	16	17	18
In		1		2		3		4		5		6		7				
Cm	1	2	3	4	5	6	7	8	9	10	11	12	13	14	15	16	17	18
In		1		2		3		4		5		6		7				
Cm	1	2	3	4	5	6	7	8	9	10	11	12	13	14	15	16	17	18



Measure the width of each block in inches and in centimeters.



Answers

Ex. (in) 5

Ex. (cm) 12

1. (in) 1

1. (cm) 2 - 3

2. (in) 5

2. (cm) 12 - 13

3. (in) 4

3. (cm) 10 - 11

4. (in) 1 1/2

4. (cm) 3 - 4

5. (in) 3

5. (cm) 7 - 8

6. (in) 3 1/2

6. (cm) 8 - 9

7. (in) 2

7. (cm) 5 - 6

8. (in) 4 1/2

8. (cm) 11 - 12

9. (in) 2 1/2

9. (cm) 6 - 7

10. (in) 5 1/2

10. (cm) 13 - 14



Measure the width of each block in inches and in centimeters.

Answers

Ex)



Ex. (in) 5

Ex. (cm) 12

1)



1. (in) _____

1. (cm) _____

2)



2. (in) _____

2. (cm) _____

3)



3. (in) _____

3. (cm) _____


4)



4. (in) _____

4. (cm) _____


5)



5. (in) _____

5. (cm) _____

6)



6. (in) _____

6. (cm) _____


7)



7. (in) _____

7. (cm) _____

8)



8. (in) _____

8. (cm) _____

9)



9. (in) _____

9. (cm) _____

10)



10. (in) _____

10. (cm) _____

In		1		2		3		4		5		6		7				
Cm	1	2	3	4	5	6	7	8	9	10	11	12	13	14	15	16	17	18
In		1		2		3		4		5		6		7				
Cm	1	2	3	4	5	6	7	8	9	10	11	12	13	14	15	16	17	18
In		1		2		3		4		5		6		7				
Cm	1	2	3	4	5	6	7	8	9	10	11	12	13	14	15	16	17	18
In		1		2		3		4		5		6		7				
Cm	1	2	3	4	5	6	7	8	9	10	11	12	13	14	15	16	17	18
In		1		2		3		4		5		6		7				
Cm	1	2	3	4	5	6	7	8	9	10	11	12	13	14	15	16	17	18
In		1		2		3		4		5		6		7				
Cm	1	2	3	4	5	6	7	8	9	10	11	12	13	14	15	16	17	18
In		1		2		3		4		5		6		7				
Cm	1	2	3	4	5	6	7	8	9	10	11	12	13	14	15	16	17	18
In		1		2		3		4		5		6		7				
Cm	1	2	3	4	5	6	7	8	9	10	11	12	13	14	15	16	17	18
In		1		2		3		4		5		6		7				
Cm	1	2	3	4	5	6	7	8	9	10	11	12	13	14	15	16	17	18
In		1		2		3		4		5		6		7				
Cm	1	2	3	4	5	6	7	8	9	10	11	12	13	14	15	16	17	18
In		1		2		3		4		5		6		7				
Cm	1	2	3	4	5	6	7	8	9	10	11	12	13	14	15	16	17	18



Measure the width of each block in inches and in centimeters.

Ex)



1)



2)




3)



4)



5)




6)



7)



8)



9)



10)



Answers

Ex. (in) 5

Ex. (cm) 12

1. (in) 2 1/2

1. (cm) 6 - 7

2. (in) 3 1/2

2. (cm) 8 - 9

3. (in) 2

3. (cm) 5 - 6

4. (in) 1 1/2

4. (cm) 3 - 4

5. (in) 4

5. (cm) 10 - 11

6. (in) 4 1/2

6. (cm) 11 - 12

7. (in) 5 1/2

7. (cm) 13 - 14

8. (in) 1

8. (cm) 2 - 3

9. (in) 0 1/2

9. (cm) 1 - 2

10. (in) 5

10. (cm) 12 - 13



Measure the width of each block in inches and in centimeters.

Ex)



Ex. (in) 5

Ex. (cm) 12

1)



1. (in) _____

1. (cm) _____

2)



2. (in) _____

2. (cm) _____

3)



3. (in) _____

3. (cm) _____

4)



4. (in) _____

4. (cm) _____

5)



5. (in) _____

5. (cm) _____

6)



6. (in) _____

6. (cm) _____

7)



7. (in) _____

7. (cm) _____

8)



8. (in) _____

8. (cm) _____

9)



9. (in) _____

9. (cm) _____

10)



10. (in) _____

10. (cm) _____

Answers

In		1		2		3		4		5		6		7				
Cm	1	2	3	4	5	6	7	8	9	10	11	12	13	14	15	16	17	18
In		1		2		3		4		5		6		7				
Cm	1	2	3	4	5	6	7	8	9	10	11	12	13	14	15	16	17	18
In		1		2		3		4		5		6		7				
Cm	1	2	3	4	5	6	7	8	9	10	11	12	13	14	15	16	17	18
In		1		2		3		4		5		6		7				
Cm	1	2	3	4	5	6	7	8	9	10	11	12	13	14	15	16	17	18
In		1		2		3		4		5		6		7				
Cm	1	2	3	4	5	6	7	8	9	10	11	12	13	14	15	16	17	18
In		1		2		3		4		5		6		7				
Cm	1	2	3	4	5	6	7	8	9	10	11	12	13	14	15	16	17	18
In		1		2		3		4		5		6		7				
Cm	1	2	3	4	5	6	7	8	9	10	11	12	13	14	15	16	17	18
In		1		2		3		4		5		6		7				
Cm	1	2	3	4	5	6	7	8	9	10	11	12	13	14	15	16	17	18
In		1		2		3		4		5		6		7				
Cm	1	2	3	4	5	6	7	8	9	10	11	12	13	14	15	16	17	18
In		1		2		3		4		5		6		7				
Cm	1	2	3	4	5	6	7	8	9	10	11	12	13	14	15	16	17	18
In		1		2		3		4		5		6		7				
Cm	1	2	3	4	5	6	7	8	9	10	11	12	13	14	15	16	17	18



Measure the width of each block in inches and in centimeters.



Ex. (in) 5

Ex. (cm) 12



1. (in) 2 1/2

1. (cm) 6 - 7



2. (in) 3

2. (cm) 7 - 8



3. (in) 5 1/2

3. (cm) 13 - 14



4. (in) 4

4. (cm) 10 - 11



5. (in) 2

5. (cm) 5 - 6




6. (in) 5

6. (cm) 12 - 13



7. (in) 3 1/2

7. (cm) 8 - 9



8. (in) 0 1/2

8. (cm) 1 - 2



9. (in) 1 1/2

9. (cm) 3 - 4



10. (in) 4 1/2

10. (cm) 11 - 12

Answers



Measure the width of each block in inches and in centimeters.

Ex)



Ex. (in) 5

Ex. (cm) 12

1)



1. (in) _____

1. (cm) _____

2)



2. (in) _____

2. (cm) _____

3)



3. (in) _____

3. (cm) _____

4)



4. (in) _____

4. (cm) _____

5)



5. (in) _____

5. (cm) _____

6)



6. (in) _____

6. (cm) _____

7)



7. (in) _____

7. (cm) _____

8)



8. (in) _____

8. (cm) _____

9)



9. (in) _____

9. (cm) _____

10)



10. (in) _____

10. (cm) _____

Answers

In		1		2		3		4		5		6		7				
Cm	1	2	3	4	5	6	7	8	9	10	11	12	13	14	15	16	17	18
In		1		2		3		4		5		6		7				
Cm	1	2	3	4	5	6	7	8	9	10	11	12	13	14	15	16	17	18
In		1		2		3		4		5		6		7				
Cm	1	2	3	4	5	6	7	8	9	10	11	12	13	14	15	16	17	18
In		1		2		3		4		5		6		7				
Cm	1	2	3	4	5	6	7	8	9	10	11	12	13	14	15	16	17	18
In		1		2		3		4		5		6		7				
Cm	1	2	3	4	5	6	7	8	9	10	11	12	13	14	15	16	17	18
In		1		2		3		4		5		6		7				
Cm	1	2	3	4	5	6	7	8	9	10	11	12	13	14	15	16	17	18
In		1		2		3		4		5		6		7				
Cm	1	2	3	4	5	6	7	8	9	10	11	12	13	14	15	16	17	18
In		1		2		3		4		5		6		7				
Cm	1	2	3	4	5	6	7	8	9	10	11	12	13	14	15	16	17	18
In		1		2		3		4		5		6		7				
Cm	1	2	3	4	5	6	7	8	9	10	11	12	13	14	15	16	17	18
In		1		2		3		4		5		6		7				
Cm	1	2	3	4	5	6	7	8	9	10	11	12	13	14	15	16	17	18
In		1		2		3		4		5		6		7				
Cm	1	2	3	4	5	6	7	8	9	10	11	12	13	14	15	16	17	18



Measure the width of each block in inches and in centimeters.

Ex)



1)



2)



3)



4)



5)



6)



7)



8)



9)



10)



Answers

Ex. (in) 5

Ex. (cm) 12

1. (in) 4

1. (cm) 10 - 11

2. (in) 5 1/2

2. (cm) 13 - 14

3. (in) 1

3. (cm) 2 - 3

4. (in) 5

4. (cm) 12 - 13

5. (in) 4 1/2

5. (cm) 11 - 12

6. (in) 3

6. (cm) 7 - 8

7. (in) 1 1/2

7. (cm) 3 - 4

8. (in) 3 1/2

8. (cm) 8 - 9

9. (in) 2 1/2

9. (cm) 6 - 7

10. (in) 2

10. (cm) 5 - 6



Measure the width of each block in inches and in centimeters.

Ex)



Ex. (in) 5

Ex. (cm) 12


1)



1. (in) _____

1. (cm) _____

2)



2. (in) _____

2. (cm) _____


3)



3. (in) _____

3. (cm) _____

4)



4. (in) _____

4. (cm) _____


5)



5. (in) _____

5. (cm) _____

6)



6. (in) _____

6. (cm) _____

7)



7. (in) _____

7. (cm) _____

8)



8. (in) _____

8. (cm) _____

9)



9. (in) _____

9. (cm) _____

10)



10. (in) _____

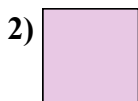
10. (cm) _____

Answers

In		1		2		3		4		5		6		7				
Cm	1	2	3	4	5	6	7	8	9	10	11	12	13	14	15	16	17	18
In		1		2		3		4		5		6		7				
Cm	1	2	3	4	5	6	7	8	9	10	11	12	13	14	15	16	17	18
In		1		2		3		4		5		6		7				
Cm	1	2	3	4	5	6	7	8	9	10	11	12	13	14	15	16	17	18
In		1		2		3		4		5		6		7				
Cm	1	2	3	4	5	6	7	8	9	10	11	12	13	14	15	16	17	18
In		1		2		3		4		5		6		7				
Cm	1	2	3	4	5	6	7	8	9	10	11	12	13	14	15	16	17	18
In		1		2		3		4		5		6		7				
Cm	1	2	3	4	5	6	7	8	9	10	11	12	13	14	15	16	17	18
In		1		2		3		4		5		6		7				
Cm	1	2	3	4	5	6	7	8	9	10	11	12	13	14	15	16	17	18
In		1		2		3		4		5		6		7				
Cm	1	2	3	4	5	6	7	8	9	10	11	12	13	14	15	16	17	18
In		1		2		3		4		5		6		7				
Cm	1	2	3	4	5	6	7	8	9	10	11	12	13	14	15	16	17	18
In		1		2		3		4		5		6		7				
Cm	1	2	3	4	5	6	7	8	9	10	11	12	13	14	15	16	17	18
In		1		2		3		4		5		6		7				
Cm	1	2	3	4	5	6	7	8	9	10	11	12	13	14	15	16	17	18



Measure the width of each block in inches and in centimeters.



Answers

Ex. (in) 5

Ex. (cm) 12

1. (in) 5 1/2

1. (cm) 13 - 14

2. (in) 0 1/2

2. (cm) 1 - 2

3. (in) 2 1/2

3. (cm) 6 - 7

4. (in) 1 1/2

4. (cm) 3 - 4

5. (in) 5

5. (cm) 12 - 13

6. (in) 3 1/2

6. (cm) 8 - 9

7. (in) 2

7. (cm) 5 - 6

8. (in) 4

8. (cm) 10 - 11

9. (in) 1

9. (cm) 2 - 3

10. (in) 3

10. (cm) 7 - 8

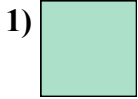


Measure the width of each block in inches and in centimeters.



Answers
Ex. (in) 5

Ex. (cm) 12



1. (in) _____

1. (cm) _____



2. (in) _____

2. (cm) _____



3. (in) _____

3. (cm) _____



4. (in) _____

4. (cm) _____



5. (in) _____

5. (cm) _____



6. (in) _____

6. (cm) _____



7. (in) _____

7. (cm) _____



8. (in) _____

8. (cm) _____



9. (in) _____

9. (cm) _____





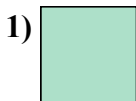
10. (in) _____

10. (cm) _____

In		1		2		3		4		5		6		7				
Cm	1	2	3	4	5	6	7	8	9	10	11	12	13	14	15	16	17	18
In		1		2		3		4		5		6		7				
Cm	1	2	3	4	5	6	7	8	9	10	11	12	13	14	15	16	17	18
In		1		2		3		4		5		6		7				
Cm	1	2	3	4	5	6	7	8	9	10	11	12	13	14	15	16	17	18
In		1		2		3		4		5		6		7				
Cm	1	2	3	4	5	6	7	8	9	10	11	12	13	14	15	16	17	18
In		1		2		3		4		5		6		7				
Cm	1	2	3	4	5	6	7	8	9	10	11	12	13	14	15	16	17	18
In		1		2		3		4		5		6		7				
Cm	1	2	3	4	5	6	7	8	9	10	11	12	13	14	15	16	17	18
In		1		2		3		4		5		6		7				
Cm	1	2	3	4	5	6	7	8	9	10	11	12	13	14	15	16	17	18
In		1		2		3		4		5		6		7				
Cm	1	2	3	4	5	6	7	8	9	10	11	12	13	14	15	16	17	18
In		1		2		3		4		5		6		7				
Cm	1	2	3	4	5	6	7	8	9	10	11	12	13	14	15	16	17	18
In		1		2		3		4		5		6		7				
Cm	1	2	3	4	5	6	7	8	9	10	11	12	13	14	15	16	17	18
In		1		2		3		4		5		6		7				
Cm	1	2	3	4	5	6	7	8	9	10	11	12	13	14	15	16	17	18



Measure the width of each block in inches and in centimeters.



Answers

Ex. (in) 5

Ex. (cm) 12

1. (in) 0 1/2

1. (cm) 1 - 2

2. (in) 5

2. (cm) 12 - 13

3. (in) 2 1/2

3. (cm) 6 - 7

4. (in) 3

4. (cm) 7 - 8

5. (in) 2

5. (cm) 5 - 6

6. (in) 5 1/2

6. (cm) 13 - 14

7. (in) 4

7. (cm) 10 - 11

8. (in) 4 1/2

8. (cm) 11 - 12

9. (in) 1

9. (cm) 2 - 3


10. (in) 3 1/2

10. (cm) 8 - 9



Measure the width of each block in inches and in centimeters.

Ex)



Ex. (in) 5

Ex. (cm) 12


1)



1. (in) _____

1. (cm) _____

2)



2. (in) _____

2. (cm) _____

3)



3. (in) _____

3. (cm) _____


4)



4. (in) _____

4. (cm) _____

5)



5. (in) _____

5. (cm) _____

6)



6. (in) _____

6. (cm) _____

7)



7. (in) _____

7. (cm) _____

8)



8. (in) _____

8. (cm) _____

9)



9. (in) _____

9. (cm) _____

10)



10. (in) _____

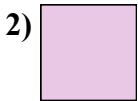
10. (cm) _____

Answers

In		1		2		3		4		5		6		7				
Cm	1	2	3	4	5	6	7	8	9	10	11	12	13	14	15	16	17	18
In		1		2		3		4		5		6		7				
Cm	1	2	3	4	5	6	7	8	9	10	11	12	13	14	15	16	17	18
In		1		2		3		4		5		6		7				
Cm	1	2	3	4	5	6	7	8	9	10	11	12	13	14	15	16	17	18
In		1		2		3		4		5		6		7				
Cm	1	2	3	4	5	6	7	8	9	10	11	12	13	14	15	16	17	18
In		1		2		3		4		5		6		7				
Cm	1	2	3	4	5	6	7	8	9	10	11	12	13	14	15	16	17	18
In		1		2		3		4		5		6		7				
Cm	1	2	3	4	5	6	7	8	9	10	11	12	13	14	15	16	17	18
In		1		2		3		4		5		6		7				
Cm	1	2	3	4	5	6	7	8	9	10	11	12	13	14	15	16	17	18
In		1		2		3		4		5		6		7				
Cm	1	2	3	4	5	6	7	8	9	10	11	12	13	14	15	16	17	18
In		1		2		3		4		5		6		7				
Cm	1	2	3	4	5	6	7	8	9	10	11	12	13	14	15	16	17	18
In		1		2		3		4		5		6		7				
Cm	1	2	3	4	5	6	7	8	9	10	11	12	13	14	15	16	17	18
In		1		2		3		4		5		6		7				
Cm	1	2	3	4	5	6	7	8	9	10	11	12	13	14	15	16	17	18



Measure the width of each block in inches and in centimeters.



Answers

Ex. (in) 5

Ex. (cm) 12

1. (in) 3

1. (cm) 7 - 8

2. (in) 0 1/2

2. (cm) 1 - 2

3. (in) 4

3. (cm) 10 - 11

4. (in) 1

4. (cm) 2 - 3

5. (in) 5

5. (cm) 12 - 13

6. (in) 5 1/2

6. (cm) 13 - 14

7. (in) 3 1/2

7. (cm) 8 - 9

8. (in) 1 1/2

8. (cm) 3 - 4

9. (in) 2 1/2

9. (cm) 6 - 7

10. (in) 2

10. (cm) 5 - 6



Measure the width of each block in inches and in centimeters.

Ex)



Ex. (in) 5

Ex. (cm) 12

1)



1. (in) _____

1. (cm) _____

2)



2. (in) _____

2. (cm) _____

3)



3. (in) _____

3. (cm) _____

4)



4. (in) _____

4. (cm) _____

5)



5. (in) _____

5. (cm) _____

6)



6. (in) _____

6. (cm) _____

7)



7. (in) _____

7. (cm) _____

8)



8. (in) _____

8. (cm) _____

9)



9. (in) _____

9. (cm) _____

10)



10. (in) _____

10. (cm) _____

Answers

In		1		2		3		4		5		6		7				
Cm	1	2	3	4	5	6	7	8	9	10	11	12	13	14	15	16	17	18
In		1		2		3		4		5		6		7				
Cm	1	2	3	4	5	6	7	8	9	10	11	12	13	14	15	16	17	18
In		1		2		3		4		5		6		7				
Cm	1	2	3	4	5	6	7	8	9	10	11	12	13	14	15	16	17	18
In		1		2		3		4		5		6		7				
Cm	1	2	3	4	5	6	7	8	9	10	11	12	13	14	15	16	17	18
In		1		2		3		4		5		6		7				
Cm	1	2	3	4	5	6	7	8	9	10	11	12	13	14	15	16	17	18
In		1		2		3		4		5		6		7				
Cm	1	2	3	4	5	6	7	8	9	10	11	12	13	14	15	16	17	18
In		1		2		3		4		5		6		7				
Cm	1	2	3	4	5	6	7	8	9	10	11	12	13	14	15	16	17	18
In		1		2		3		4		5		6		7				
Cm	1	2	3	4	5	6	7	8	9	10	11	12	13	14	15	16	17	18
In		1		2		3		4		5		6		7				
Cm	1	2	3	4	5	6	7	8	9	10	11	12	13	14	15	16	17	18
In		1		2		3		4		5		6		7				
Cm	1	2	3	4	5	6	7	8	9	10	11	12	13	14	15	16	17	18
In		1		2		3		4		5		6		7				
Cm	1	2	3	4	5	6	7	8	9	10	11	12	13	14	15	16	17	18



Measure the width of each block in inches and in centimeters.

Ex)



1)



2)



3)



4)



5)




6)




7)



8)



9)



10)



Answers

Ex. (in) 5

Ex. (cm) 12

1. (in) 2 1/2

1. (cm) 6 - 7

2. (in) 5 1/2

2. (cm) 13 - 14

3. (in) 5

3. (cm) 12 - 13

4. (in) 4

4. (cm) 10 - 11

5. (in) 2

5. (cm) 5 - 6

6. (in) 3 1/2

6. (cm) 8 - 9

7. (in) 1

7. (cm) 2 - 3

8. (in) 4 1/2

8. (cm) 11 - 12

9. (in) 1 1/2

9. (cm) 3 - 4

10. (in) 0 1/2

10. (cm) 1 - 2



Measure the width of each block in inches and in centimeters.

Answers



Ex. (in) 5

Ex. (cm) 12



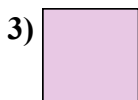
1. (in) _____

1. (cm) _____



2. (in) _____

2. (cm) _____



3. (in) _____

3. (cm) _____



4. (in) _____

4. (cm) _____




5. (in) _____

5. (cm) _____



6. (in) _____

6. (cm) _____



7. (in) _____

7. (cm) _____



8. (in) _____

8. (cm) _____



9. (in) _____

9. (cm) _____





10. (in) _____

10. (cm) _____

In		1		2		3		4		5		6		7				
Cm	1	2	3	4	5	6	7	8	9	10	11	12	13	14	15	16	17	18
In		1		2		3		4		5		6		7				
Cm	1	2	3	4	5	6	7	8	9	10	11	12	13	14	15	16	17	18
In		1		2		3		4		5		6		7				
Cm	1	2	3	4	5	6	7	8	9	10	11	12	13	14	15	16	17	18
In		1		2		3		4		5		6		7				
Cm	1	2	3	4	5	6	7	8	9	10	11	12	13	14	15	16	17	18
In		1		2		3		4		5		6		7				
Cm	1	2	3	4	5	6	7	8	9	10	11	12	13	14	15	16	17	18
In		1		2		3		4		5		6		7				
Cm	1	2	3	4	5	6	7	8	9	10	11	12	13	14	15	16	17	18
In		1		2		3		4		5		6		7				
Cm	1	2	3	4	5	6	7	8	9	10	11	12	13	14	15	16	17	18
In		1		2		3		4		5		6		7				
Cm	1	2	3	4	5	6	7	8	9	10	11	12	13	14	15	16	17	18
In		1		2		3		4		5		6		7				
Cm	1	2	3	4	5	6	7	8	9	10	11	12	13	14	15	16	17	18
In		1		2		3		4		5		6		7				
Cm	1	2	3	4	5	6	7	8	9	10	11	12	13	14	15	16	17	18
In		1		2		3		4		5		6		7				
Cm	1	2	3	4	5	6	7	8	9	10	11	12	13	14	15	16	17	18



Measure the width of each block in inches and in centimeters.



Answers

Ex. (in) 5

Ex. (cm) 12

1. (in) 2

1. (cm) 5 - 6

2. (in) 3 1/2

2. (cm) 8 - 9

3. (in) 0 1/2

3. (cm) 1 - 2

4. (in) 5

4. (cm) 12 - 13

5. (in) 2 1/2

5. (cm) 6 - 7

6. (in) 5 1/2

6. (cm) 13 - 14

7. (in) 4 1/2

7. (cm) 11 - 12

8. (in) 1

8. (cm) 2 - 3

9. (in) 4

9. (cm) 10 - 11

10. (in) 3

10. (cm) 7 - 8



Measure the width of each block in inches and in centimeters.

Ex)



Ex. (in) 5

Ex. (cm) 12

1)



1. (in) _____

1. (cm) _____

2)



2. (in) _____

2. (cm) _____

3)



3. (in) _____

3. (cm) _____


4)



4. (in) _____

4. (cm) _____


5)



5. (in) _____

5. (cm) _____


6)



6. (in) _____

6. (cm) _____


7)



7. (in) _____

7. (cm) _____

8)



8. (in) _____

8. (cm) _____

9)



9. (in) _____

9. (cm) _____

10)



10. (in) _____

10. (cm) _____

Answers

In		1		2		3		4		5		6		7				
Cm	1	2	3	4	5	6	7	8	9	10	11	12	13	14	15	16	17	18
In		1		2		3		4		5		6		7				
Cm	1	2	3	4	5	6	7	8	9	10	11	12	13	14	15	16	17	18
In		1		2		3		4		5		6		7				
Cm	1	2	3	4	5	6	7	8	9	10	11	12	13	14	15	16	17	18
In		1		2		3		4		5		6		7				
Cm	1	2	3	4	5	6	7	8	9	10	11	12	13	14	15	16	17	18
In		1		2		3		4		5		6		7				
Cm	1	2	3	4	5	6	7	8	9	10	11	12	13	14	15	16	17	18
In		1		2		3		4		5		6		7				
Cm	1	2	3	4	5	6	7	8	9	10	11	12	13	14	15	16	17	18
In		1		2		3		4		5		6		7				
Cm	1	2	3	4	5	6	7	8	9	10	11	12	13	14	15	16	17	18
In		1		2		3		4		5		6		7				
Cm	1	2	3	4	5	6	7	8	9	10	11	12	13	14	15	16	17	18
In		1		2		3		4		5		6		7				
Cm	1	2	3	4	5	6	7	8	9	10	11	12	13	14	15	16	17	18
In		1		2		3		4		5		6		7				
Cm	1	2	3	4	5	6	7	8	9	10	11	12	13	14	15	16	17	18
In		1		2		3		4		5		6		7				
Cm	1	2	3	4	5	6	7	8	9	10	11	12	13	14	15	16	17	18



Measure the width of each block in inches and in centimeters.


Ex)



1)



2)




3)



4)




5)



6)



7)



8)



9)



10)



Answers

Ex. (in) 5

Ex. (cm) 12

1. (in) 4

1. (cm) 10 - 11

2. (in) 2

2. (cm) 5 - 6

3. (in) 3 1/2

3. (cm) 8 - 9

4. (in) 5

4. (cm) 12 - 13

5. (in) 0 1/2

5. (cm) 1 - 2

6. (in) 1

6. (cm) 2 - 3

7. (in) 1 1/2

7. (cm) 3 - 4

8. (in) 3

8. (cm) 7 - 8

9. (in) 2 1/2

9. (cm) 6 - 7

10. (in) 5 1/2

10. (cm) 13 - 14