



Measure the width of each block in inches and in centimeters.

Ex)



Ex. (in) 5

Ex. (cm) 12


1)



1. (in) _____

1. (cm) _____

2)



2. (in) _____

2. (cm) _____

3)



3. (in) _____

3. (cm) _____


4)



4. (in) _____

4. (cm) _____


5)



5. (in) _____

5. (cm) _____

6)



6. (in) _____

6. (cm) _____

7)



7. (in) _____

7. (cm) _____

8)



8. (in) _____

8. (cm) _____

9)



9. (in) _____

9. (cm) _____

10)



10. (in) _____

10. (cm) _____

Answers

In		1		2		3		4		5		6		7				
Cm	1	2	3	4	5	6	7	8	9	10	11	12	13	14	15	16	17	18
In		1		2		3		4		5		6		7				
Cm	1	2	3	4	5	6	7	8	9	10	11	12	13	14	15	16	17	18
In		1		2		3		4		5		6		7				
Cm	1	2	3	4	5	6	7	8	9	10	11	12	13	14	15	16	17	18
In		1		2		3		4		5		6		7				
Cm	1	2	3	4	5	6	7	8	9	10	11	12	13	14	15	16	17	18
In		1		2		3		4		5		6		7				
Cm	1	2	3	4	5	6	7	8	9	10	11	12	13	14	15	16	17	18
In		1		2		3		4		5		6		7				
Cm	1	2	3	4	5	6	7	8	9	10	11	12	13	14	15	16	17	18
In		1		2		3		4		5		6		7				
Cm	1	2	3	4	5	6	7	8	9	10	11	12	13	14	15	16	17	18
In		1		2		3		4		5		6		7				
Cm	1	2	3	4	5	6	7	8	9	10	11	12	13	14	15	16	17	18
In		1		2		3		4		5		6		7				
Cm	1	2	3	4	5	6	7	8	9	10	11	12	13	14	15	16	17	18
In		1		2		3		4		5		6		7				
Cm	1	2	3	4	5	6	7	8	9	10	11	12	13	14	15	16	17	18
In		1		2		3		4		5		6		7				
Cm	1	2	3	4	5	6	7	8	9	10	11	12	13	14	15	16	17	18



Measure the width of each block in inches and in centimeters.


Ex)



1)



2)




3)




4)



5)



6)



7)



8)



9)



10)



Answers

Ex. (in) 5

Ex. (cm) 12

1. (in) 3

1. (cm) 7 - 8

2. (in) 0 1/2

2. (cm) 1 - 2

3. (in) 4

3. (cm) 10 - 11

4. (in) 1

4. (cm) 2 - 3

5. (in) 5

5. (cm) 12 - 13

6. (in) 5 1/2

6. (cm) 13 - 14

7. (in) 3 1/2

7. (cm) 8 - 9

8. (in) 1 1/2

8. (cm) 3 - 4

9. (in) 2 1/2

9. (cm) 6 - 7

10. (in) 2

10. (cm) 5 - 6