



Measure the width of each block in inches and in centimeters.

**Answers**

Ex)



Ex. (in) 5

Ex. (cm) 12

1)



1. (in) \_\_\_\_\_

1. (cm) \_\_\_\_\_

2)



2. (in) \_\_\_\_\_

2. (cm) \_\_\_\_\_

3)



3. (in) \_\_\_\_\_

3. (cm) \_\_\_\_\_

4)



4. (in) \_\_\_\_\_

4. (cm) \_\_\_\_\_

5)



5. (in) \_\_\_\_\_

5. (cm) \_\_\_\_\_

6)



6. (in) \_\_\_\_\_

6. (cm) \_\_\_\_\_


7)



7. (in) \_\_\_\_\_

7. (cm) \_\_\_\_\_

8)



8. (in) \_\_\_\_\_

8. (cm) \_\_\_\_\_

9)



9. (in) \_\_\_\_\_

9. (cm) \_\_\_\_\_

10)



10. (in) \_\_\_\_\_

10. (cm) \_\_\_\_\_

In		1		2		3		4		5		6		7				
Cm	1	2	3	4	5	6	7	8	9	10	11	12	13	14	15	16	17	18
In		1		2		3		4		5		6		7				
Cm	1	2	3	4	5	6	7	8	9	10	11	12	13	14	15	16	17	18
In		1		2		3		4		5		6		7				
Cm	1	2	3	4	5	6	7	8	9	10	11	12	13	14	15	16	17	18
In		1		2		3		4		5		6		7				
Cm	1	2	3	4	5	6	7	8	9	10	11	12	13	14	15	16	17	18
In		1		2		3		4		5		6		7				
Cm	1	2	3	4	5	6	7	8	9	10	11	12	13	14	15	16	17	18
In		1		2		3		4		5		6		7				
Cm	1	2	3	4	5	6	7	8	9	10	11	12	13	14	15	16	17	18
In		1		2		3		4		5		6		7				
Cm	1	2	3	4	5	6	7	8	9	10	11	12	13	14	15	16	17	18
In		1		2		3		4		5		6		7				
Cm	1	2	3	4	5	6	7	8	9	10	11	12	13	14	15	16	17	18
In		1		2		3		4		5		6		7				
Cm	1	2	3	4	5	6	7	8	9	10	11	12	13	14	15	16	17	18
In		1		2		3		4		5		6		7				
Cm	1	2	3	4	5	6	7	8	9	10	11	12	13	14	15	16	17	18
In		1		2		3		4		5		6		7				
Cm	1	2	3	4	5	6	7	8	9	10	11	12	13	14	15	16	17	18



Measure the width of each block in inches and in centimeters.

Ex)




1)



2)



3)



4)



5)




6)




7)



8)



9)



10)



**Answers**

Ex. (in) 5

Ex. (cm) 12

1. (in) 2 1/2

1. (cm) 6 - 7

2. (in) 3 1/2

2. (cm) 8 - 9

3. (in) 2

3. (cm) 5 - 6

4. (in) 1 1/2

4. (cm) 3 - 4

5. (in) 4

5. (cm) 10 - 11

6. (in) 4 1/2

6. (cm) 11 - 12

7. (in) 5 1/2

7. (cm) 13 - 14

8. (in) 1

8. (cm) 2 - 3

9. (in) 0 1/2

9. (cm) 1 - 2

10. (in) 5

10. (cm) 12 - 13