

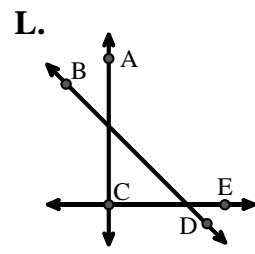
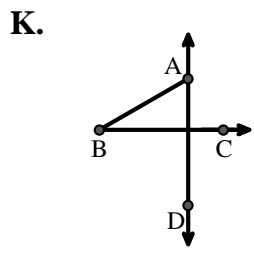
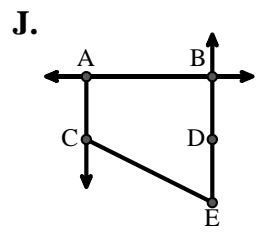
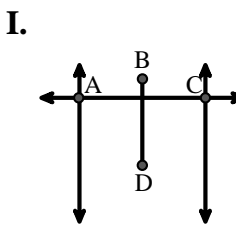
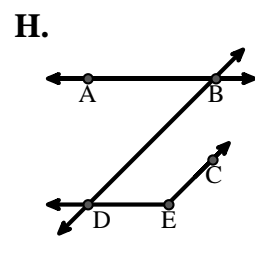
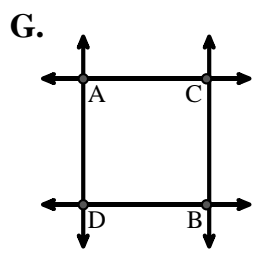
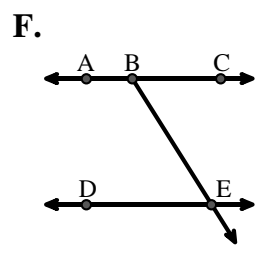
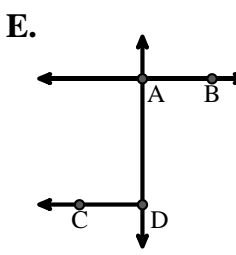
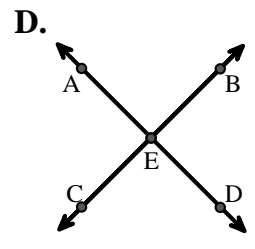
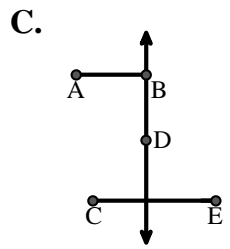
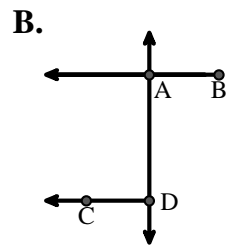
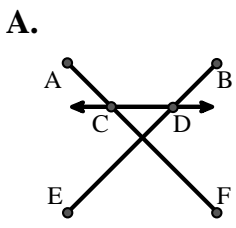


Match the description on the top with the visual image on the bottom.

Answers

- 1)  $\overleftrightarrow{BD}$  intersecting  $\angle ACE$
- 2)  $\overleftrightarrow{BD}$  intersecting  $\overline{CE}$
- 3)  $\overline{BE}$  intersecting  $\overleftrightarrow{CD}$
- 4) Acute  $\angle ABC$  intersecting  $\overleftrightarrow{AD}$
- 5) Acute  $\angle BED$
- 6)  $\overleftrightarrow{AD}$  intersecting  $\overleftrightarrow{BC}$  at point E
- 7)  $\overline{BA}$  intersecting  $\overleftrightarrow{AD}$
- 8)  $\overleftrightarrow{AB}$  intersecting  $\overleftrightarrow{AD}$
- 9)  $\overleftrightarrow{AC}$  intersected by  $\overline{BD}$
- 10) Acute  $\angle BDE$
- 11)  $\overleftrightarrow{AC}$  parallel to  $\overleftrightarrow{EB}$
- 12)  $\overleftrightarrow{AC}$  perpendicular to  $\overleftrightarrow{AD}$

1. \_\_\_\_\_
2. \_\_\_\_\_
3. \_\_\_\_\_
4. \_\_\_\_\_
5. \_\_\_\_\_
6. \_\_\_\_\_
7. \_\_\_\_\_
8. \_\_\_\_\_
9. \_\_\_\_\_
10. \_\_\_\_\_
11. \_\_\_\_\_
12. \_\_\_\_\_





Match the description on the top with the visual image on the bottom.

- 1)  $\overleftrightarrow{BD}$  intersecting  $\angle ACE$
- 2)  $\overleftrightarrow{BD}$  intersecting  $\overline{CE}$
- 3)  $\overline{BE}$  intersecting  $\overleftrightarrow{CD}$
- 4) Acute  $\angle ABC$  intersecting  $\overleftrightarrow{AD}$
- 5) Acute  $\angle BED$
- 6)  $\overleftrightarrow{AD}$  intersecting  $\overleftrightarrow{BC}$  at point E
- 7)  $\overline{BA}$  intersecting  $\overleftrightarrow{AD}$
- 8)  $\overleftrightarrow{AB}$  intersecting  $\overleftrightarrow{AD}$
- 9)  $\overleftrightarrow{AC}$  intersected by  $\overline{BD}$
- 10) Acute  $\angle BDE$
- 11)  $\overleftrightarrow{AC}$  parallel to  $\overleftrightarrow{EB}$
- 12)  $\overleftrightarrow{AC}$  perpendicular to  $\overleftrightarrow{AD}$

**Answers**

1.   **L**
2.   **C**
3.   **A**
4.   **K**
5.   **F**
6.   **D**
7.   **B**
8.   **E**
9.   **I**
10.   **H**
11.   **J**
12.   **G**

