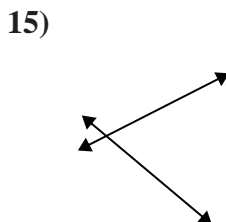
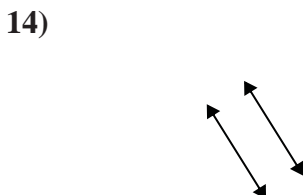
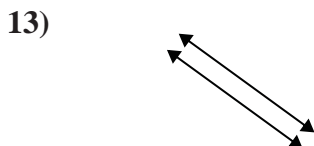
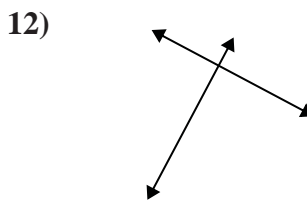
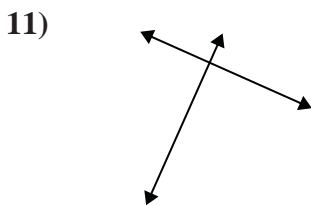
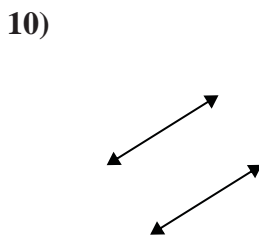
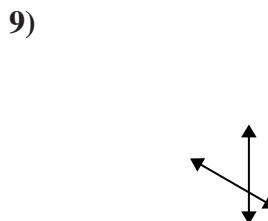
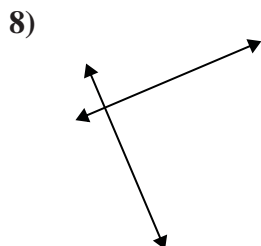
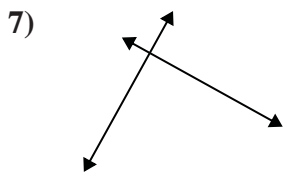
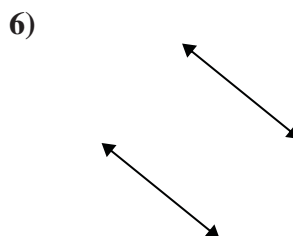
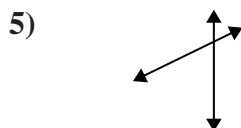
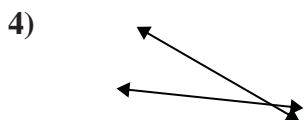
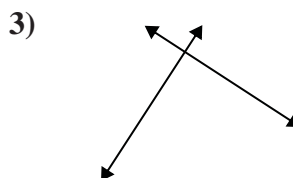
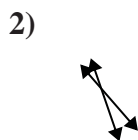
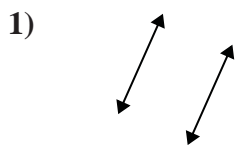




Use 'parallel', 'perp'(perpendicular) or 'inter'(intersecting) to describe the lines.

Answers

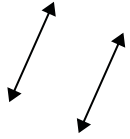


1. _____
2. _____
3. _____
4. _____
5. _____
6. _____
7. _____
8. _____
9. _____
10. _____
11. _____
12. _____
13. _____
14. _____
15. _____



Use 'parallel', 'perp'(perpendicular) or 'inter'(intersecting) to describe the lines.

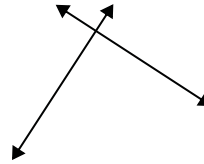
1)



2)



3)



1.

parallel

2.

inter

3.

perp & inter

4.

inter

5.

inter

6.

parallel

7.

perp & inter

8.

perp & inter

9.

inter

10.

parallel

11.

perp & inter

12.

perp & inter

13.

parallel

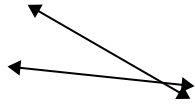
14.

parallel

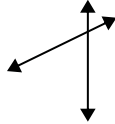
15.

inter

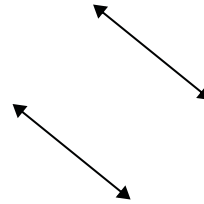
4)



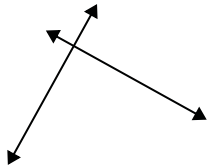
5)



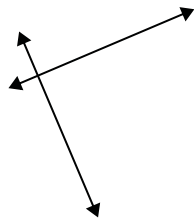
6)



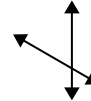
7)



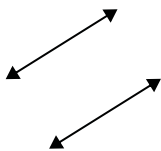
8)



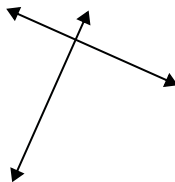
9)



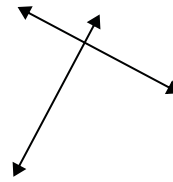
10)



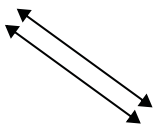
11)



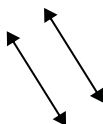
12)



13)



14)



15)

