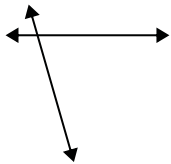




Use 'parallel', 'perp'(perpendicular) or 'inter'(intersecting) to describe the lines.

Answers

1)



2)



3)

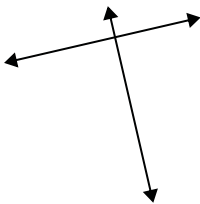


1. _____

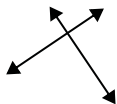
2. _____

3. _____

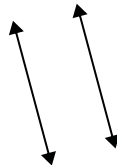
4)



5)



6)

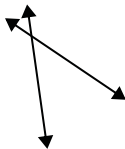


4. _____

5. _____

6. _____

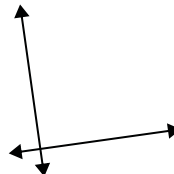
7)



8)



9)



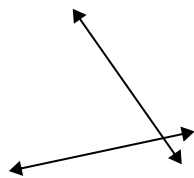
7. _____

8. _____

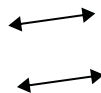
9. _____

10. _____

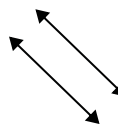
10)



11)



12)



11. _____

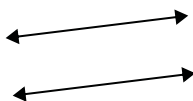
12. _____

13. _____

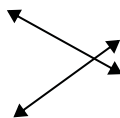
14. _____

15. _____

13)



14)



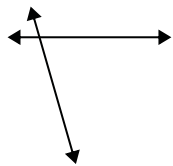
15)





Use 'parallel', 'perp'(perpendicular) or 'inter'(intersecting) to describe the lines.

1)



2)



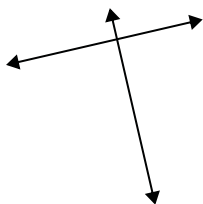
3)



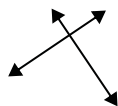
1.

inter

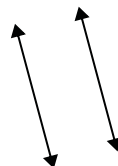
4)



5)



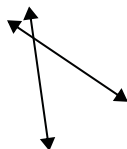
6)



2.

perp & inter

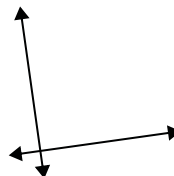
7)



8)



9)



3.

perp & inter

4.

perp & inter

5.

perp & inter

6.

parallel

7.

inter

8.

parallel

9.

perp & inter

10.

inter

11.

parallel

12.

parallel

13.

parallel

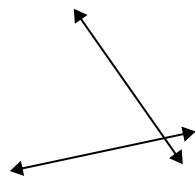
14.

inter

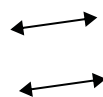
15.

inter

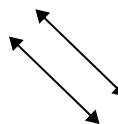
10)



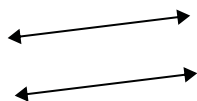
11)



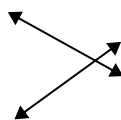
12)



13)



14)



15)

