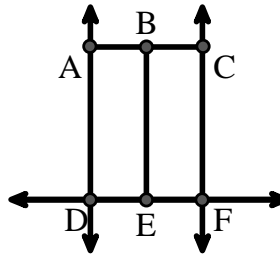




Answers

Use the graphic to the right to find the following (if possible):

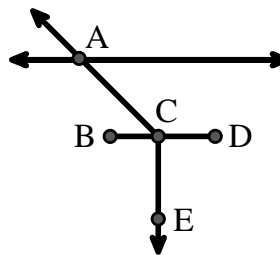
- 1) A Line _____
- 2) A Ray _____
- 3) A Segment _____
- 4) Parallel Lines _____
- 5) Perpendicular Lines _____
- 6) Intersecting Lines _____



1. _____
2. _____
3. _____
4. _____
5. _____
6. _____
7. _____
8. _____
9. _____
10. _____
11. _____
12. _____
13. _____
14. _____
15. _____


Use the graphic to the right to find the following (if possible):

- 7) Acute Angle _____
- 8) Obtuse Angle _____
- 9) Right Angle _____
- 10) Straight Angle _____



Use the dot matrix to draw the following:

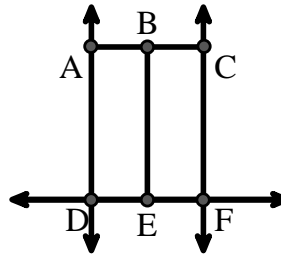
- 11) Line \overleftrightarrow{AC}
- 12) Segment \overline{AB}
- 13) Angle $\angle ABD$
- 14) Line \overleftrightarrow{EF} parallel to line \overleftrightarrow{AC}
- 15) Segment \overline{EG} perpendicular to \overleftrightarrow{EF}





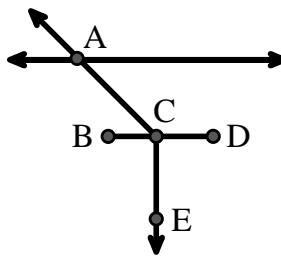
Use the graphic to the right to find the following (if possible):

- 1) A Line $\overleftrightarrow{AD}, \overleftrightarrow{CF}, \overleftrightarrow{DF}$
- 2) A Ray $\overrightarrow{AD}, \overrightarrow{CF}, \overrightarrow{DA}, \overrightarrow{ED}, \overrightarrow{EF}, \overrightarrow{FC}, \overrightarrow{DF}, \overrightarrow{FD}$
- 3) A Segment $\overline{AB}, \overline{BC}, \overline{AD}, \overline{DE}, \overline{EF}, \overline{CF}$
- 4) Parallel Lines $(\overleftrightarrow{AD} \& \overleftrightarrow{CF})$
- 5) Perpendicular Lines $(\overleftrightarrow{AD} \& \overleftrightarrow{DF}), (\overleftrightarrow{CF} \& \overleftrightarrow{DF})$
- 6) Intersecting Lines $(\overleftrightarrow{AD} \& \overleftrightarrow{DF}), (\overleftrightarrow{CF} \& \overleftrightarrow{DF})$



Use the graphic to the right to find the following (if possible):

- 7) Acute Angle $\angle ACB$
- 8) Obtuse Angle $\angle ACD$
- 9) Right Angle $\angle BCE, \angle DCE$
- 10) Straight Angle $\angle BCD$



Answers

1. \overleftrightarrow{AD}
2. \overrightarrow{AD}
3. \overline{AB}
4. $(\overleftrightarrow{AD} \& \overleftrightarrow{CF})$
5. $(\overleftrightarrow{AD} \& \overleftrightarrow{DF})$
6. $(\overleftrightarrow{AD} \& \overleftrightarrow{DF})$
7. $\angle ACB$
8. $\angle ACD$
9. $\angle BCE$
10. $\angle BCD$
11. _____
12. _____
13. _____
14. _____
15. _____

Use the dot matrix to draw the following:

- 11) Line \overleftrightarrow{AC}
- 12) Segment \overline{AB}
- 13) Angle $\angle ABD$
- 14) Line \overleftrightarrow{EF} parallel to line \overleftrightarrow{AC}
- 15) Segment \overline{EG} perpendicular to \overleftrightarrow{EF}

