





Create and label the line plot using the set of numbers provided.


- 1) $7\frac{1}{2}$ $6\frac{1}{2}$ $5\frac{1}{2}$ $7\frac{1}{2}$ 7 6 7 $5\frac{1}{2}$
 $5\frac{1}{2}$ 6 $7\frac{1}{2}$ 6 $6\frac{1}{2}$ 7 $6\frac{1}{2}$ 5




- 2) $5\frac{2}{4}$ $6\frac{1}{4}$ 4 $6\frac{1}{4}$ $4\frac{1}{4}$ $5\frac{3}{4}$ $6\frac{3}{4}$ $6\frac{2}{4}$
 $5\frac{3}{4}$ $6\frac{3}{4}$ 6 $5\frac{2}{4}$ $6\frac{1}{4}$ 5 4 6




- 3) $3\frac{3}{8}$ $5\frac{5}{8}$ $3\frac{4}{8}$ $4\frac{4}{8}$ $3\frac{5}{8}$ 4 $3\frac{5}{8}$ $5\frac{5}{8}$
 4 $5\frac{5}{8}$ $3\frac{7}{8}$ 5 $3\frac{4}{8}$ $3\frac{5}{8}$ $4\frac{7}{8}$ $3\frac{3}{8}$



- 4) $9\frac{2}{4}$ $8\frac{1}{4}$ 9 $8\frac{3}{4}$ $8\frac{2}{4}$ 9 $9\frac{3}{4}$ $8\frac{2}{4}$
 $7\frac{3}{4}$ $9\frac{3}{4}$ $9\frac{1}{4}$ $8\frac{1}{4}$ $7\frac{1}{4}$ 7 $7\frac{2}{4}$ $8\frac{1}{4}$



- 5) 11 $11\frac{5}{8}$ $11\frac{3}{8}$ 11 $11\frac{6}{8}$ $10\frac{6}{8}$ $10\frac{7}{8}$ $11\frac{3}{8}$
 $10\frac{7}{8}$ $9\frac{7}{8}$ $10\frac{5}{8}$ $9\frac{6}{8}$ $9\frac{2}{8}$ $9\frac{7}{8}$ $9\frac{4}{8}$ $10\frac{7}{8}$





Create and label the line plot using the set of numbers provided.

