





Create and label the line plot using the set of numbers provided.


- 1) $4\frac{1}{4}$ $5\frac{2}{4}$ 3 5 $4\frac{2}{4}$ $3\frac{3}{4}$ $3\frac{2}{4}$ $3\frac{1}{4}$
 $5\frac{1}{4}$ $4\frac{2}{4}$ $5\frac{2}{4}$ $4\frac{2}{4}$ $4\frac{1}{4}$ $3\frac{3}{4}$ $5\frac{2}{4}$ $3\frac{2}{4}$




- 2) $9\frac{1}{2}$ 11 9 9 $11\frac{1}{2}$ $9\frac{1}{2}$ $10\frac{1}{2}$ $11\frac{1}{2}$
 $11\frac{1}{2}$ 11 $9\frac{1}{2}$ 10 11 10 $10\frac{1}{2}$ 9




- 3) $2\frac{3}{4}$ 2 $2\frac{2}{4}$ 2 4 $4\frac{1}{4}$ $3\frac{2}{4}$ $2\frac{1}{4}$
 $3\frac{3}{4}$ 2 $4\frac{3}{4}$ $2\frac{3}{4}$ $4\frac{2}{4}$ $2\frac{2}{4}$ 3 $4\frac{3}{4}$



- 4) $3\frac{6}{8}$ 3 $5\frac{1}{8}$ $5\frac{2}{8}$ $5\frac{1}{8}$ $3\frac{7}{8}$ $3\frac{3}{8}$ $3\frac{7}{8}$
 3 $5\frac{4}{8}$ $4\frac{4}{8}$ $3\frac{6}{8}$ $3\frac{7}{8}$ $5\frac{6}{8}$ 5 $5\frac{5}{8}$



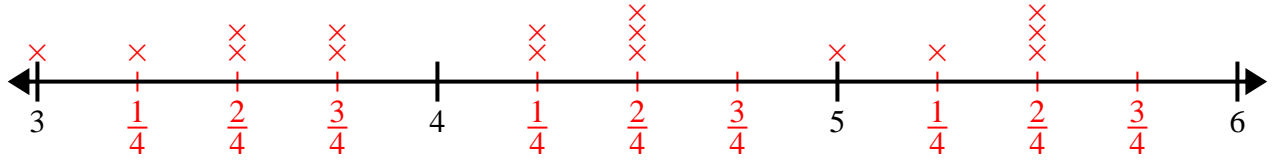
- 5) $4\frac{3}{8}$ $3\frac{5}{8}$ $4\frac{3}{8}$ $2\frac{2}{8}$ $3\frac{7}{8}$ $4\frac{7}{8}$ $4\frac{4}{8}$ $2\frac{7}{8}$
 $2\frac{6}{8}$ $3\frac{2}{8}$ 3 $3\frac{4}{8}$ $2\frac{6}{8}$ $3\frac{4}{8}$ $3\frac{4}{8}$ $3\frac{6}{8}$



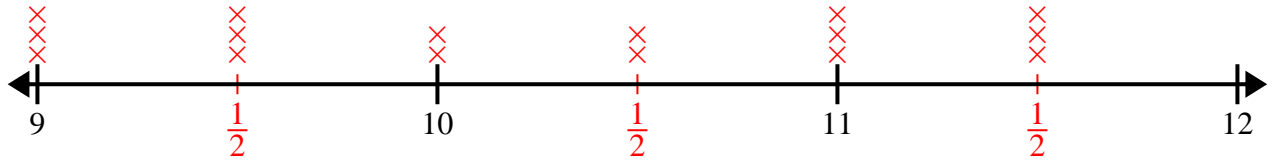


Create and label the line plot using the set of numbers provided.

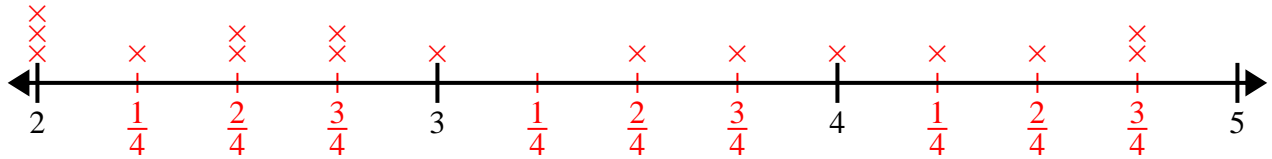
- 1) $4\frac{1}{4}$ $5\frac{2}{4}$ 3 5 $4\frac{2}{4}$ $3\frac{3}{4}$ $3\frac{2}{4}$ $3\frac{1}{4}$
 $5\frac{1}{4}$ $4\frac{2}{4}$ $5\frac{2}{4}$ $4\frac{2}{4}$ $4\frac{1}{4}$ $3\frac{3}{4}$ $5\frac{2}{4}$ $3\frac{2}{4}$



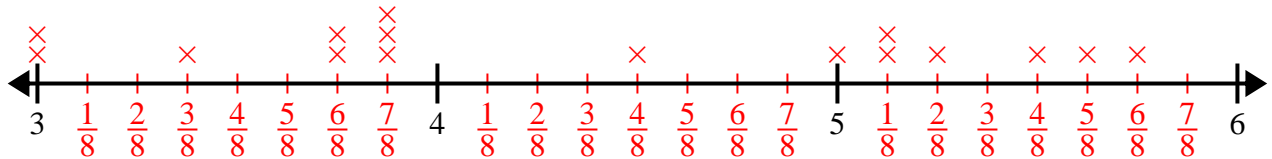
- 2) $9\frac{1}{2}$ 11 9 9 $11\frac{1}{2}$ $9\frac{1}{2}$ $10\frac{1}{2}$ $11\frac{1}{2}$
 $11\frac{1}{2}$ 11 $9\frac{1}{2}$ 10 11 10 $10\frac{1}{2}$ 9



- 3) $2\frac{3}{4}$ 2 $2\frac{2}{4}$ 2 4 $4\frac{1}{4}$ $3\frac{2}{4}$ $2\frac{1}{4}$
 $3\frac{3}{4}$ 2 $4\frac{3}{4}$ $2\frac{3}{4}$ $4\frac{2}{4}$ $2\frac{2}{4}$ 3 $4\frac{3}{4}$



- 4) $3\frac{6}{8}$ 3 $5\frac{1}{8}$ $5\frac{2}{8}$ $5\frac{1}{8}$ $3\frac{7}{8}$ $3\frac{3}{8}$ $3\frac{7}{8}$
 3 $5\frac{4}{8}$ $4\frac{4}{8}$ $3\frac{6}{8}$ $3\frac{7}{8}$ $5\frac{6}{8}$ 5 $5\frac{5}{8}$



- 5) $4\frac{3}{8}$ $3\frac{5}{8}$ $4\frac{3}{8}$ $2\frac{2}{8}$ $3\frac{7}{8}$ $4\frac{7}{8}$ $4\frac{4}{8}$ $2\frac{7}{8}$
 $2\frac{6}{8}$ $3\frac{2}{8}$ 3 $3\frac{4}{8}$ $2\frac{6}{8}$ $3\frac{4}{8}$ $3\frac{4}{8}$ $3\frac{6}{8}$

