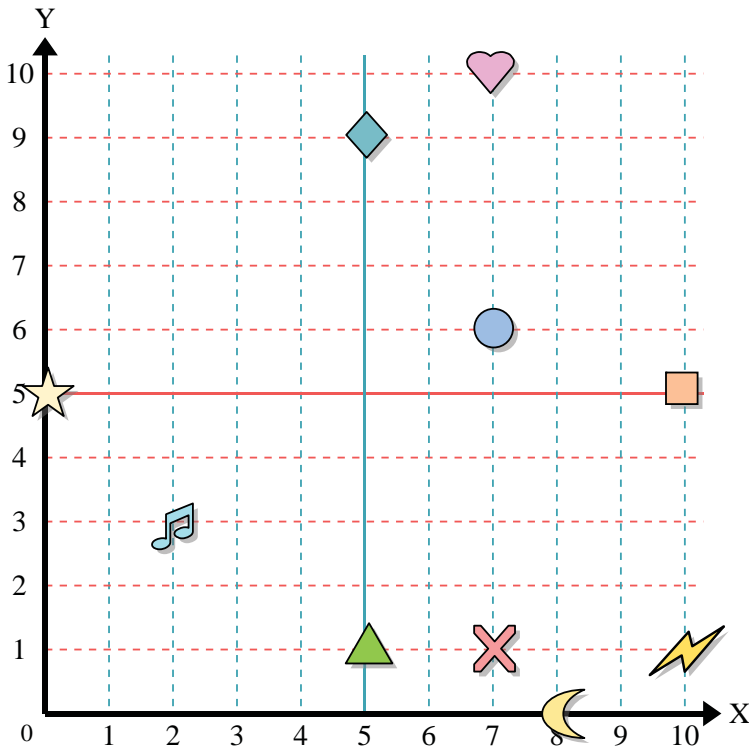




Use the grid below to determine the coordinates where each figure is located.



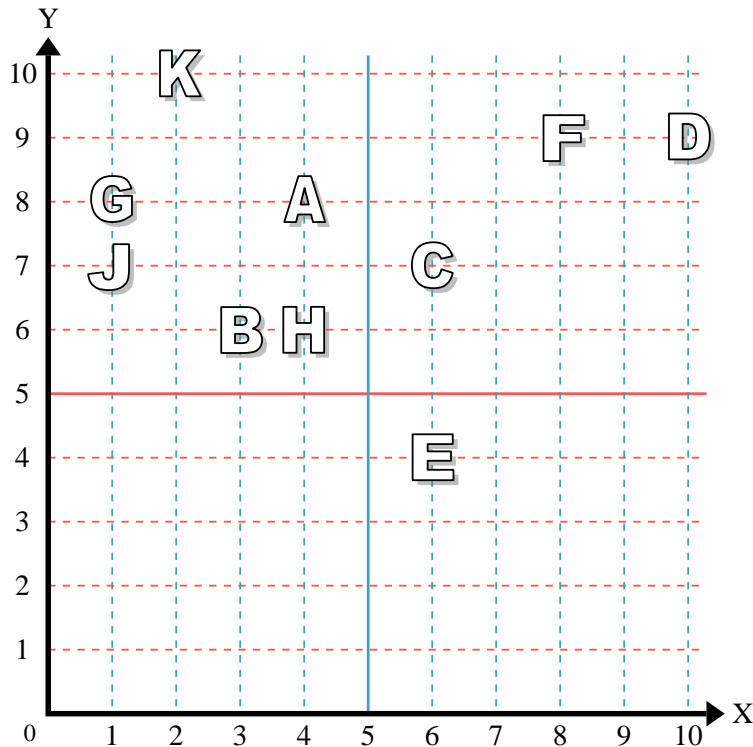
- 1) Star _____
- 2) Lightning _____
- 3) Circle _____
- 4) Heart _____
- 5) Cross _____
- 6) Triangle _____
- 7) Moon _____
- 8) Square _____
- 9) Diamond _____
- 10) Music Note _____

Answers

- 1. _____
- 2. _____
- 3. _____
- 4. _____
- 5. _____
- 6. _____
- 7. _____
- 8. _____
- 9. _____
- 10. _____
- 11. _____
- 12. _____
- 13. _____
- 14. _____
- 15. _____
- 16. _____
- 17. _____
- 18. _____
- 19. _____
- 20. _____

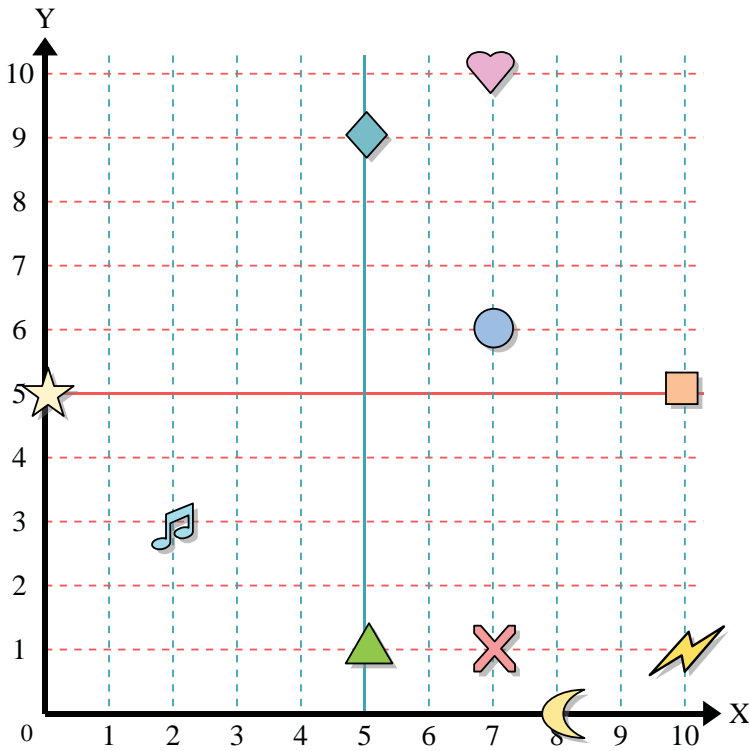
Determine which letter is at each coordinate using the grid below.

- 11) (4, 8) _____
- 12) (6, 7) _____
- 13) (2, 10) _____
- 14) (1, 7) _____
- 15) (8, 9) _____
- 16) (4, 6) _____
- 17) (3, 6) _____
- 18) (1, 8) _____
- 19) (10, 9) _____
- 20) (6, 4) _____





Use the grid below to determine the coordinates where each figure is located.



- 1) Star (0, 5)
- 2) Lightning (10, 1)
- 3) Circle (7, 6)
- 4) Heart (7, 10)
- 5) Cross (7, 1)
- 6) Triangle (5, 1)
- 7) Moon (8, 0)
- 8) Square (10, 5)
- 9) Diamond (5, 9)
- 10) Music Note (2, 3)

Answers

- 1. (0, 5)
- 2. (10, 1)
- 3. (7, 6)
- 4. (7, 10)
- 5. (7, 1)
- 6. (5, 1)
- 7. (8, 0)
- 8. (10, 5)
- 9. (5, 9)
- 10. (2, 3)
- 11. A
- 12. C
- 13. K
- 14. J
- 15. F
- 16. H
- 17. B
- 18. G
- 19. D
- 20. E

Determine which letter is at each coordinate using the grid below.

- 11) (4, 8) A
- 12) (6, 7) C
- 13) (2, 10) K
- 14) (1, 7) J
- 15) (8, 9) F
- 16) (4, 6) H
- 17) (3, 6) B
- 18) (1, 8) G
- 19) (10, 9) D
- 20) (6, 4) E

