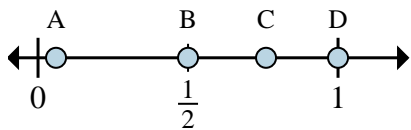
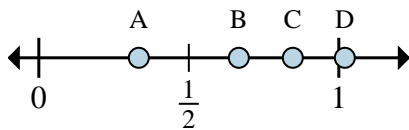




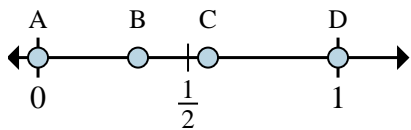
Determine which letter best shows the location of the fraction.



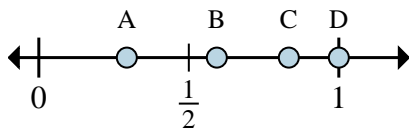
- 1) Which letter best shows $\frac{2}{2}$?
- 2) Which letter best shows $\frac{1}{2}$?



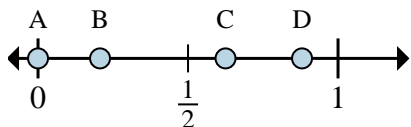
- 3) Which letter best shows $\frac{1}{3}$?
- 4) Which letter best shows $\frac{2}{3}$?



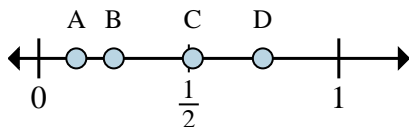
- 5) Which letter best shows $\frac{0}{4}$?
- 6) Which letter best shows $\frac{4}{4}$?



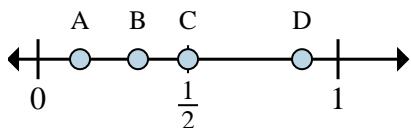
- 7) Which letter best shows $\frac{6}{6}$?
- 8) Which letter best shows $\frac{5}{6}$?



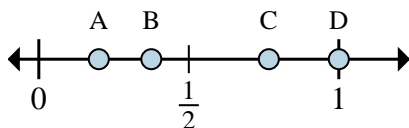
- 9) Which letter best shows $\frac{0}{8}$?
- 10) Which letter best shows $\frac{5}{8}$?



- 11) Which letter best shows $\frac{1}{8}$?
- 12) Which letter best shows $\frac{2}{8}$?



- 13) Which letter best shows $\frac{2}{6}$?
- 14) Which letter best shows $\frac{3}{6}$?



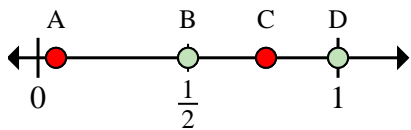
- 15) Which letter best shows $\frac{3}{8}$?
- 16) Which letter best shows $\frac{8}{8}$?

Answers

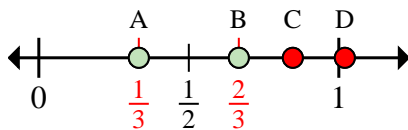
- 1. _____
- 2. _____
- 3. _____
- 4. _____
- 5. _____
- 6. _____
- 7. _____
- 8. _____
- 9. _____
- 10. _____
- 11. _____
- 12. _____
- 13. _____
- 14. _____
- 15. _____
- 16. _____



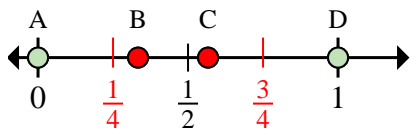
Determine which letter best shows the location of the fraction.



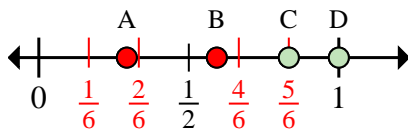
- 1) Which letter best shows $\frac{2}{2}$?
- 2) Which letter best shows $\frac{1}{2}$?



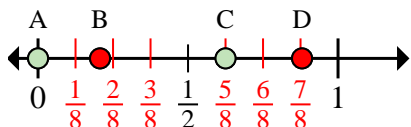
- 3) Which letter best shows $\frac{1}{3}$?
- 4) Which letter best shows $\frac{2}{3}$?



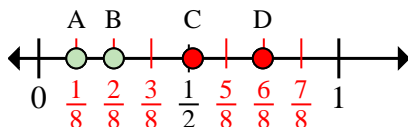
- 5) Which letter best shows $\frac{0}{4}$?
- 6) Which letter best shows $\frac{4}{4}$?



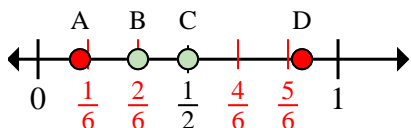
- 7) Which letter best shows $\frac{6}{6}$?
- 8) Which letter best shows $\frac{5}{6}$?



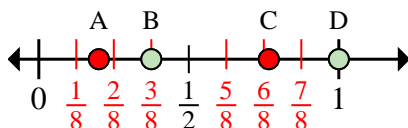
- 9) Which letter best shows $\frac{0}{8}$?
- 10) Which letter best shows $\frac{5}{8}$?



- 11) Which letter best shows $\frac{1}{8}$?
- 12) Which letter best shows $\frac{2}{8}$?



- 13) Which letter best shows $\frac{2}{6}$?
- 14) Which letter best shows $\frac{3}{6}$?



- 15) Which letter best shows $\frac{3}{8}$?
- 16) Which letter best shows $\frac{8}{8}$?

Answers

1. D
2. B
3. A
4. B
5. A
6. D
7. D
8. C
9. A
10. C
11. A
12. B
13. B
14. C
15. B
16. D