



Use the shapes provided to answer the questions.

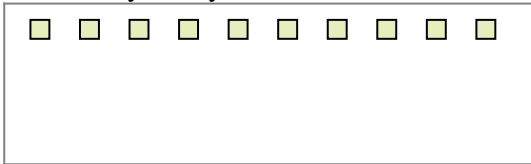
Ex) There are 15 shapes below. How many groups of 6 can you make with them?
How many will you have left over?



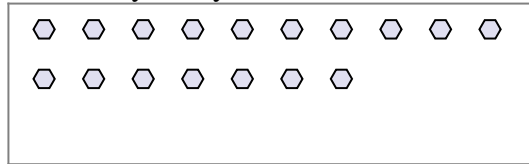
1) There are 10 shapes below. How many groups of 5 can you make with them?
How many will you have left over?




2) There are 10 shapes below. How many groups of 2 can you make with them?
How many will you have left over?



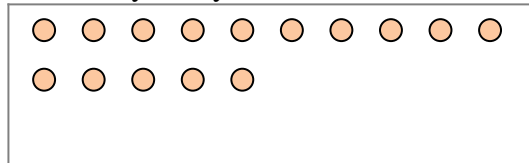
3) There are 17 shapes below. How many groups of 6 can you make with them?
How many will you have left over?




4) There are 20 shapes below. How many groups of 7 can you make with them?
How many will you have left over?




5) There are 15 shapes below. How many groups of 4 can you make with them?
How many will you have left over?



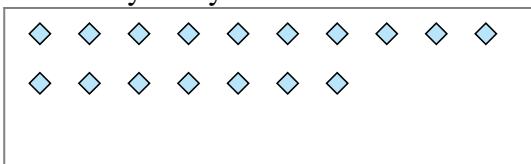
6) There are 22 shapes below. How many groups of 4 can you make with them?
How many will you have left over?



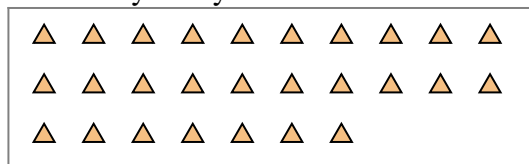
7) There are 13 shapes below. How many groups of 4 can you make with them?
How many will you have left over?



8) There are 17 shapes below. How many groups of 6 can you make with them?
How many will you have left over?



9) There are 27 shapes below. How many groups of 9 can you make with them?
How many will you have left over?



Answers

Ex. 2

Ex. 3

1a. _____

1b. _____

2a. _____

2b. _____

3a. _____

3b. _____

4a. _____

4b. _____

5a. _____

5b. _____

6a. _____

6b. _____

7a. _____

7b. _____

8a. _____

8b. _____

9a. _____

9b. _____



Use the shapes provided to answer the questions.

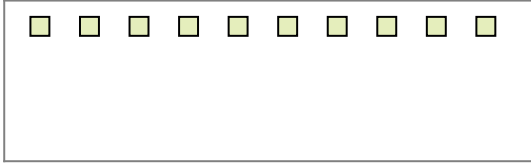
Ex) There are 15 shapes below. How many groups of 6 can you make with them?
How many will you have left over?



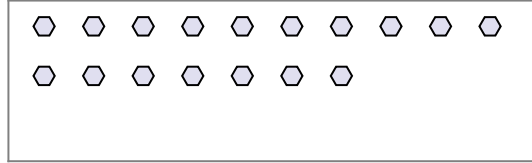
1) There are 10 shapes below. How many groups of 5 can you make with them?
How many will you have left over?



2) There are 10 shapes below. How many groups of 2 can you make with them?
How many will you have left over?



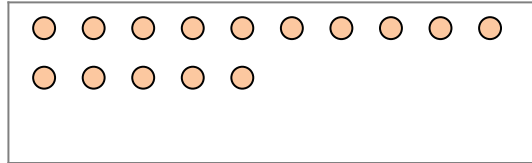
3) There are 17 shapes below. How many groups of 6 can you make with them?
How many will you have left over?




4) There are 20 shapes below. How many groups of 7 can you make with them?
How many will you have left over?




5) There are 15 shapes below. How many groups of 4 can you make with them?
How many will you have left over?



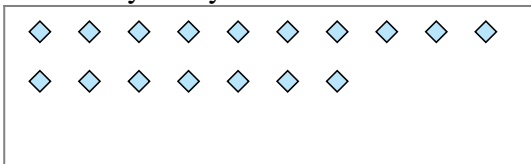
6) There are 22 shapes below. How many groups of 4 can you make with them?
How many will you have left over?



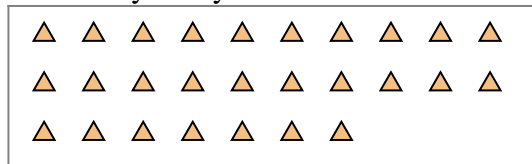
7) There are 13 shapes below. How many groups of 4 can you make with them?
How many will you have left over?



8) There are 17 shapes below. How many groups of 6 can you make with them?
How many will you have left over?



9) There are 27 shapes below. How many groups of 9 can you make with them?
How many will you have left over?



Answers

Ex. 2

Ex. 3

1a. 2

1b. 0

2a. 5

2b. 0

3a. 2

3b. 5

4a. 2

4b. 6

5a. 3

5b. 3

6a. 5

6b. 2

7a. 3

7b. 1

8a. 2

8b. 5

9a. 3

9b. 0