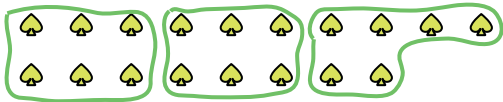







Use the shapes provided to answer the questions.

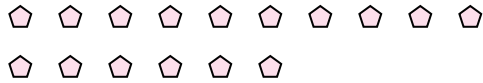
Ex) How many groups of 6 can you make with the 18 shapes below?



1) How many groups of 9 can you make with the 36 shapes below?



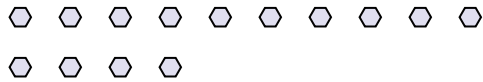
2) How many groups of 8 can you make with the 16 shapes below?




3) How many groups of 3 can you make with the 33 shapes below?




4) How many groups of 7 can you make with the 14 shapes below?



5) How many groups of 8 can you make with the 24 shapes below?



6) How many groups of 7 can you make with the 35 shapes below?




7) How many groups of 7 can you make with the 14 shapes below?



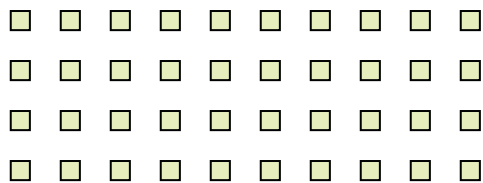
8) How many groups of 4 can you make with the 32 shapes below?



9) How many groups of 2 can you make with the 36 shapes below?



10) How many groups of 8 can you make with the 40 shapes below?



11) How many groups of 8 can you make with the 24 shapes below?



Answers

Ex. 3

1. 4

2. 2

3. 11

4. 2

5. 3

6. 5

7. 2

8. 8

9. 18

10. 5

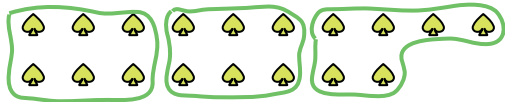
11. 3



Use the shapes provided to answer the questions.

Answers

Ex) How many groups of 6 can you make with the 18 shapes below?




1) How many groups of 2 can you make with the 18 shapes below?



Ex. 3

2) How many groups of 4 can you make with the 24 shapes below?



3) How many groups of 5 can you make with the 30 shapes below?



1. \_\_\_\_\_

2. \_\_\_\_\_

3. \_\_\_\_\_

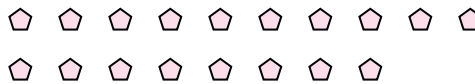
4. \_\_\_\_\_

5. \_\_\_\_\_

4) How many groups of 5 can you make with the 10 shapes below?



5) How many groups of 6 can you make with the 18 shapes below?

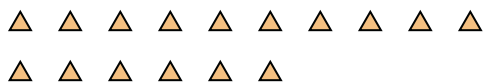


6. \_\_\_\_\_


7. \_\_\_\_\_

8. \_\_\_\_\_

6) How many groups of 4 can you make with the 16 shapes below?



7) How many groups of 9 can you make with the 36 shapes below?

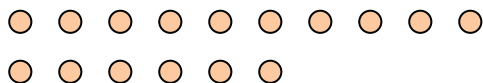


9. \_\_\_\_\_

10. \_\_\_\_\_

11. \_\_\_\_\_

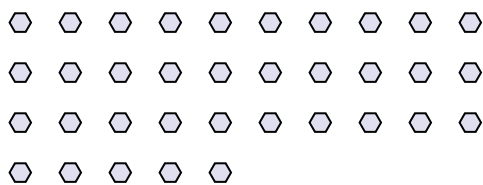
8) How many groups of 4 can you make with the 16 shapes below?



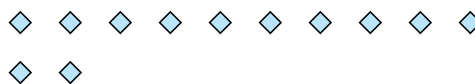
9) How many groups of 5 can you make with the 35 shapes below?



10) How many groups of 7 can you make with the 35 shapes below?



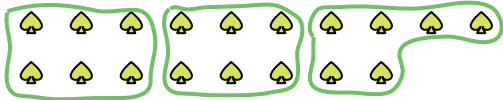
11) How many groups of 4 can you make with the 12 shapes below?





Use the shapes provided to answer the questions.


Ex) How many groups of 6 can you make with the 18 shapes below?



1) How many groups of 2 can you make with the 18 shapes below?



2) How many groups of 4 can you make with the 24 shapes below?



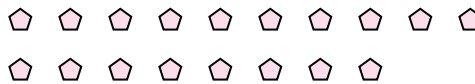
3) How many groups of 5 can you make with the 30 shapes below?



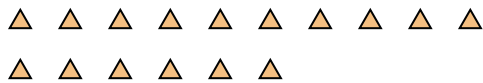
4) How many groups of 5 can you make with the 10 shapes below?




5) How many groups of 6 can you make with the 18 shapes below?



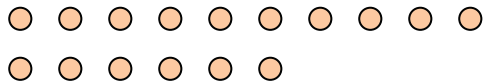
6) How many groups of 4 can you make with the 16 shapes below?



7) How many groups of 9 can you make with the 36 shapes below?



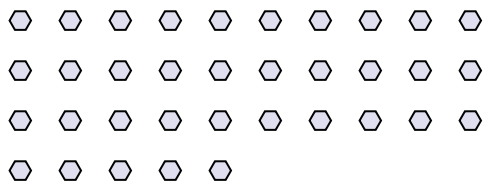
8) How many groups of 4 can you make with the 16 shapes below?



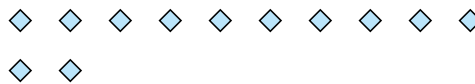
9) How many groups of 5 can you make with the 35 shapes below?



10) How many groups of 7 can you make with the 35 shapes below?



11) How many groups of 4 can you make with the 12 shapes below?



Answers

Ex. 3

1. 9

2. 6

3. 6

4. 2

5. 3

6. 4

7. 4

8. 4

9. 7

10. 5

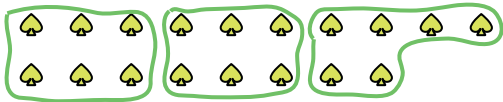
11. 3





Use the shapes provided to answer the questions.

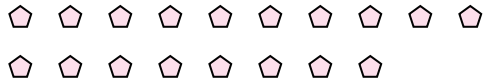
Ex) How many groups of 6 can you make with the 18 shapes below?




1) How many groups of 6 can you make with the 36 shapes below?



2) How many groups of 3 can you make with the 18 shapes below?



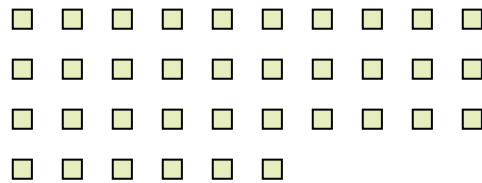
3) How many groups of 3 can you make with the 39 shapes below?



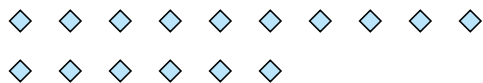
4) How many groups of 9 can you make with the 27 shapes below?



5) How many groups of 6 can you make with the 36 shapes below?




6) How many groups of 8 can you make with the 16 shapes below?




7) How many groups of 9 can you make with the 18 shapes below?



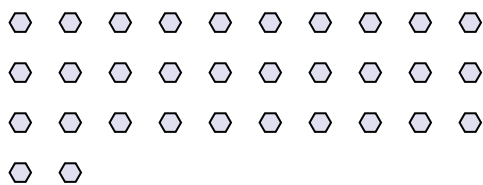
8) How many groups of 9 can you make with the 27 shapes below?



9) How many groups of 2 can you make with the 34 shapes below?



10) How many groups of 8 can you make with the 32 shapes below?



11) How many groups of 5 can you make with the 15 shapes below?



Answers

Ex. 3

1. 6

2. 6

3. 13

4. 3

5. 6

6. 2

7. 2

8. 3

9. 17

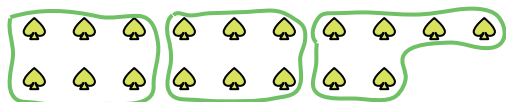
10. 4

11. 3



Use the shapes provided to answer the questions.


Ex) How many groups of 6 can you make with the 18 shapes below?



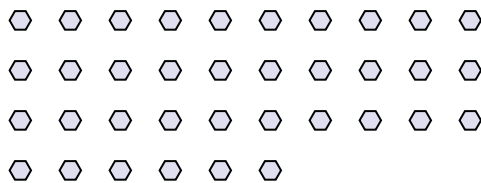
1) How many groups of 8 can you make with the 40 shapes below?



2) How many groups of 2 can you make with the 34 shapes below?



3) How many groups of 9 can you make with the 36 shapes below?



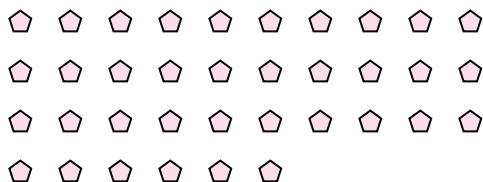
4) How many groups of 5 can you make with the 10 shapes below?




5) How many groups of 4 can you make with the 20 shapes below?




6) How many groups of 2 can you make with the 36 shapes below?



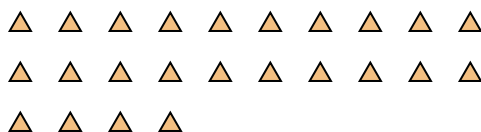
7) How many groups of 8 can you make with the 40 shapes below?



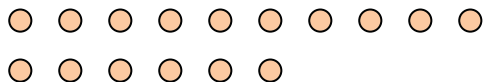
8) How many groups of 8 can you make with the 32 shapes below?



9) How many groups of 3 can you make with the 24 shapes below?



10) How many groups of 8 can you make with the 16 shapes below?



11) How many groups of 3 can you make with the 39 shapes below?



Answers

Ex. 3

1. \_\_\_\_\_

2. \_\_\_\_\_

3. \_\_\_\_\_

4. \_\_\_\_\_

5. \_\_\_\_\_

6. \_\_\_\_\_

7. \_\_\_\_\_

8. \_\_\_\_\_

9. \_\_\_\_\_

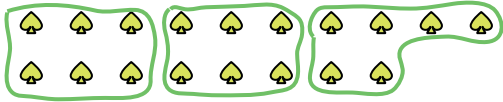
10. \_\_\_\_\_

11. \_\_\_\_\_



Use the shapes provided to answer the questions.


Ex) How many groups of 6 can you make with the 18 shapes below?



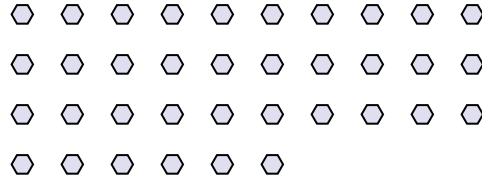
1) How many groups of 8 can you make with the 40 shapes below?



2) How many groups of 2 can you make with the 34 shapes below?



3) How many groups of 9 can you make with the 36 shapes below?



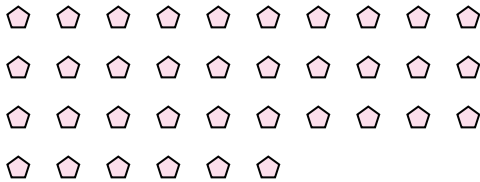
4) How many groups of 5 can you make with the 10 shapes below?



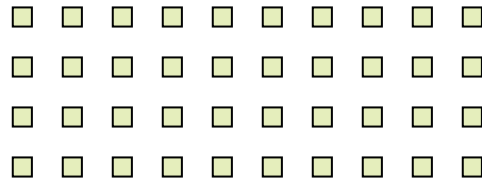
5) How many groups of 4 can you make with the 20 shapes below?




6) How many groups of 2 can you make with the 36 shapes below?



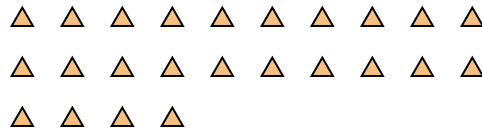
7) How many groups of 8 can you make with the 40 shapes below?



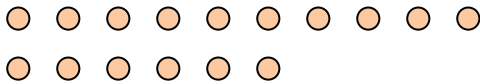
8) How many groups of 8 can you make with the 32 shapes below?



9) How many groups of 3 can you make with the 24 shapes below?



10) How many groups of 8 can you make with the 16 shapes below?



11) How many groups of 3 can you make with the 39 shapes below?



Answers

Ex. 3

1. 5

2. 17

3. 4

4. 2

5. 5

6. 18

7. 5

8. 4

9. 8

10. 2

11. 13

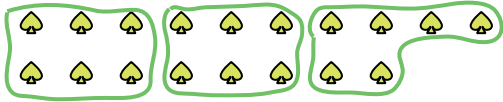






Use the shapes provided to answer the questions.


Ex) How many groups of 6 can you make with the 18 shapes below?



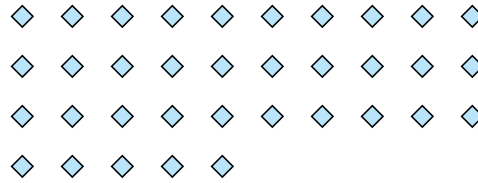
1) How many groups of 3 can you make with the 9 shapes below?



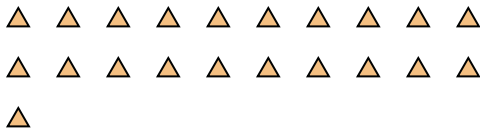
2) How many groups of 4 can you make with the 24 shapes below?



3) How many groups of 7 can you make with the 35 shapes below?



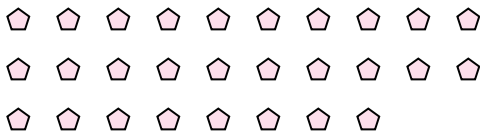
4) How many groups of 3 can you make with the 21 shapes below?



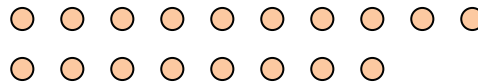
5) How many groups of 5 can you make with the 15 shapes below?



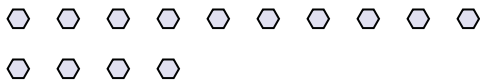
6) How many groups of 7 can you make with the 28 shapes below?



7) How many groups of 6 can you make with the 18 shapes below?



8) How many groups of 2 can you make with the 14 shapes below?



9) How many groups of 3 can you make with the 12 shapes below?



10) How many groups of 7 can you make with the 35 shapes below?



11) How many groups of 6 can you make with the 18 shapes below?



Answers

Ex. 3

1. 3

2. 6

3. 5

4. 7

5. 3

6. 4

7. 3

8. 7

9. 4

10. 5

11. 3

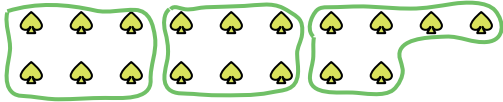




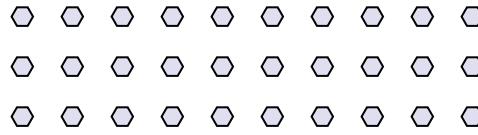


Use the shapes provided to answer the questions.

Ex) How many groups of 6 can you make with the 18 shapes below?



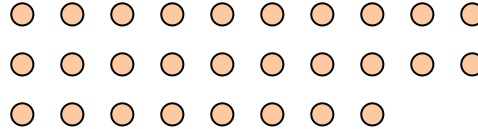
1) How many groups of 6 can you make with the 30 shapes below?



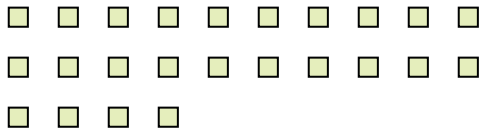
2) How many groups of 5 can you make with the 15 shapes below?



3) How many groups of 4 can you make with the 28 shapes below?




4) How many groups of 6 can you make with the 24 shapes below?




5) How many groups of 3 can you make with the 6 shapes below?



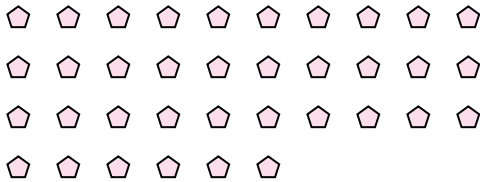
6) How many groups of 8 can you make with the 32 shapes below?



7) How many groups of 5 can you make with the 25 shapes below?




8) How many groups of 4 can you make with the 36 shapes below?



9) How many groups of 2 can you make with the 4 shapes below?



10) How many groups of 5 can you make with the 35 shapes below?



11) How many groups of 4 can you make with the 40 shapes below?



Answers

Ex. 3

1. \_\_\_\_\_

2. \_\_\_\_\_

3. \_\_\_\_\_

4. \_\_\_\_\_

5. \_\_\_\_\_

6. \_\_\_\_\_

7. \_\_\_\_\_

8. \_\_\_\_\_

9. \_\_\_\_\_

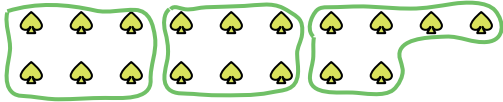
10. \_\_\_\_\_

11. \_\_\_\_\_

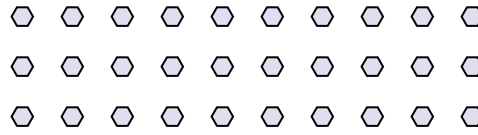


Use the shapes provided to answer the questions.

Ex) How many groups of 6 can you make with the 18 shapes below?



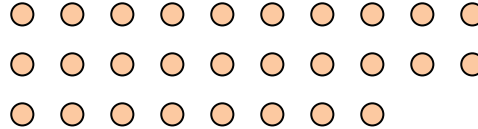
1) How many groups of 6 can you make with the 30 shapes below?



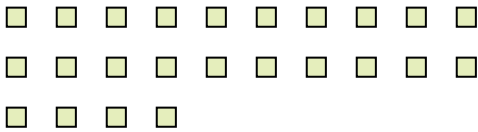
2) How many groups of 5 can you make with the 15 shapes below?



3) How many groups of 4 can you make with the 28 shapes below?




4) How many groups of 6 can you make with the 24 shapes below?




5) How many groups of 3 can you make with the 6 shapes below?



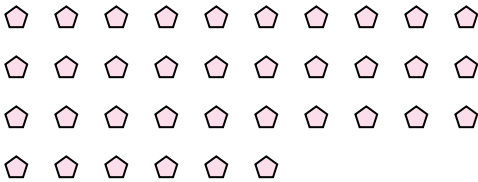
6) How many groups of 8 can you make with the 32 shapes below?



7) How many groups of 5 can you make with the 25 shapes below?




8) How many groups of 4 can you make with the 36 shapes below?



9) How many groups of 2 can you make with the 4 shapes below?



10) How many groups of 5 can you make with the 35 shapes below?



11) How many groups of 4 can you make with the 40 shapes below?



Answers

Ex. 3

1. 5

2. 3

3. 7

4. 4

5. 2

6. 4

7. 5

8. 9

9. 2

10. 7

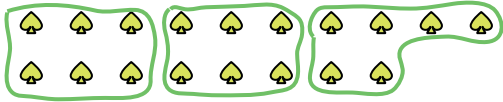
11. 10






Use the shapes provided to answer the questions.

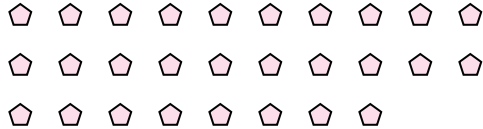
Ex) How many groups of 6 can you make with the 18 shapes below?



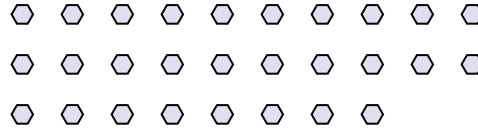
1) How many groups of 9 can you make with the 36 shapes below?



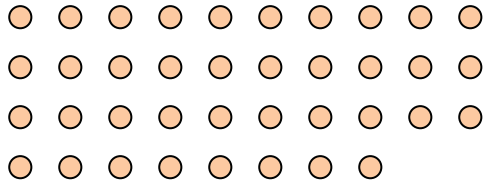
2) How many groups of 4 can you make with the 28 shapes below?



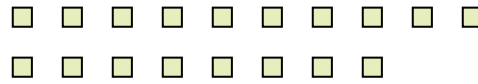
3) How many groups of 7 can you make with the 28 shapes below?



4) How many groups of 2 can you make with the 38 shapes below?



5) How many groups of 6 can you make with the 18 shapes below?




6) How many groups of 6 can you make with the 12 shapes below?



7) How many groups of 6 can you make with the 12 shapes below?




8) How many groups of 3 can you make with the 39 shapes below?



9) How many groups of 7 can you make with the 28 shapes below?



10) How many groups of 8 can you make with the 24 shapes below?



11) How many groups of 7 can you make with the 28 shapes below?



Answers

Ex. 3

1. 4

2. 7

3. 4

4. 19

5. 3

6. 2

7. 2

8. 13

9. 4

10. 3

11. 4

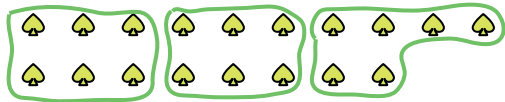




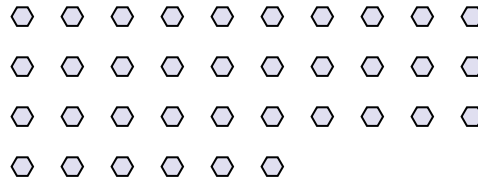


Use the shapes provided to answer the questions.

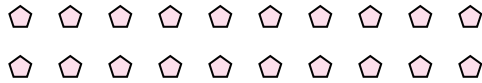
Ex) How many groups of 6 can you make with the 18 shapes below?




1) How many groups of 6 can you make with the 36 shapes below?



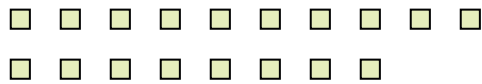
2) How many groups of 5 can you make with the 20 shapes below?



3) How many groups of 6 can you make with the 18 shapes below?



4) How many groups of 9 can you make with the 18 shapes below?




5) How many groups of 9 can you make with the 27 shapes below?



6) How many groups of 9 can you make with the 18 shapes below?



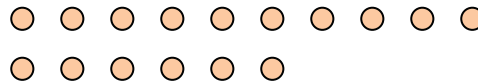
7) How many groups of 7 can you make with the 35 shapes below?



8) How many groups of 9 can you make with the 36 shapes below?



9) How many groups of 2 can you make with the 16 shapes below?



10) How many groups of 8 can you make with the 24 shapes below?



11) How many groups of 6 can you make with the 12 shapes below?



Answers

Ex. 3

1. 6

2. 4

3. 3

4. 2

5. 3

6. 2

7. 5

8. 4

9. 8

10. 3

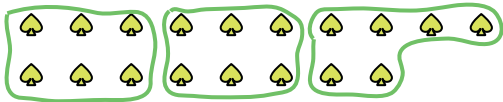
11. 2






Use the shapes provided to answer the questions.

Ex) How many groups of 6 can you make with the 18 shapes below?




1) How many groups of 5 can you make with the 35 shapes below?



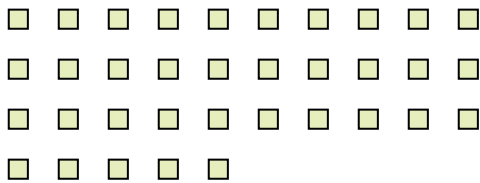
2) How many groups of 4 can you make with the 20 shapes below?




3) How many groups of 7 can you make with the 21 shapes below?



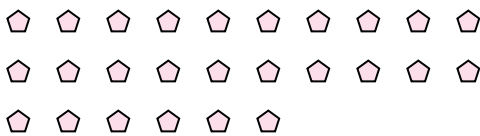
4) How many groups of 5 can you make with the 35 shapes below?



5) How many groups of 9 can you make with the 18 shapes below?



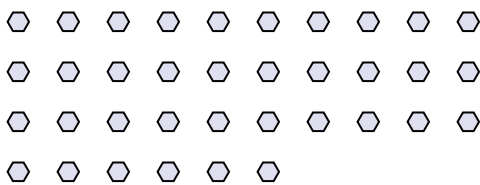
6) How many groups of 2 can you make with the 26 shapes below?




7) How many groups of 9 can you make with the 18 shapes below?



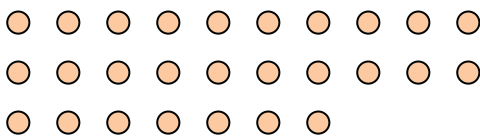
8) How many groups of 6 can you make with the 36 shapes below?



9) How many groups of 8 can you make with the 32 shapes below?



10) How many groups of 9 can you make with the 27 shapes below?



11) How many groups of 5 can you make with the 10 shapes below?



Answers

Ex. 3

1. 7

2. 5

3. 3

4. 7

5. 2

6. 13

7. 2

8. 6

9. 4

10. 3

11. 2