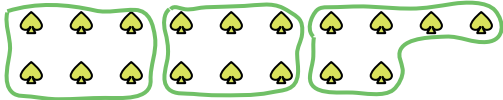






Use the shapes provided to answer the questions.

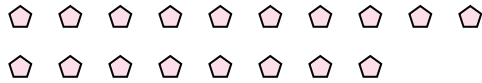
Ex) How many groups of 6 can you make with the 18 shapes below?




1) How many groups of 6 can you make with the 36 shapes below?



2) How many groups of 3 can you make with the 18 shapes below?



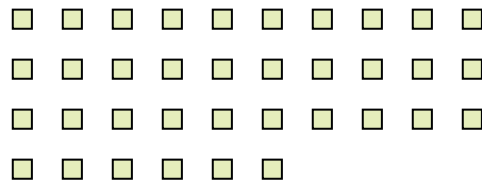
3) How many groups of 3 can you make with the 39 shapes below?



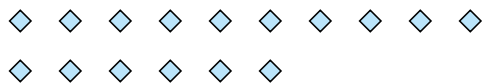
4) How many groups of 9 can you make with the 27 shapes below?



5) How many groups of 6 can you make with the 36 shapes below?



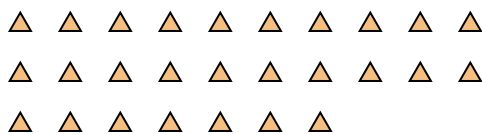
6) How many groups of 8 can you make with the 16 shapes below?




7) How many groups of 9 can you make with the 18 shapes below?



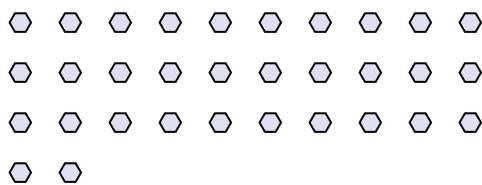
8) How many groups of 9 can you make with the 27 shapes below?



9) How many groups of 2 can you make with the 34 shapes below?



10) How many groups of 8 can you make with the 32 shapes below?



11) How many groups of 5 can you make with the 15 shapes below?



Answers

Ex. 3

1. 6

2. 6

3. 13

4. 3

5. 6

6. 2

7. 2

8. 3

9. 17

10. 4

11. 3