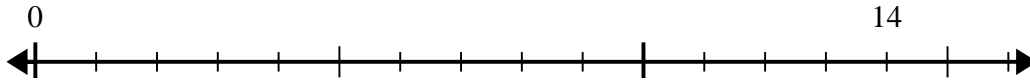


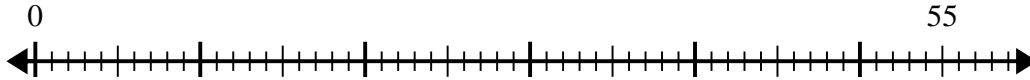


Use the number line to solve the division problem.

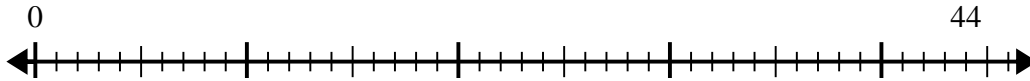
1) $14 \div 4 =$



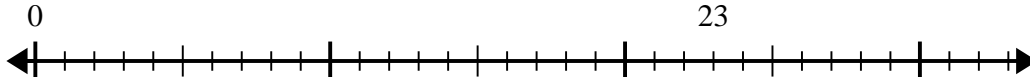
2) $55 \div 8 =$



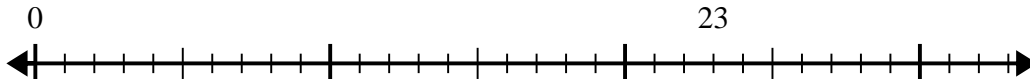
3) $44 \div 5 =$



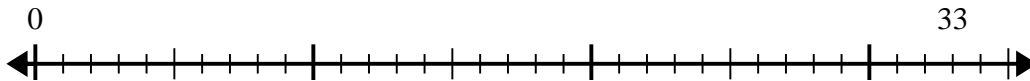
4) $23 \div 4 =$



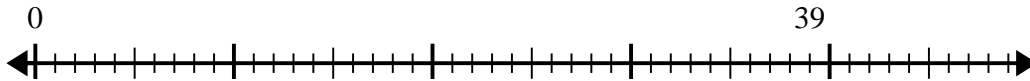
5) $23 \div 6 =$



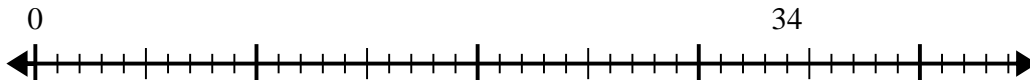
6) $33 \div 4 =$



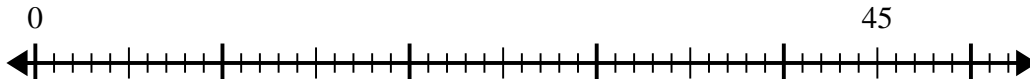
7) $39 \div 8 =$



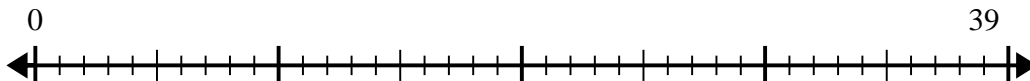
8) $34 \div 6 =$



9) $45 \div 7 =$



10) $39 \div 5 =$



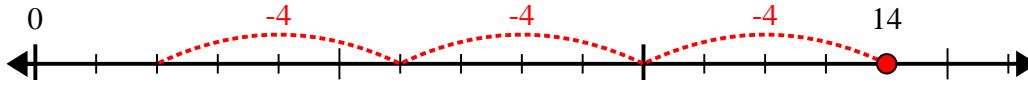
Answers

1. _____
2. _____
3. _____
4. _____
5. _____
6. _____
7. _____
8. _____
9. _____
10. _____

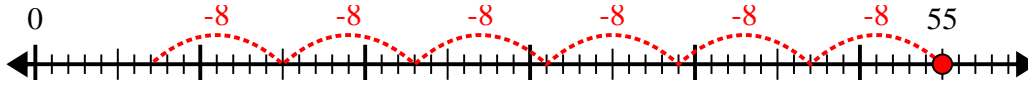


Use the number line to solve the division problem.

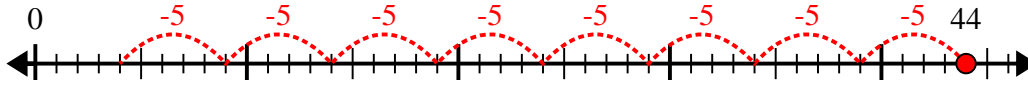
1) $14 \div 4 =$



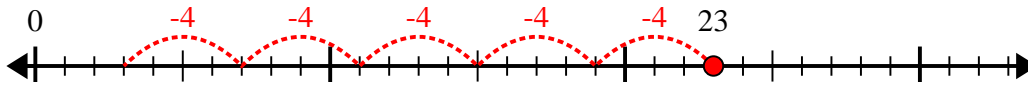
2) $55 \div 8 =$



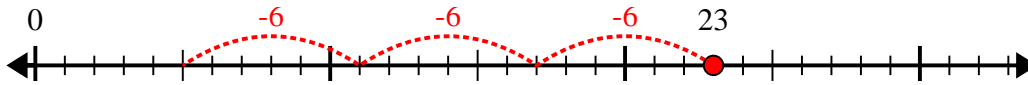
3) $44 \div 5 =$



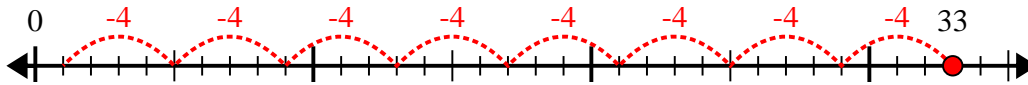
4) $23 \div 4 =$



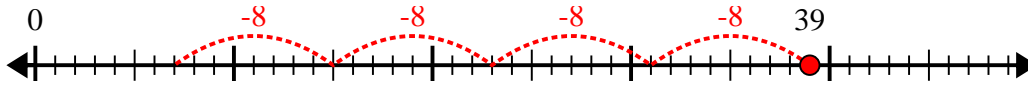
5) $23 \div 6 =$



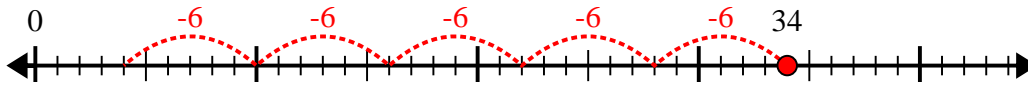
6) $33 \div 4 =$



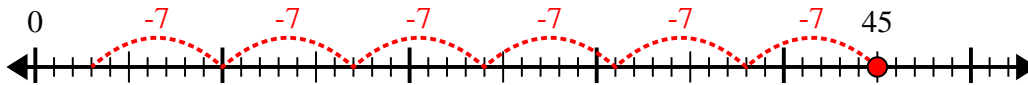
7) $39 \div 8 =$



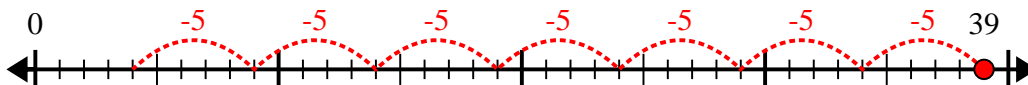
8) $34 \div 6 =$



9) $45 \div 7 =$



10) $39 \div 5 =$



Answers

1. 3r2

2. 6r7

3. 8r4

4. 5r3

5. 3r5

6. 8r1

7. 4r7

8. 5r4

9. 6r3

10. 7r4