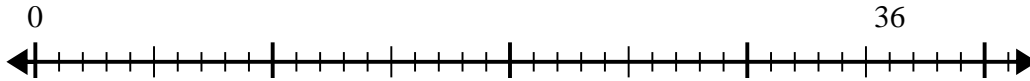




Use the number line to solve the division problem.

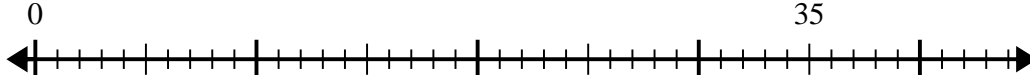
Answers

1) $36 \div 7 =$



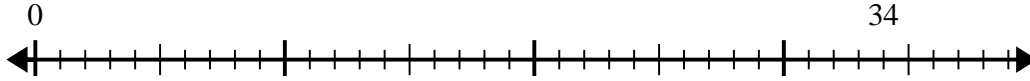
1. _____

2) $35 \div 6 =$



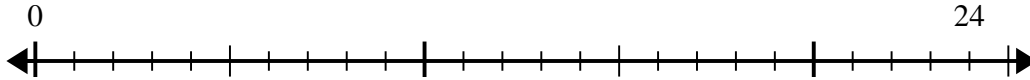
2. _____

3) $34 \div 7 =$



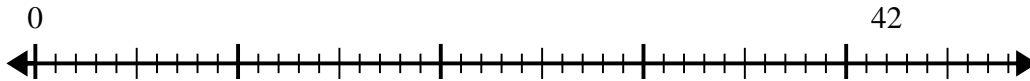
3. _____

4) $24 \div 5 =$



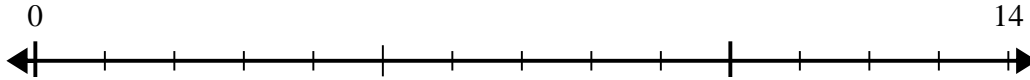
4. _____

5) $42 \div 5 =$



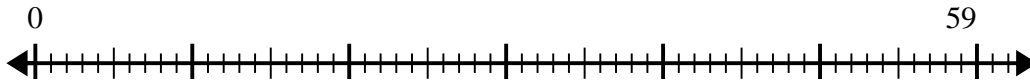
5. _____

6) $14 \div 4 =$



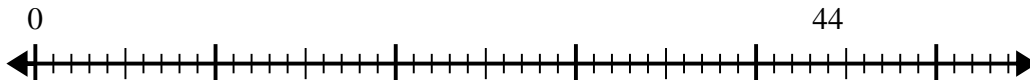
6. _____

7) $59 \div 8 =$



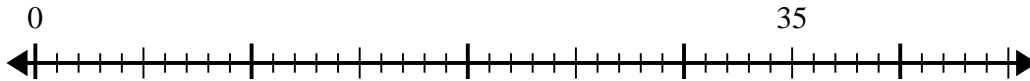
7. _____

8) $44 \div 6 =$



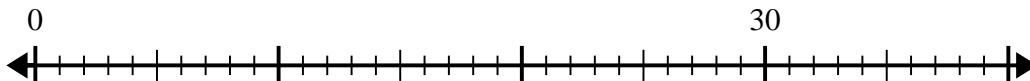
8. _____

9) $35 \div 4 =$



9. _____

10) $30 \div 4 =$

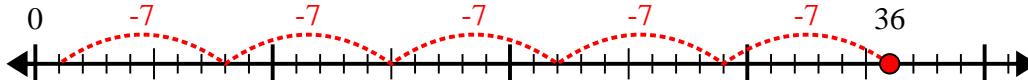


10. _____

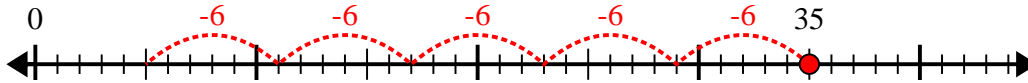


Use the number line to solve the division problem.

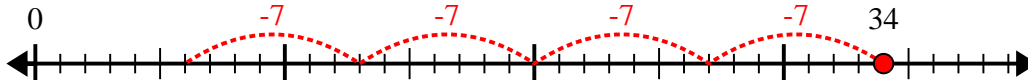
1) $36 \div 7 =$



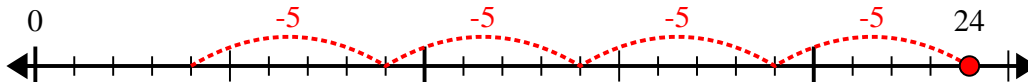
2) $35 \div 6 =$



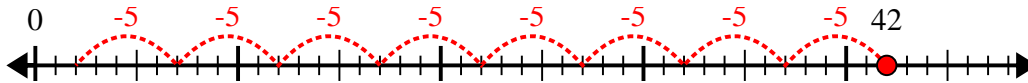
3) $34 \div 7 =$



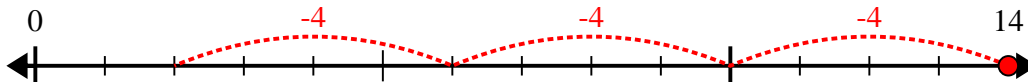
4) $24 \div 5 =$



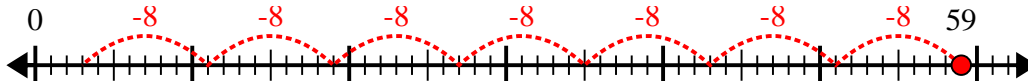
5) $42 \div 5 =$



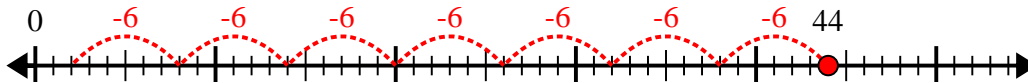
6) $14 \div 4 =$



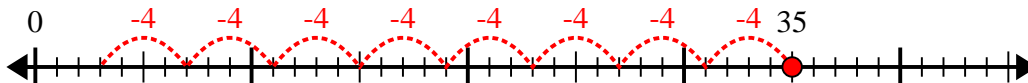
7) $59 \div 8 =$



8) $44 \div 6 =$



9) $35 \div 4 =$



10) $30 \div 4 =$



Answers

1. 5r1

2. 5r5

3. 4r6

4. 4r4

5. 8r2

6. 3r2

7. 7r3

8. 7r2

9. 8r3

10. 7r2