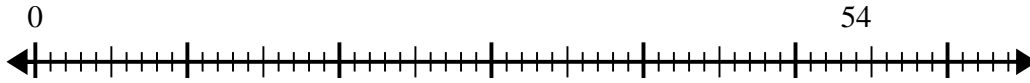


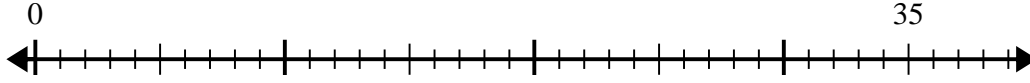


Use the number line to solve the division problem.

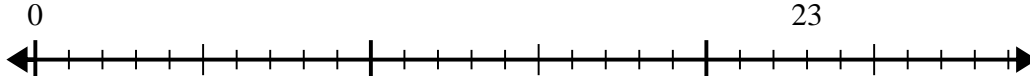
1) $54 \div 8 =$



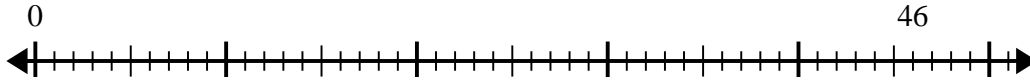
2) $35 \div 6 =$



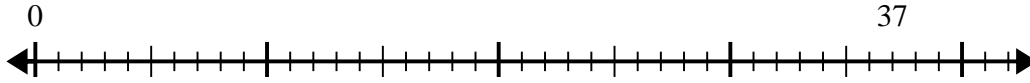
3) $23 \div 4 =$



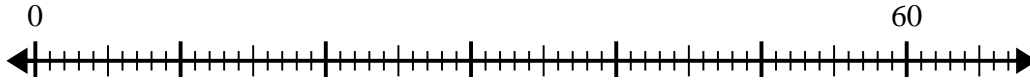
4) $46 \div 8 =$



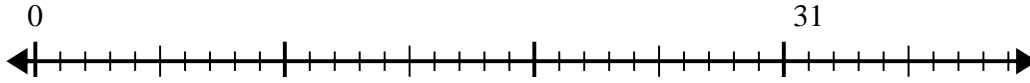
5) $37 \div 8 =$



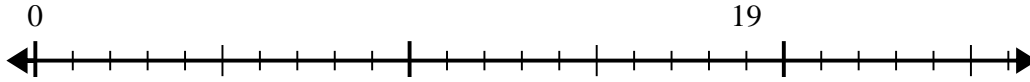
6) $60 \div 8 =$



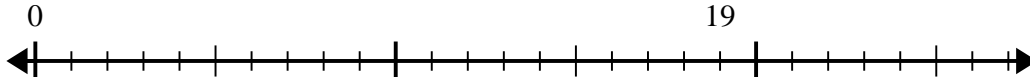
7) $31 \div 5 =$



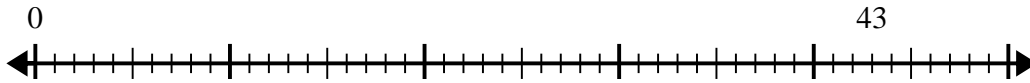
8) $19 \div 6 =$



9) $19 \div 5 =$



10) $43 \div 6 =$

Answers

1. _____

2. _____

3. _____

4. _____

5. _____

6. _____

7. _____

8. _____

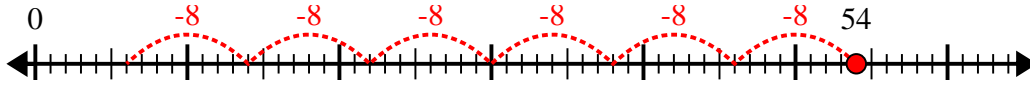
9. _____

10. _____

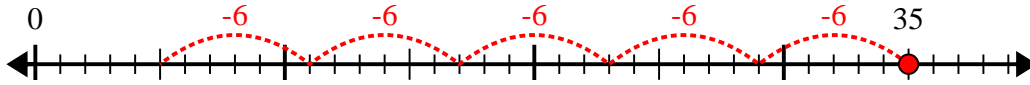


Use the number line to solve the division problem.

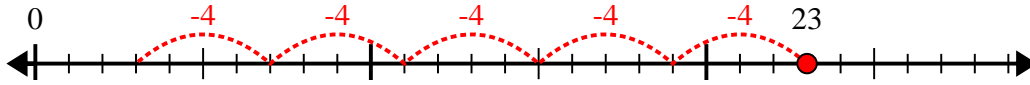
1) $54 \div 8 =$



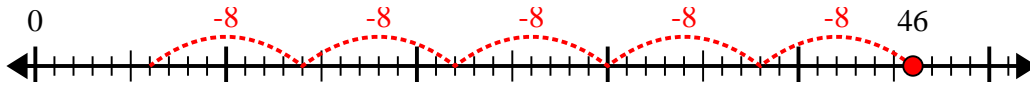
2) $35 \div 6 =$



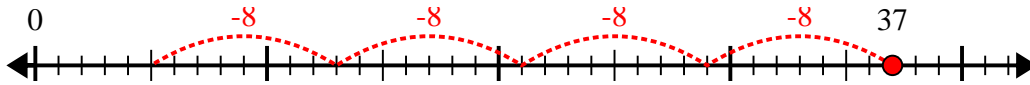
3) $23 \div 4 =$



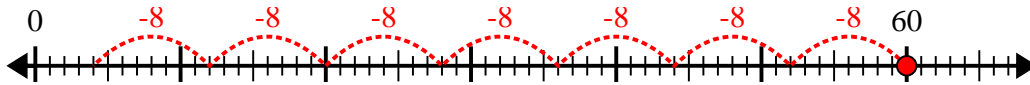
4) $46 \div 8 =$



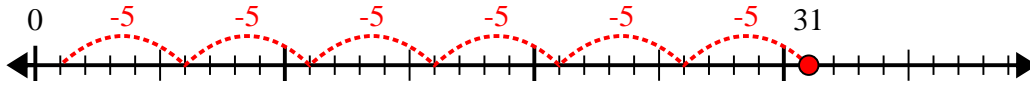
5) $37 \div 8 =$



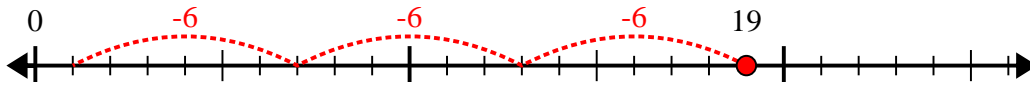
6) $60 \div 8 =$



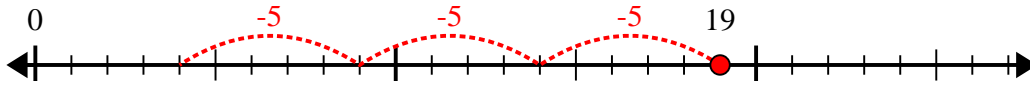
7) $31 \div 5 =$



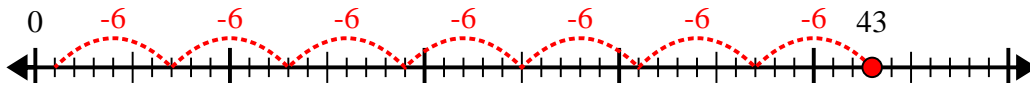
8) $19 \div 6 =$



9) $19 \div 5 =$



10) $43 \div 6 =$



Answers

1. 6r6

2. 5r5

3. 5r3

4. 5r6

5. 4r5

6. 7r4

7. 6r1

8. 3r1

9. 3r4

10. 7r1