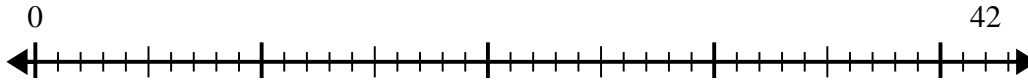


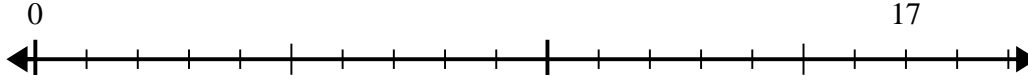


Use the number line to solve the division problem.

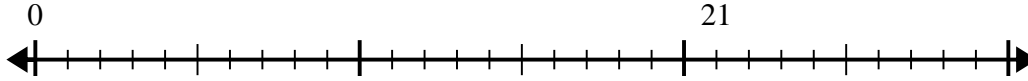
1) $42 \div 5 =$



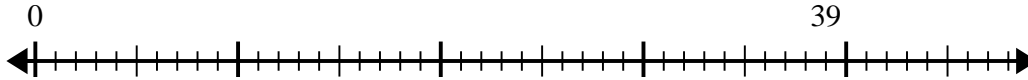
2) $17 \div 5 =$



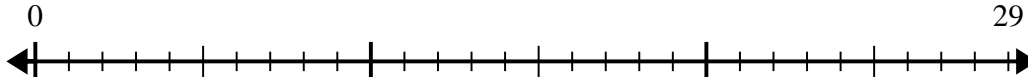
3) $21 \div 4 =$



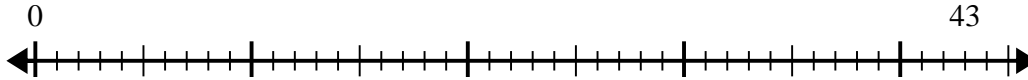
4) $39 \div 5 =$



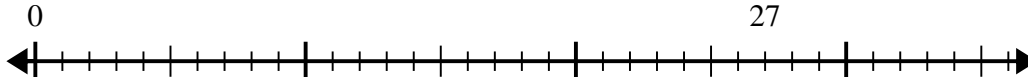
5) $29 \div 6 =$



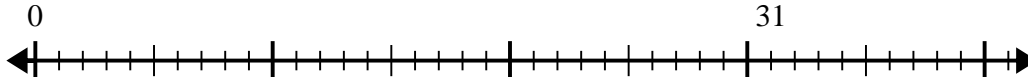
6) $43 \div 8 =$



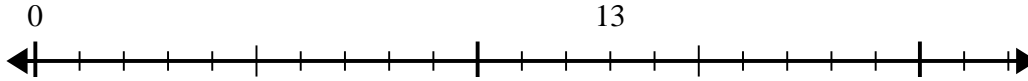
7) $27 \div 4 =$



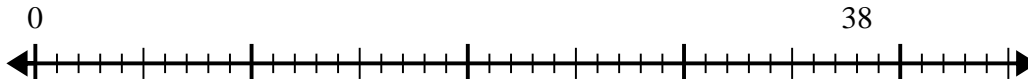
8) $31 \div 5 =$



9) $13 \div 4 =$



10) $38 \div 8 =$

**Answers**

1. _____

2. _____

3. _____

4. _____

5. _____

6. _____

7. _____

8. _____

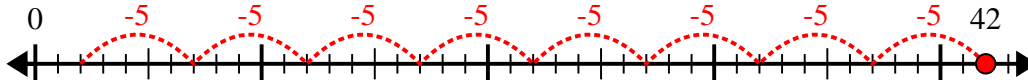
9. _____

10. _____

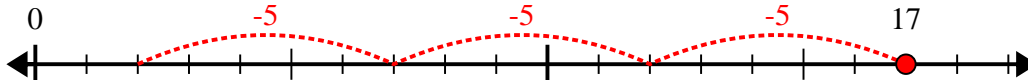


Use the number line to solve the division problem.

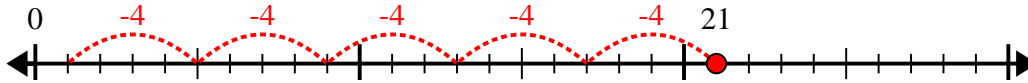
1) $42 \div 5 =$



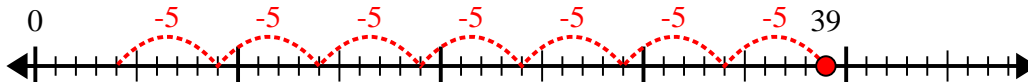
2) $17 \div 5 =$



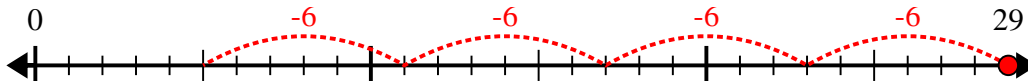
3) $21 \div 4 =$



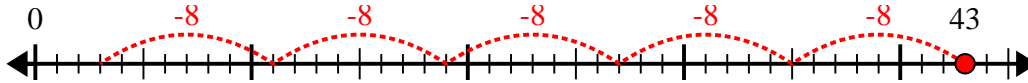
4) $39 \div 5 =$



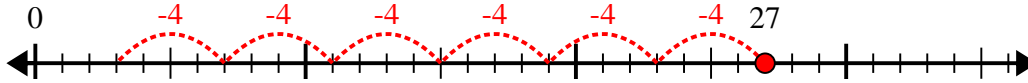
5) $29 \div 6 =$



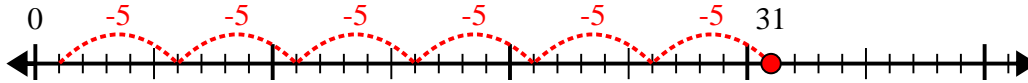
6) $43 \div 8 =$



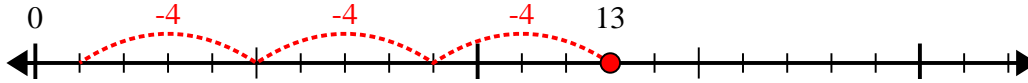
7) $27 \div 4 =$



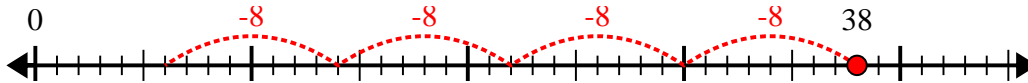
8) $31 \div 5 =$



9) $13 \div 4 =$



10) $38 \div 8 =$



Answers

1. 8r2

2. 3r2

3. 5r1

4. 7r4

5. 4r5

6. 5r3

7. 6r3

8. 6r1

9. 3r1

10. 4r6